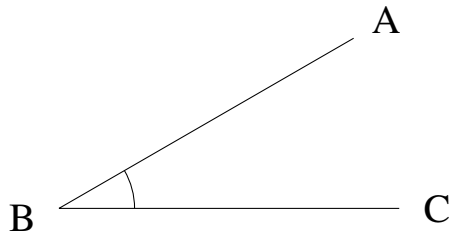


## Mesure d'Angles (J)

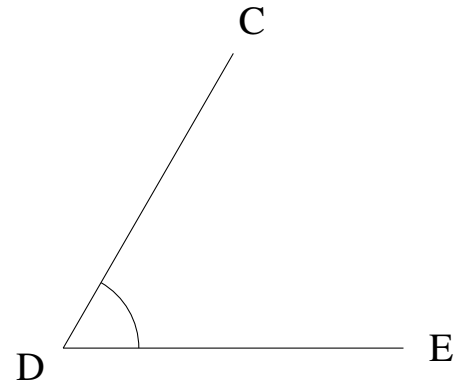
Estimez et ensuite mesurez à l'aide d'un rapporteur la valeur de chaque angle.

1.



$$m\angle ABC =$$

2.



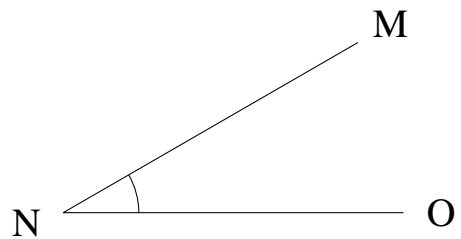
$$m\angle CDE =$$

3.



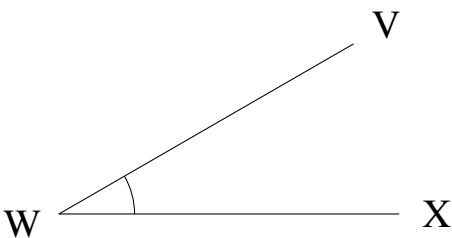
$$m\angle NOP =$$

4.



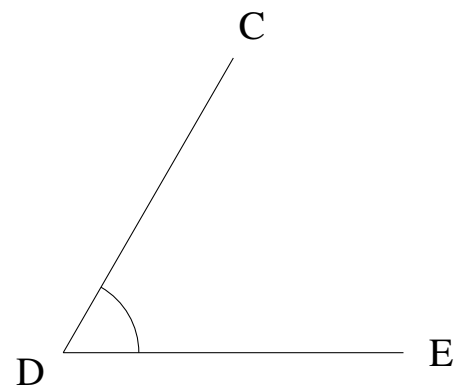
$$m\angle MNO =$$

5.



$$m\angle VWX =$$

6.

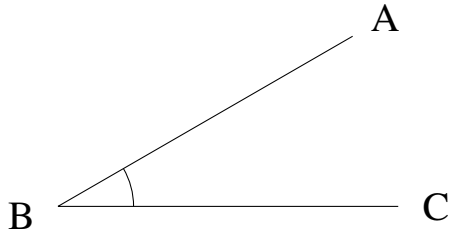


$$m\angle CDE =$$

## Mesure d'Angles (J) Solutions

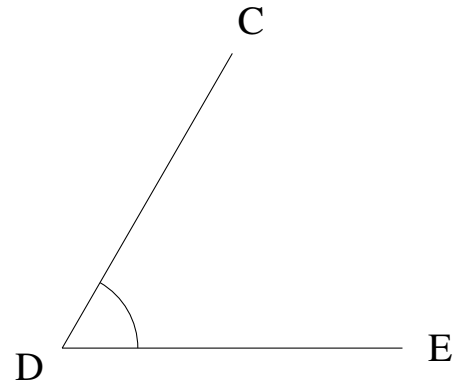
Estimez et ensuite mesurez à l'aide d'un rapporteur la valeur de chaque angle.

1.



$$m\angle ABC = 30^\circ$$

2.



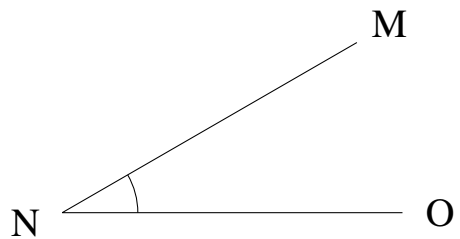
$$m\angle CDE = 60^\circ$$

3.



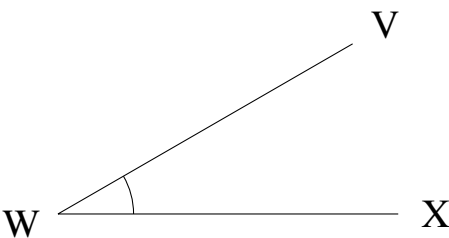
$$m\angle NOP = 0^\circ$$

4.



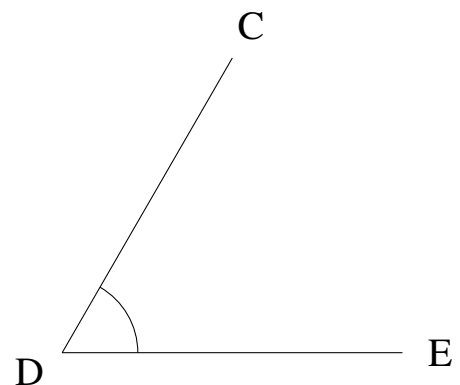
$$m\angle MNO = 30^\circ$$

5.



$$m\angle VWX = 30^\circ$$

6.



$$m\angle CDE = 60^\circ$$