


Mesure d'Angles (E)


Estimez et ensuite mesurez à l'aide d'un rapporteur la valeur de chaque angle.

1.



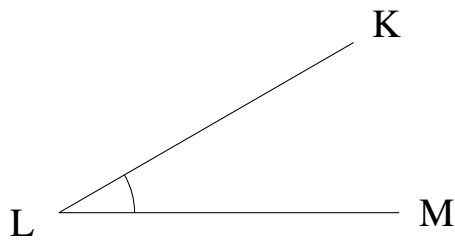
$$m\angle BCD =$$

2.



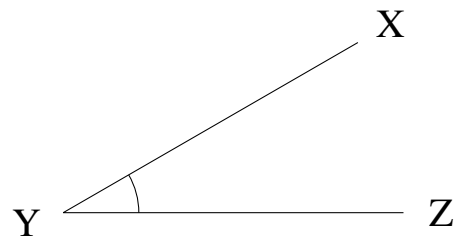
$$m\angle RST =$$

3.



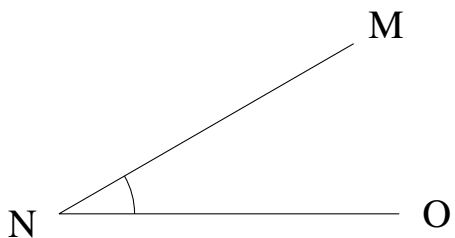
$$m\angle KLM =$$

4.




$$m\angle XYZ =$$

5.



$$m\angle MNO =$$

6.



$$m\angle HIJ =$$