


## Mesure d'Angles (E)


Estimez et ensuite mesurez à l'aide d'un rapporteur la valeur de chaque angle.

1.



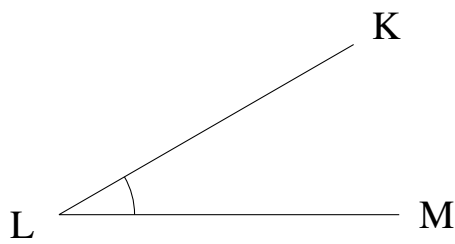
$$m\angle BCD =$$

2.



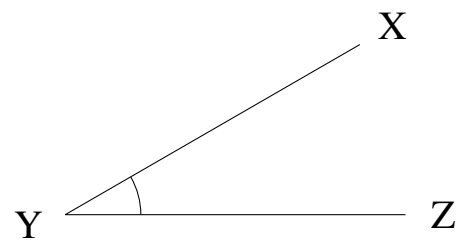
$$m\angle RST =$$

3.



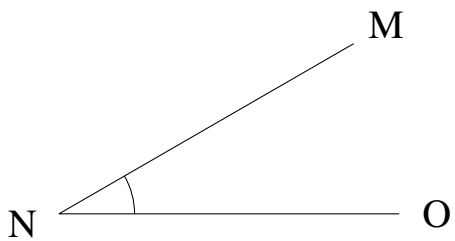
$$m\angle KLM =$$

4.




$$m\angle XYZ =$$

5.



$$m\angle MNO =$$

6.




$$m\angle HIJ =$$

## Mesure d'Angles (E) Solutions


Estimez et ensuite mesurez à l'aide d'un rapporteur la valeur de chaque angle.

1.



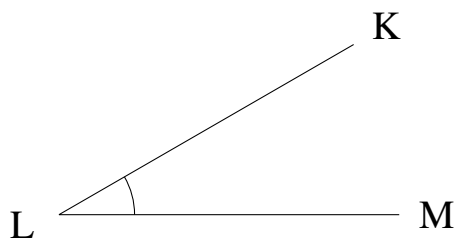
$$m\angle BCD = 0^\circ$$

2.



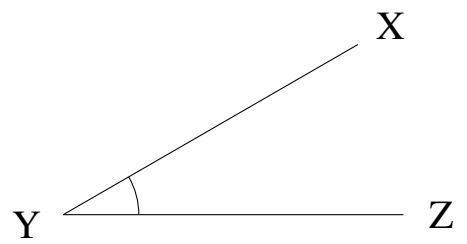
$$m\angle RST = 0^\circ$$

3.



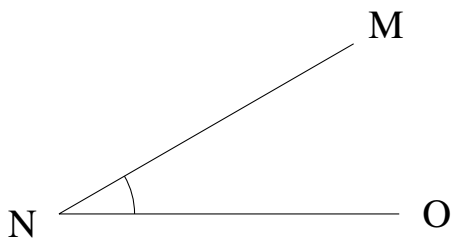
$$m\angle KLM = 30^\circ$$

4.




$$m\angle XYZ = 30^\circ$$

5.



$$m\angle MNO = 30^\circ$$

6.



$$m\angle HIJ = 0^\circ$$