


## Mesure d'Angles (D)

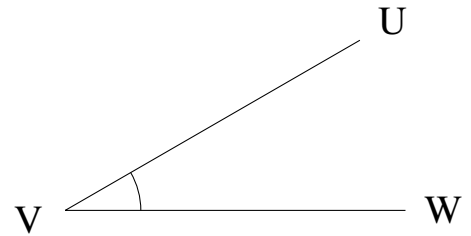
Estimez et ensuite mesurez à l'aide d'un rapporteur la valeur de chaque angle.

1.




$$m\angle CDE =$$

2.




$$m\angle UVW =$$

3.




$$m\angle MNO =$$

4.



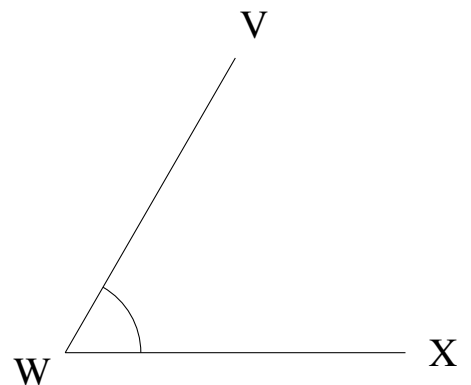
$$m\angle HIJ =$$

5.



$$m\angle MNO =$$

6.




$$m\angle VWX =$$

## Mesure d'Angles (D) Solutions

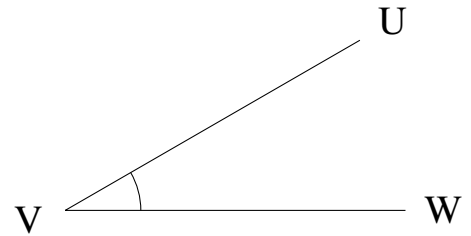
Estimez et ensuite mesurez à l'aide d'un rapporteur la valeur de chaque angle.

1.




$$m\angle CDE = 0^\circ$$

2.




$$m\angle UVW = 30^\circ$$

3.




$$m\angle MNO = 0^\circ$$

4.



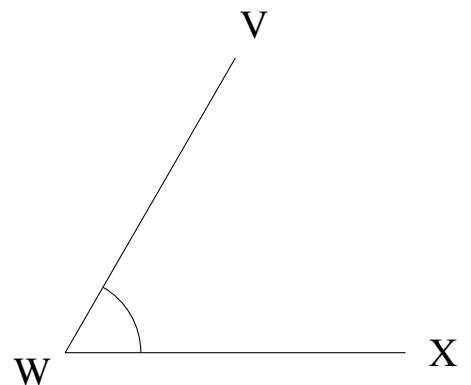
$$m\angle HIJ = 0^\circ$$

5.



$$m\angle MNO = 0^\circ$$

6.



$$m\angle VWX = 60^\circ$$