


Mesure d'Angles (B)

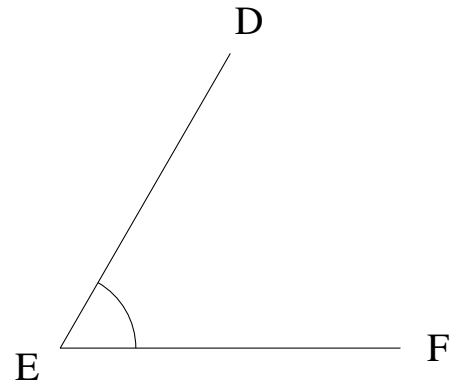
Estimez et ensuite mesurez à l'aide d'un rapporteur la valeur de chaque angle.

1.




$$m\angle LMN =$$

2.



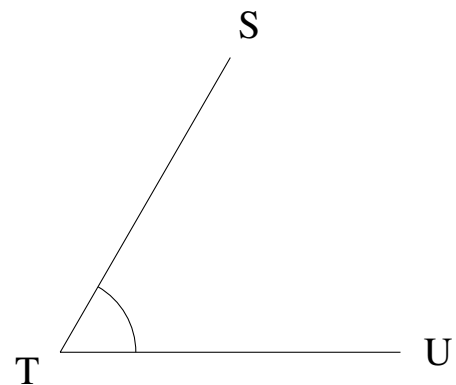
$$m\angle DEF =$$

3.



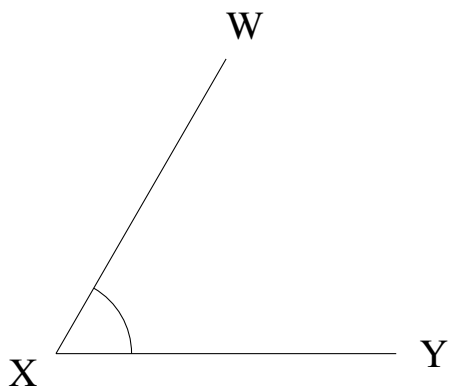
$$m\angle OPQ =$$

4.



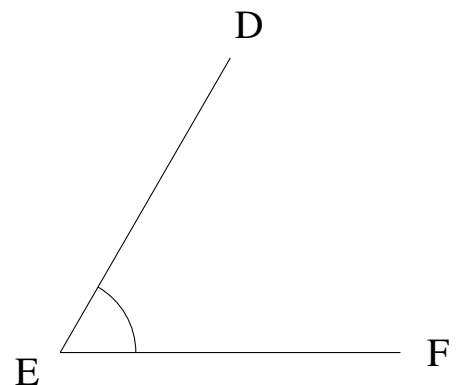
$$m\angle STU =$$

5.



$$m\angle WXY =$$

6.



$$m\angle DEF =$$