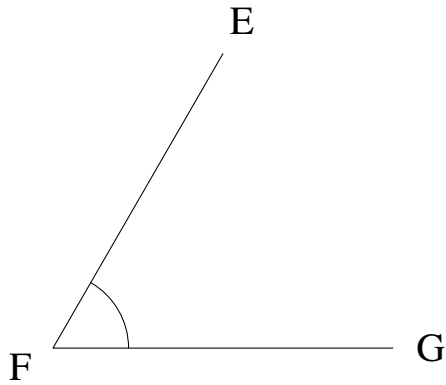


Mesure d'Angles (A)

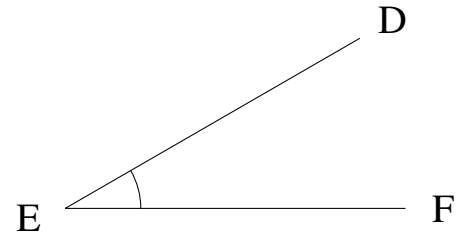
Estimez et ensuite mesurez à l'aide d'un rapporteur la valeur de chaque angle.

1.



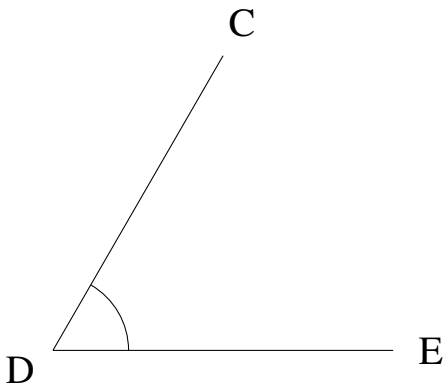
$$m\angle EFG =$$

2.



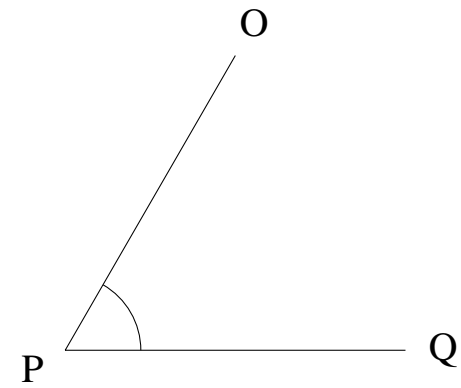
$$m\angle DEF =$$

3.




$$m\angle CDE =$$

4.



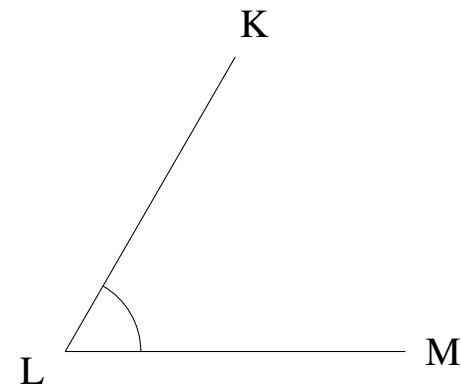
$$m\angle OPQ =$$

5.



$$m\angle FGH =$$

6.



$$m\angle KLM =$$