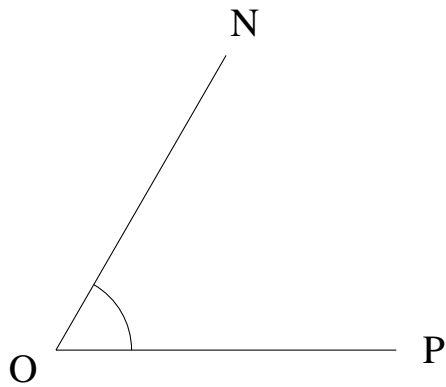


Mesure d'Angles (C)

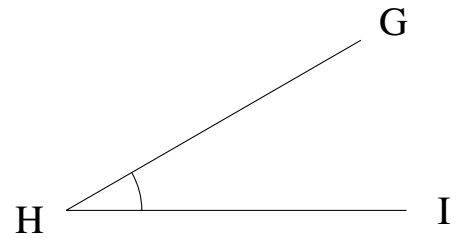
Estimez et ensuite mesurez à l'aide d'un rapporteur la valeur de chaque angle.

1.




$$m\angle NOP =$$

2.



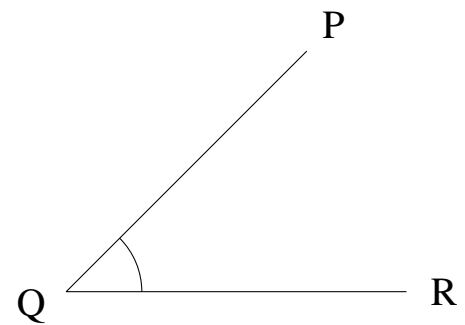
$$m\angle GHI =$$

3.



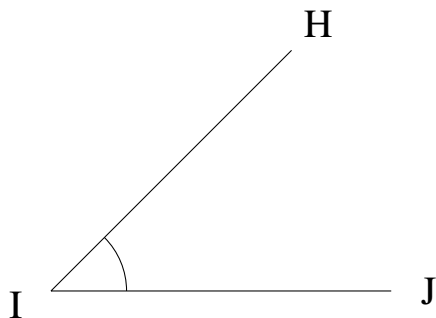
$$m\angle STU =$$

4.



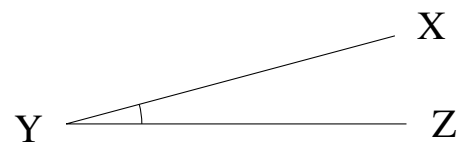
$$m\angle PQR =$$

5.



$$m\angle HIJ =$$

6.

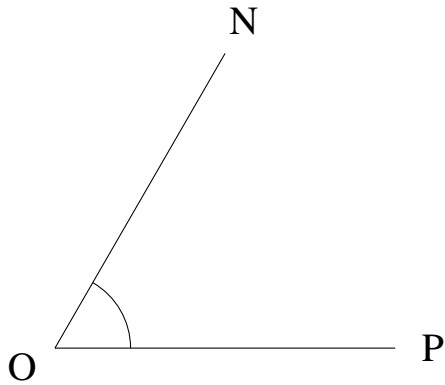


$$m\angle XYZ =$$

Mesure d'Angles (C) Solutions

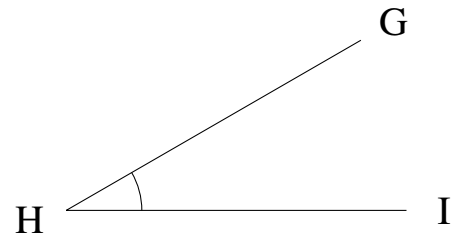
Estimez et ensuite mesurez à l'aide d'un rapporteur la valeur de chaque angle.

1.




$$m\angle NOP = 60^\circ$$

2.



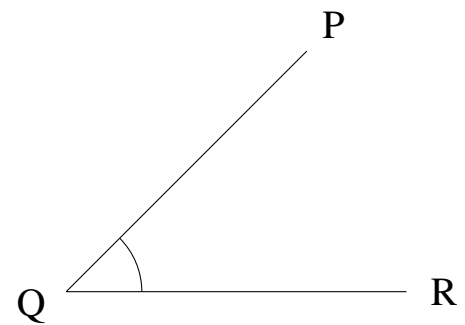
$$m\angle GHI = 30^\circ$$

3.



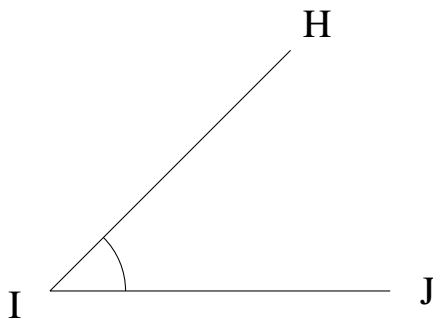
$$m\angle STU = 0^\circ$$

4.



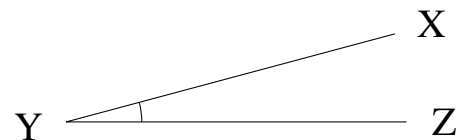
$$m\angle PQR = 45^\circ$$

5.



$$m\angle HIJ = 45^\circ$$

6.



$$m\angle XYZ = 15^\circ$$