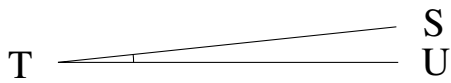


Mesure d'Angles (I)

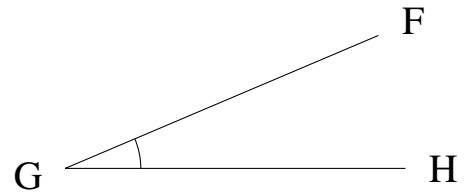
Estimez et ensuite mesurez à l'aide d'un rapporteur la valeur de chaque angle.

1.



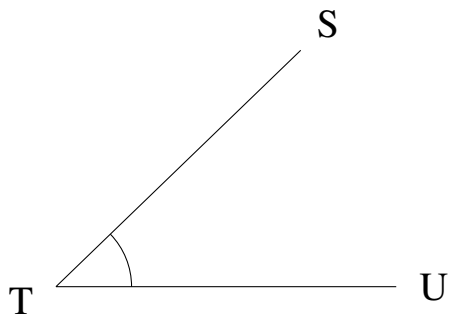
$$m\angle STU =$$

2.



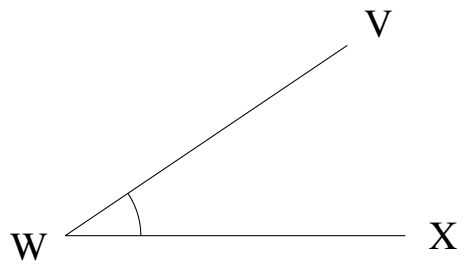
$$m\angle FGH =$$

3.



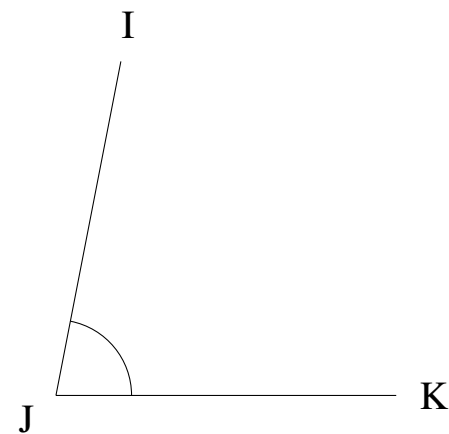
$$m\angle STU =$$

4.



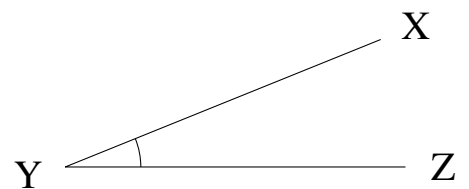
$$m\angle VWX =$$

5.



$$m\angle IJK =$$

6.

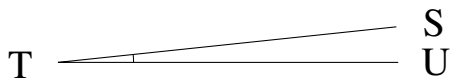


$$m\angle XYZ =$$

Mesure d'Angles (I) Solutions

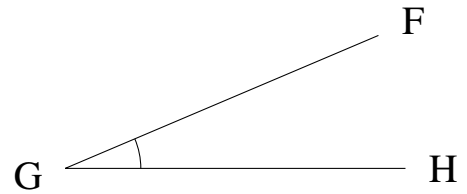
Estimez et ensuite mesurez à l'aide d'un rapporteur la valeur de chaque angle.

1.



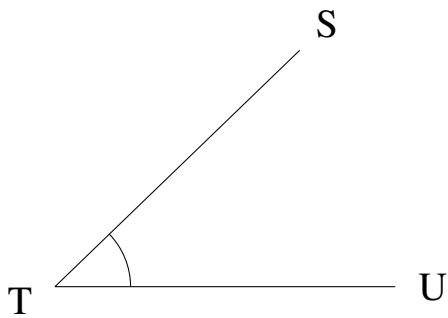
$$m\angle STU = 6^\circ$$

2.



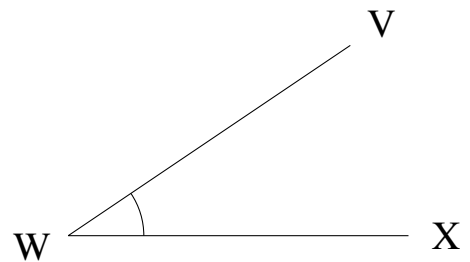
$$m\angle FGH = 23^\circ$$

3.



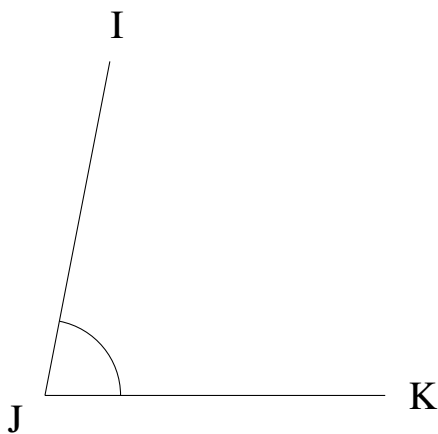
$$m\angle STU = 44^\circ$$

4.



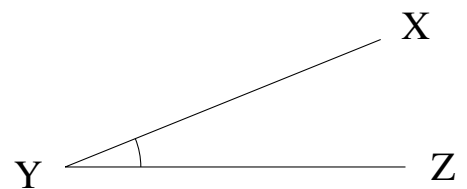
$$m\angle VWX = 34^\circ$$

5.



$$m\angle IJK = 79^\circ$$

6.



$$m\angle XYZ = 22^\circ$$