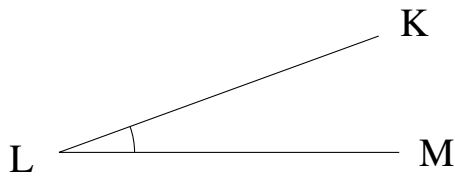


Mesure d'Angles (F)

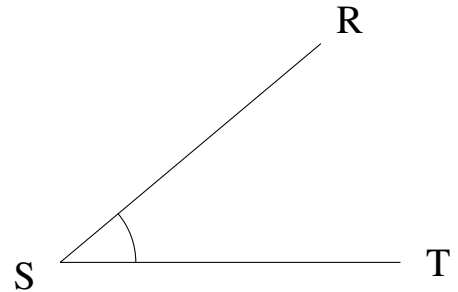
Estimez et ensuite mesurez à l'aide d'un rapporteur la valeur de chaque angle.

1.



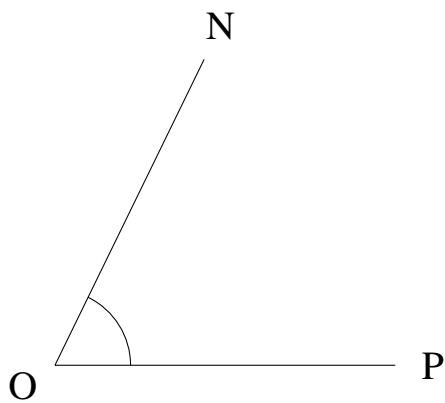
$$m\angle KLM =$$

2.



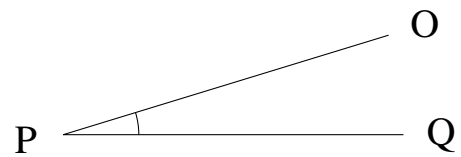
$$m\angle RST =$$

3.



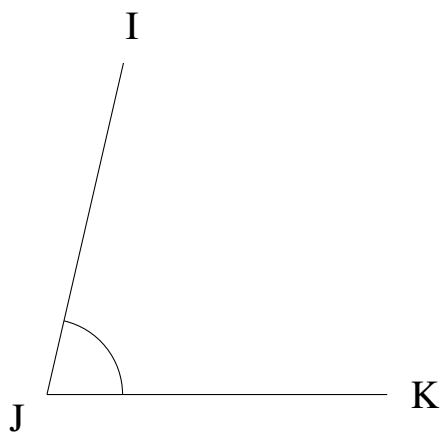
$$m\angle NOP =$$

4.



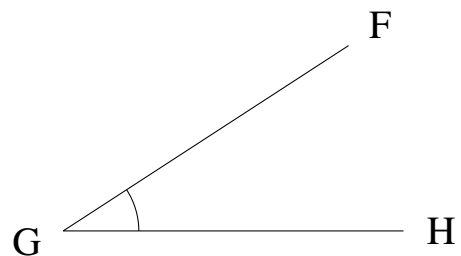
$$m\angle OPQ =$$

5.



$$m\angle IJK =$$

6.



$$m\angle FGH =$$