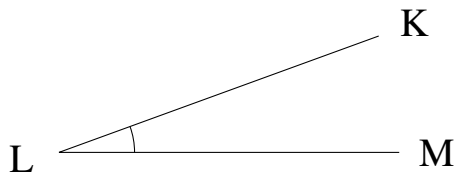


Mesure d'Angles (F)

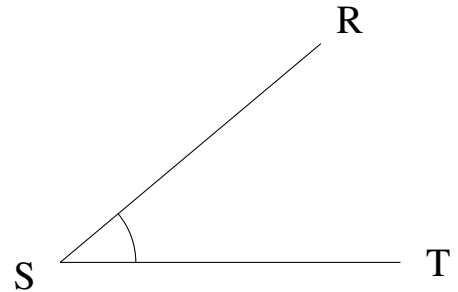
Estimez et ensuite mesurez à l'aide d'un rapporteur la valeur de chaque angle.

1.



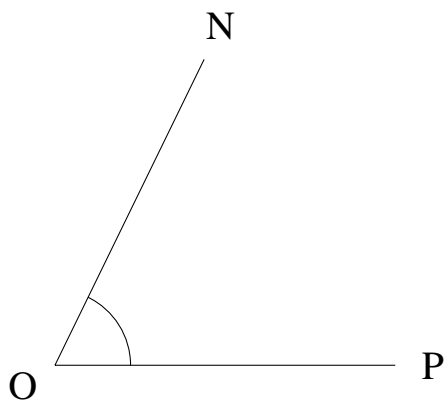
$$m\angle KLM =$$

2.



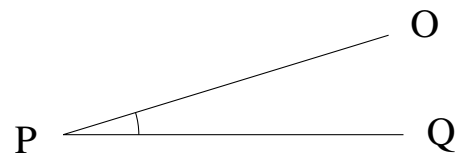
$$m\angle RST =$$

3.



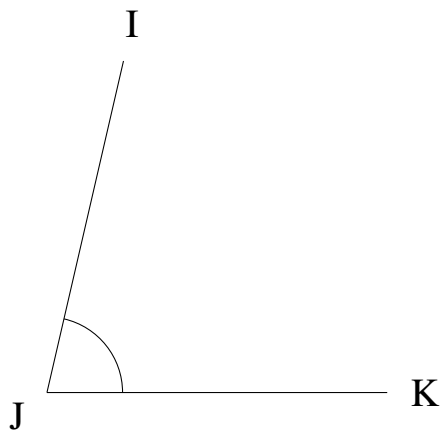
$$m\angle NOP =$$

4.



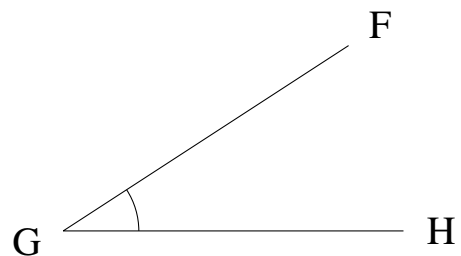
$$m\angle OPQ =$$

5.



$$m\angle IJK =$$

6.

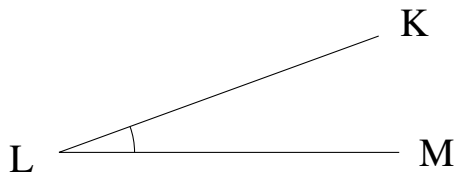


$$m\angle FGH =$$

Mesure d'Angles (F) Solutions

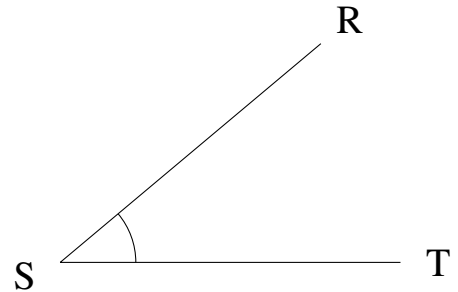
Estimez et ensuite mesurez à l'aide d'un rapporteur la valeur de chaque angle.

1.



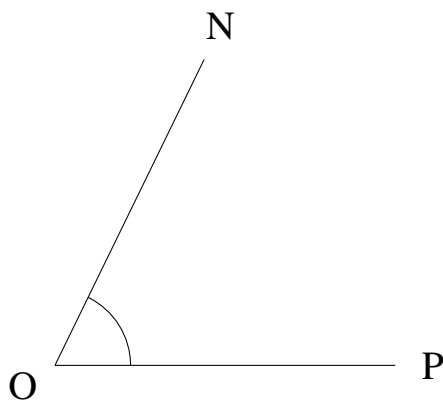
$$m\angle KLM = 20^\circ$$

2.



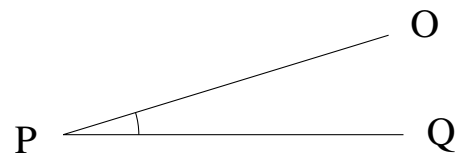
$$m\angle RST = 40^\circ$$

3.



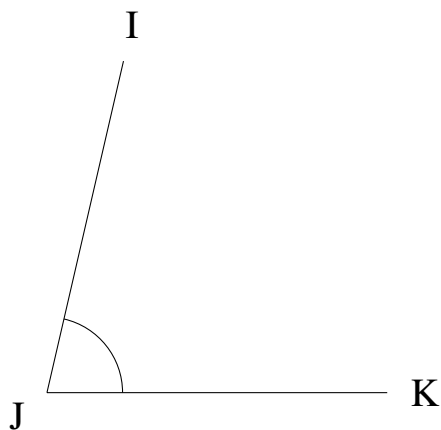
$$m\angle NOP = 64^\circ$$

4.



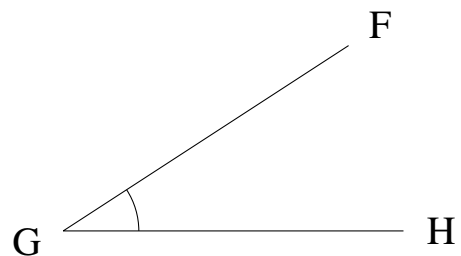
$$m\angle OPQ = 17^\circ$$

5.



$$m\angle IJK = 77^\circ$$

6.



$$m\angle FGH = 33^\circ$$