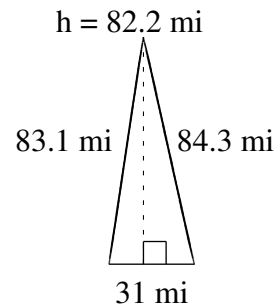
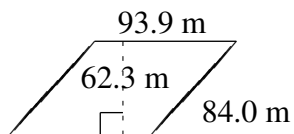
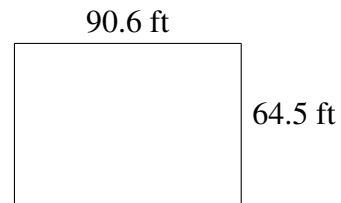
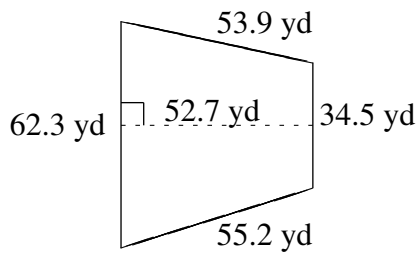
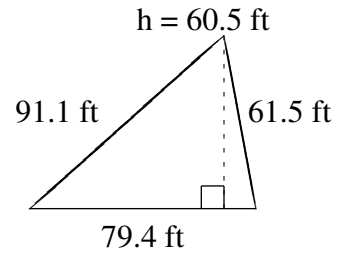
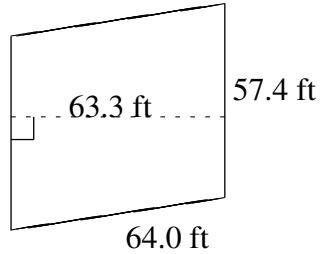


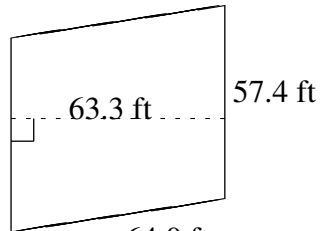
# Aire et Périmètre de Polygones (E)

Trouvez l'aire et le périmètre de chaque polygone.

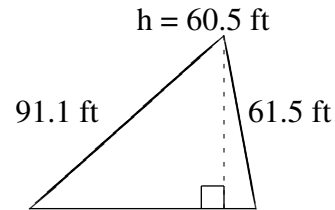


# Aire et Périmètre de Polygones (E) Solutions

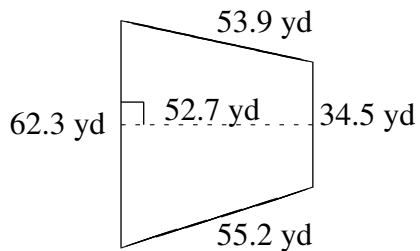
Trouvez l'aire et le périmètre de chaque polygone.



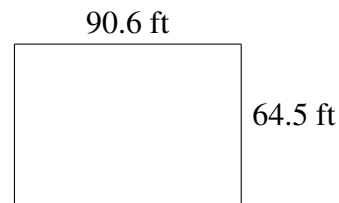
$$A = 3633.42 \text{ ft}^2$$
$$P = 242.8 \text{ ft}$$



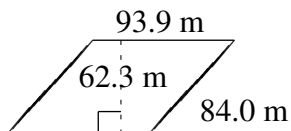
$$A = 2401.85 \text{ ft}^2$$
$$P = 232.0 \text{ ft}$$



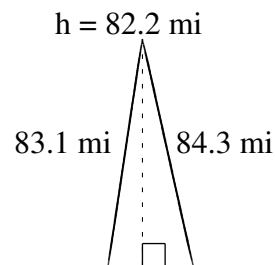
$$A = 2550.68 \text{ yd}^2$$
$$P = 205.9 \text{ yd}$$



$$A = 5843.70 \text{ ft}^2$$
$$P = 310.2 \text{ ft}$$



$$A = 5849.97 \text{ m}^2$$
$$P = 355.8 \text{ m}$$



$$A = 1274.1 \text{ mi}^2$$
$$P = 198.4 \text{ mi}$$