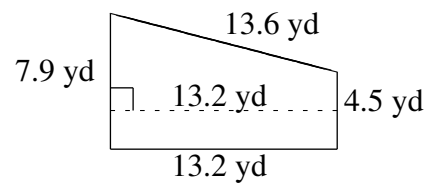
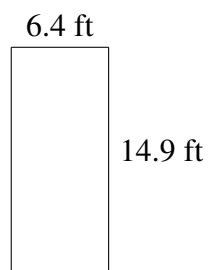
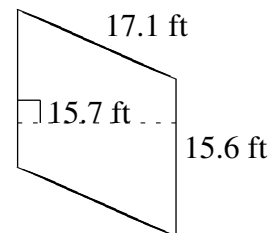
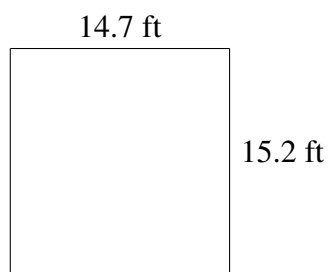
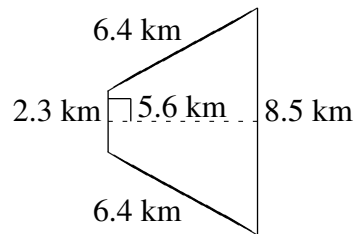
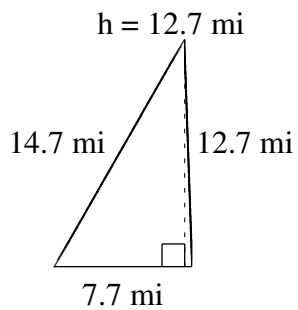


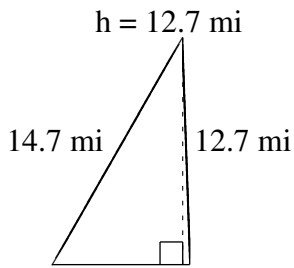
Aire et Périmètre de Polygones (J)

Trouvez l'aire et le périmètre de chaque polygone.

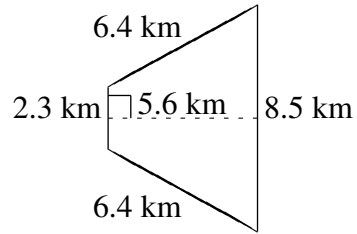


Aire et Périmètre de Polygones (J) Solutions

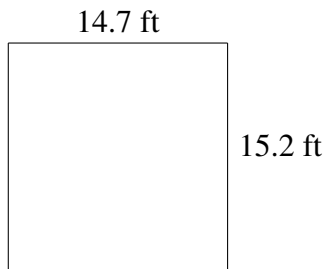
Trouvez l'aire et le périmètre de chaque polygone.



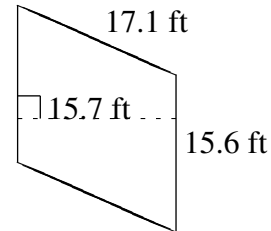
$$A = 48.895 \text{ mi}^2$$
$$P = 35.1 \text{ mi}$$



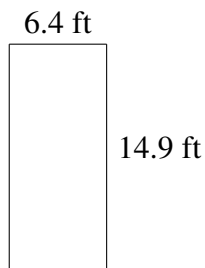
$$A = 30.24 \text{ km}^2$$
$$P = 23.6 \text{ km}$$




$$A = 223.44 \text{ ft}^2$$
$$P = 59.8 \text{ ft}$$



$$A = 244.92 \text{ ft}^2$$
$$P = 65.4 \text{ ft}$$



$$A = 95.36 \text{ ft}^2$$
$$P = 42.6 \text{ ft}$$



$$A = 81.84 \text{ yd}^2$$
$$P = 39.2 \text{ yd}$$