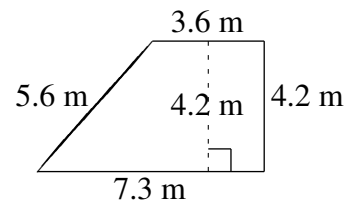
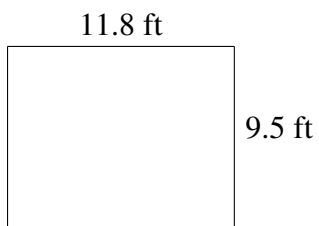
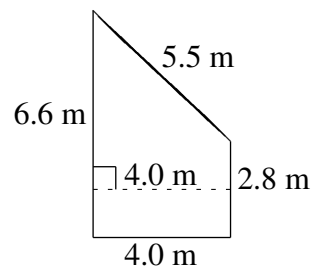
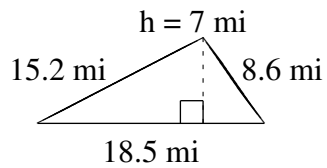
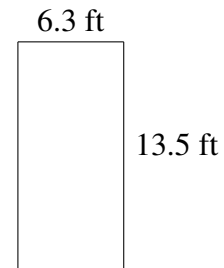
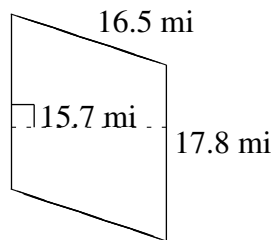


Aire et Périmètre de Polygones (H)

Trouvez l'aire et le périmètre de chaque polygone.



Aire et Périmètre de Polygones (H) Solutions

Trouvez l'aire et le périmètre de chaque polygone.

