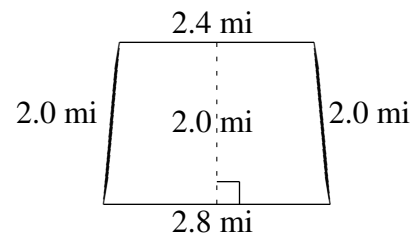
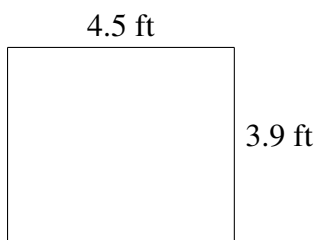
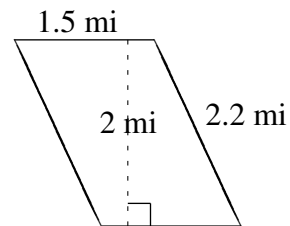
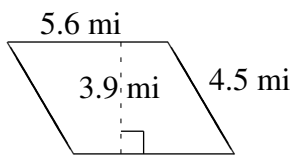
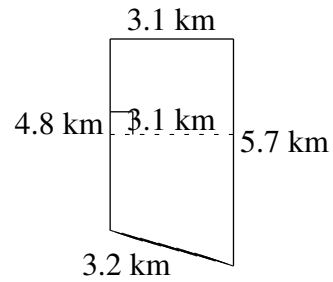
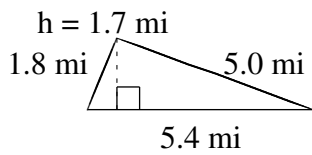


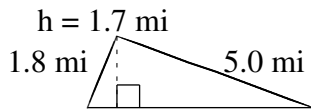
Aire et Périmètre de Polygones (I)

Trouvez l'aire et le périmètre de chaque polygone.

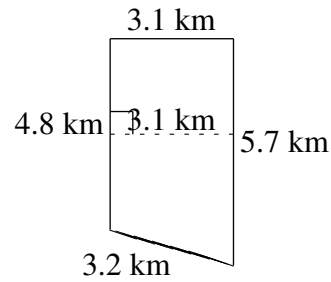


Aire et Périmètre de Polygones (I) Solutions

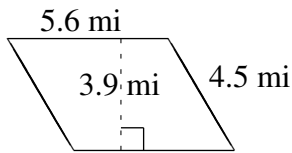
Trouvez l'aire et le périmètre de chaque polygone.



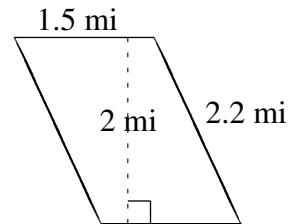
$$A = 4.59 \text{ mi}^2$$
$$P = 12.2 \text{ mi}$$



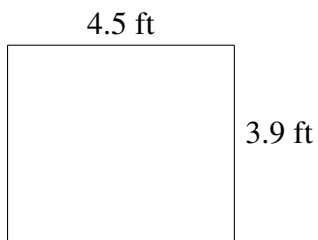
$$A = 16.275 \text{ km}^2$$
$$P = 16.8 \text{ km}$$



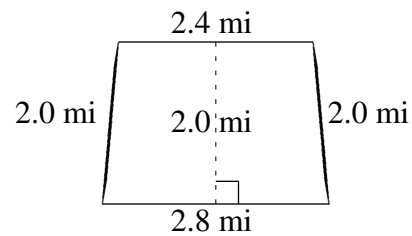
$$A = 21.84 \text{ mi}^2$$
$$P = 20.2 \text{ mi}$$



$$A = 3.0 \text{ mi}^2$$
$$P = 7.4 \text{ mi}$$



$$A = 17.55 \text{ ft}^2$$
$$P = 16.8 \text{ ft}$$



$$A = 5.20 \text{ mi}^2$$
$$P = 9.2 \text{ mi}$$