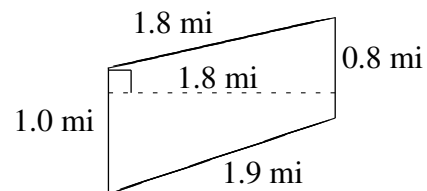
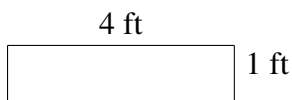
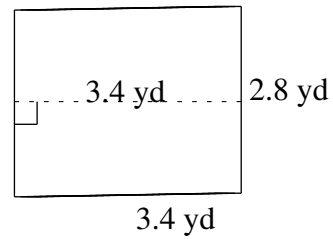
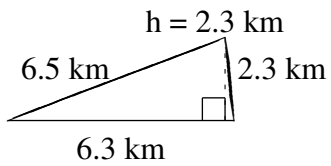
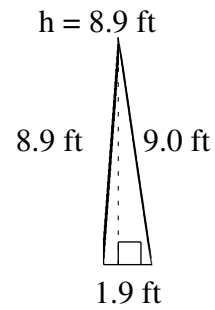
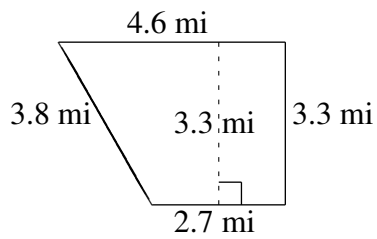


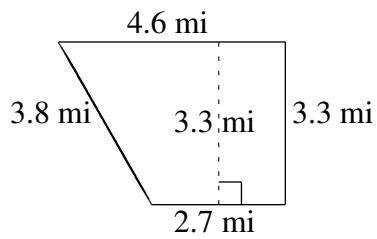
Aire et Périmètre de Polygones (G)

Trouvez l'aire et le périmètre de chaque polygone.



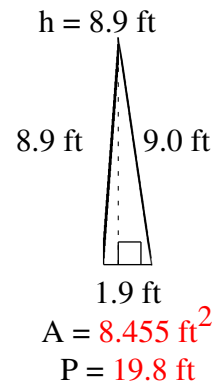
Aire et Périmètre de Polygones (G) Solutions

Trouvez l'aire et le périmètre de chaque polygone.



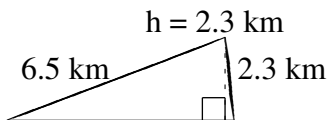
$$A = 12.045 \text{ mi}^2$$

$$P = 14.4 \text{ mi}$$



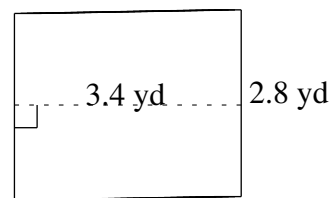
$$A = 8.455 \text{ ft}^2$$

$$P = 19.8 \text{ ft}$$



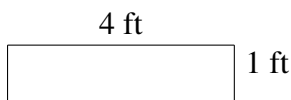
$$A = 7.245 \text{ km}^2$$

$$P = 15.1 \text{ km}$$



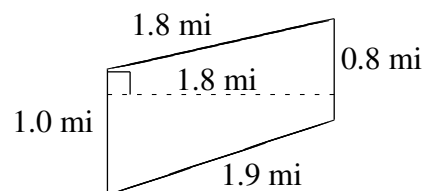
$$A = 9.52 \text{ yd}^2$$

$$P = 12.4 \text{ yd}$$



$$A = 4 \text{ ft}^2$$

$$P = 10 \text{ ft}$$



$$A = 1.62 \text{ mi}^2$$

$$P = 5.5 \text{ mi}$$