

# À Travers la Forêt Hantée (A)

Trouvez chaque somme pour vous sortir de la forêt hantée.

7  
+3

6  
+9

6  
+6

6  
+4

2  
+7

6  
+7

7  
+9

1  
+6

3  
+1

2  
+8

5  
+3

4  
+9

6  
+3

7  
+8

1  
+9

7  
+4

7  
+6

2  
+7

2  
+5

9  
+2

6  
+6

2  
+7

2  
+5

4  
+9

6  
+4

1  
+4

5  
+9

# À Travers la Forêt Hantée (A) Solutions

Trouvez chaque somme pour vous sortir de la forêt hantée.



$$\begin{array}{r} 7 \\ +3 \\ \hline 10 \end{array}$$

$$\begin{array}{r} 6 \\ +9 \\ \hline 15 \end{array}$$

$$\begin{array}{r} 6 \\ +6 \\ \hline 12 \end{array}$$


$$\begin{array}{r} 6 \\ +4 \\ \hline 10 \end{array}$$

$$\begin{array}{r} 2 \\ +7 \\ \hline 9 \end{array}$$

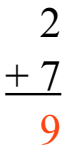


$$\begin{array}{r} 6 \\ +7 \\ \hline 13 \end{array}$$

$$\begin{array}{r} 7 \\ +9 \\ \hline 16 \end{array}$$



$$\begin{array}{r} 1 \\ +6 \\ \hline 7 \end{array}$$



$$\begin{array}{r} 3 \\ +1 \\ \hline 4 \end{array}$$



$$\begin{array}{r} 5 \\ +3 \\ \hline 8 \end{array}$$

$$\begin{array}{r} 2 \\ +8 \\ \hline 10 \end{array}$$



$$\begin{array}{r} 4 \\ +9 \\ \hline 13 \end{array}$$

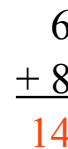
$$\begin{array}{r} 6 \\ +3 \\ \hline 9 \end{array}$$

$$\begin{array}{r} 6 \\ +8 \\ \hline 14 \end{array}$$

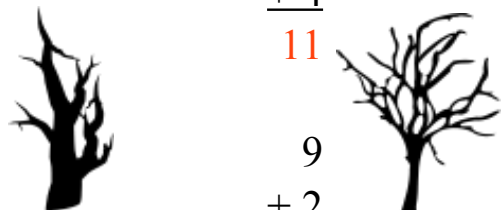


$$\begin{array}{r} 7 \\ +4 \\ \hline 11 \end{array}$$

$$\begin{array}{r} 7 \\ +6 \\ \hline 13 \end{array}$$



$$\begin{array}{r} 1 \\ +9 \\ \hline 10 \end{array}$$



$$\begin{array}{r} 9 \\ +2 \\ \hline 11 \end{array}$$

$$\begin{array}{r} 6 \\ +6 \\ \hline 12 \end{array}$$

$$\begin{array}{r} 2 \\ +7 \\ \hline 9 \end{array}$$

$$\begin{array}{r} 2 \\ +5 \\ \hline 7 \end{array}$$



$$\begin{array}{r} 4 \\ +9 \\ \hline 13 \end{array}$$



$$\begin{array}{r} 6 \\ +4 \\ \hline 10 \end{array}$$



$$\begin{array}{r} 1 \\ +4 \\ \hline 5 \end{array}$$



$$\begin{array}{r} 5 \\ +9 \\ \hline 14 \end{array}$$



# À Travers la Forêt Hantée (B)

Trouvez chaque somme pour vous sortir de la forêt hantée.

5  
+2

4  
+8

5  
+3

9  
+1

4  
+2

3  
+7

1  
+4

8  
+7

5  
+3

1  
+8

3  
+2

8  
+5

2  
+7

1  
+8

4  
+6

8  
+5

4  
+6

2  
+6

4  
+4

9  
+3

9  
+9

8  
+8

8  
+7

4  
+1

# À Travers la Forêt Hantée (B) Solutions

Trouvez chaque somme pour vous sortir de la forêt hantée.

5  
+2  
7

4  
+8  
12

5  
+3  
8

9  
+1  
10

4  
+2  
6

3  
+7  
10

1  
+4  
5

8  
+7  
15

8  
+5  
13

5  
+3  
8

1  
+8  
9

2  
+7  
9

3  
+2  
5

2  
+9  
11

4  
+6  
10

4  
+5  
9

1  
+8  
9

2  
+6  
8

4  
+6  
10

2  
+6  
8

4  
+1  
5

4  
+4  
8

4  
+6  
10

2  
+6  
8

9  
+9  
18

8  
+8  
16

9  
+3  
12

8  
+7  
15

# À Travers la Forêt Hantée (C)

Trouvez chaque somme pour vous sortir de la forêt hantée.

2  
+7

6  
+1

2  
+7

4  
+5

5  
+8

5  
+5

2  
+7

5  
+3

3  
+2

3  
+1

8  
+7

3  
+8

8  
+3

8  
+9

9  
+2

5  
+6

8  
+8

7  
+6

3  
+5

6  
+4

9  
+4

2  
+5





















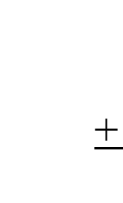

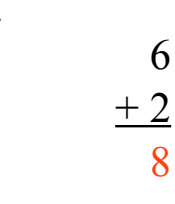










6  
+2

7  
+9

5  
+8

# À Travers la Forêt Hantée (C) Solutions

Trouvez chaque somme pour vous sortir de la forêt hantée.

	$\begin{array}{r} 2 \\ +7 \\ \hline 9 \end{array}$		$\begin{array}{r} 6 \\ +1 \\ \hline 7 \end{array}$		$\begin{array}{r} 2 \\ +7 \\ \hline 9 \end{array}$	
	$\begin{array}{r} 5 \\ +5 \\ \hline 10 \end{array}$		$\begin{array}{r} 4 \\ +5 \\ \hline 9 \end{array}$		$\begin{array}{r} 5 \\ +8 \\ \hline 13 \end{array}$	
	$\begin{array}{r} 2 \\ +1 \\ \hline 3 \end{array}$		$\begin{array}{r} 8 \\ +7 \\ \hline 15 \end{array}$		$\begin{array}{r} 3 \\ +2 \\ \hline 5 \end{array}$	
	$\begin{array}{r} 8 \\ +3 \\ \hline 11 \end{array}$		$\begin{array}{r} 3 \\ +8 \\ \hline 11 \end{array}$		$\begin{array}{r} 5 \\ +6 \\ \hline 11 \end{array}$	
	$\begin{array}{r} 8 \\ +9 \\ \hline 17 \end{array}$		$\begin{array}{r} 9 \\ +2 \\ \hline 11 \end{array}$		$\begin{array}{r} 8 \\ +8 \\ \hline 16 \end{array}$	
	$\begin{array}{r} 7 \\ +6 \\ \hline 13 \end{array}$		$\begin{array}{r} 6 \\ +4 \\ \hline 10 \end{array}$		$\begin{array}{r} 9 \\ +4 \\ \hline 13 \end{array}$	
$\begin{array}{r} 2 \\ +5 \\ \hline 7 \end{array}$		$\begin{array}{r} 3 \\ +5 \\ \hline 8 \end{array}$	$\begin{array}{r} 6 \\ +2 \\ \hline 8 \end{array}$			
	$\begin{array}{r} 7 \\ +9 \\ \hline 16 \end{array}$		$\begin{array}{r} 6 \\ +8 \\ \hline 13 \end{array}$			

# À Travers la Forêt Hantée (D)

Trouvez chaque somme pour vous sortir de la forêt hantée.

5  
+5

2  
+2

1  
+6

4  
+2

8  
+3

9  
+8

2  
+9

8  
+5

4  
+7

3  
+3

8  
+7

3  
+7

1  
+2

7  
+1

6  
+4

3  
+7

9  
+5

5  
+7

9  
+4

9  
+8

9  
+5

9  
+8

9  
+2

# À Travers la Forêt Hantée (D) Solutions

Trouvez chaque somme pour vous sortir de la forêt hantée.

2  
+2  
4

1  
+6  
7

5  
+5  
10

4  
+2  
6

8  
+3  
11

9  
+8  
17

2  
+9  
11

8  
+5  
13

4  
+7  
11

3  
+7  
10

8  
+7  
15

3  
+3  
6

1  
+2  
3

7  
+1  
8

3  
+7  
10

6  
+4  
10

1  
+2  
3

9  
+5  
14

9  
+7  
10

9  
+5  
14

5  
+7  
12

9  
+4  
13

9  
+8  
17

9  
+2  
11

9  
+8  
17

9  
+2  
11



# À Travers la Forêt Hantée (E)

Trouvez chaque somme pour vous sortir de la forêt hantée.

7  
+5

4  
+8

5  
+9

4  
+4

6  
+3

8  
+1

7  
+7

5  
+8

8  
+3

7  
+1

5  
+7

3  
+3

8  
+4

9  
+4

3  
+3

8  
+7

5  
+8

6  
+1

7  
+4



















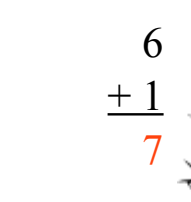











8  
+2

5  
+7

2  
+3

# À Travers la Forêt Hantée (E) Solutions

Trouvez chaque somme pour vous sortir de la forêt hantée.

	$\begin{array}{r} 7 \\ +5 \\ \hline 12 \end{array}$		$\begin{array}{r} 4 \\ +8 \\ \hline 12 \end{array}$		$\begin{array}{r} 5 \\ +5 \\ \hline 10 \end{array}$		$\begin{array}{r} 5 \\ +9 \\ \hline 14 \end{array}$		$\begin{array}{r} 7 \\ +7 \\ \hline 14 \end{array}$
	$\begin{array}{r} 4 \\ +4 \\ \hline 8 \end{array}$		$\begin{array}{r} 6 \\ +3 \\ \hline 9 \end{array}$		$\begin{array}{r} 8 \\ +1 \\ \hline 9 \end{array}$		$\begin{array}{r} 5 \\ +8 \\ \hline 13 \end{array}$		$\begin{array}{r} 7 \\ +1 \\ \hline 8 \end{array}$
	$\begin{array}{r} 4 \\ +5 \\ \hline 9 \end{array}$		$\begin{array}{r} 7 \\ +1 \\ \hline 8 \end{array}$		$\begin{array}{r} 5 \\ +7 \\ \hline 12 \end{array}$		$\begin{array}{r} 2 \\ +4 \\ \hline 6 \end{array}$		$\begin{array}{r} 9 \\ +4 \\ \hline 13 \end{array}$
	$\begin{array}{r} 8 \\ +3 \\ \hline 11 \end{array}$		$\begin{array}{r} 8 \\ +7 \\ \hline 15 \end{array}$		$\begin{array}{r} 5 \\ +8 \\ \hline 13 \end{array}$		$\begin{array}{r} 6 \\ +1 \\ \hline 7 \end{array}$		$\begin{array}{r} 9 \\ +4 \\ \hline 13 \end{array}$
	$\begin{array}{r} 9 \\ +4 \\ \hline 13 \end{array}$		$\begin{array}{r} 8 \\ +9 \\ \hline 17 \end{array}$		$\begin{array}{r} 5 \\ +2 \\ \hline 7 \end{array}$		$\begin{array}{r} 6 \\ +1 \\ \hline 7 \end{array}$		$\begin{array}{r} 7 \\ +4 \\ \hline 11 \end{array}$
	$\begin{array}{r} 5 \\ +7 \\ \hline 12 \end{array}$		$\begin{array}{r} 8 \\ +2 \\ \hline 10 \end{array}$		$\begin{array}{r} 2 \\ +3 \\ \hline 5 \end{array}$		$\begin{array}{r} 5 \\ +9 \\ \hline 14 \end{array}$		$\begin{array}{r} 7 \\ +7 \\ \hline 14 \end{array}$

# À Travers la Forêt Hantée (F)

Trouvez chaque somme pour vous sortir de la forêt hantée.

6  
+3

3  
+6

3  
+8

2  
+9

6  
+7

6  
+5

1  
+8

5  
+7

5  
+6

9  
+3

6  
+1

7  
+1

5  
+3

4  
+8

1  
+3

8  
+9

1  
+8

8  
+5

1  
+3

1  
+3

8  
+5

5  
+3

1  
+1

2  
+3

# À Travers la Forêt Hantée (F) Solutions

Trouvez chaque somme pour vous sortir de la forêt hantée.

3  
+6  
9

3  
+8  
11

6  
+3  
9

2  
+9  
11

6  
+7  
13

6  
+5  
11

1  
+8  
9

5  
+7  
12

5  
+6  
11

9  
+3  
12

6  
+1  
7

7  
+1  
8

9  
+3  
12

5  
+3  
8

4  
+8  
12

1  
+3  
4

1  
+8  
9

8  
+5  
13

1  
+5  
6

1  
+3  
4

8  
+9  
17

8  
+5  
13


5  
+3  
8

1  
+1  
2

2  
+3  
5

# À Travers la Forêt Hantée (G)

Trouvez chaque somme pour vous sortir de la forêt hantée.



6  
+3

9  
+6

9  
+2

5  
+2

8  
+8

2  
+1

5  
+2

7  
+7

2  
+3

9  
+6

3  
+9

4  
+2

4  
+3

5  
+2

5  
+2

1  
+2

8  
+1

2  
+7

7  
+8

1  
+8

6  
+1

1  
+4

7  
+2

6  
+7

1  
+2

7  
+8

3  
+5

9  
+2

9  
+6

3  
+9

4  
+2

1  
+8

6  
+1

1  
+4

7  
+2

6  
+7




















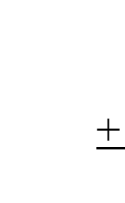

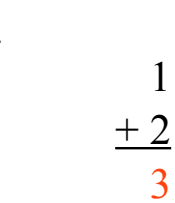








1  
+2

7  
+8

3  
+5


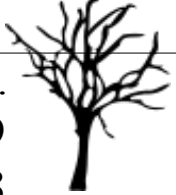
# À Travers la Forêt Hantée (G) Solutions


Trouvez chaque somme pour vous sortir de la forêt hantée.

	$\begin{array}{r} 6 \\ +3 \\ \hline 9 \end{array}$		$\begin{array}{r} 9 \\ +6 \\ \hline 15 \end{array}$		$\begin{array}{r} 2 \\ +3 \\ \hline 5 \end{array}$	
	$\begin{array}{r} 9 \\ +6 \\ \hline 15 \end{array}$		$\begin{array}{r} 3 \\ +9 \\ \hline 12 \end{array}$		$\begin{array}{r} 2 \\ +7 \\ \hline 9 \end{array}$	$\begin{array}{r} 7 \\ +8 \\ \hline 15 \end{array}$
		$\begin{array}{r} 9 \\ +2 \\ \hline 11 \end{array}$			$\begin{array}{r} 4 \\ +2 \\ \hline 6 \end{array}$	
	$\begin{array}{r} 5 \\ +2 \\ \hline 7 \end{array}$		$\begin{array}{r} 4 \\ +3 \\ \hline 7 \end{array}$		$\begin{array}{r} 6 \\ +1 \\ \hline 7 \end{array}$	
	$\begin{array}{r} 8 \\ +8 \\ \hline 16 \end{array}$		$\begin{array}{r} 5 \\ +2 \\ \hline 7 \end{array}$		$\begin{array}{r} 1 \\ +4 \\ \hline 5 \end{array}$	$\begin{array}{r} 3 \\ +5 \\ \hline 8 \end{array}$
	$\begin{array}{r} 2 \\ +1 \\ \hline 3 \end{array}$		$\begin{array}{r} 5 \\ +2 \\ \hline 7 \end{array}$		$\begin{array}{r} 7 \\ +2 \\ \hline 9 \end{array}$	$\begin{array}{r} 6 \\ +7 \\ \hline 13 \end{array}$
$\begin{array}{r} 5 \\ +2 \\ \hline 7 \end{array}$		$\begin{array}{r} 1 \\ +2 \\ \hline 3 \end{array}$				
	$\begin{array}{r} 7 \\ +7 \\ \hline 14 \end{array}$		$\begin{array}{r} 8 \\ +1 \\ \hline 9 \end{array}$			

# À Travers la Forêt Hantée (H)

Trouvez chaque somme pour vous sortir de la forêt hantée.











$$\begin{array}{r} 6 \\ +5 \\ \hline \end{array}$$

$$\begin{array}{r} 6 \\ +9 \\ \hline \end{array}$$




$$\begin{array}{r} 7 \\ +4 \\ \hline \end{array}$$



$$\begin{array}{r} 9 \\ +8 \\ \hline \end{array}$$








$$\begin{array}{r} 5 \\ +9 \\ \hline \end{array}$$


$$\begin{array}{r} 1 \\ +6 \\ \hline \end{array}$$


$$\begin{array}{r} 9 \\ +2 \\ \hline \end{array}$$









$$\begin{array}{r} 6 \\ +3 \\ \hline \end{array}$$




$$\begin{array}{r} 2 \\ +4 \\ \hline \end{array}$$



$$\begin{array}{r} 3 \\ +9 \\ \hline \end{array}$$





$$\begin{array}{r} 1 \\ +9 \\ \hline \end{array}$$


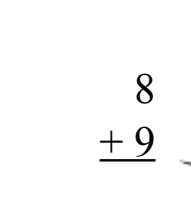
$$\begin{array}{r} 4 \\ +1 \\ \hline \end{array}$$


$$\begin{array}{r} 9 \\ +3 \\ \hline \end{array}$$



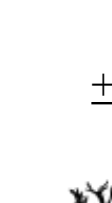



$$\begin{array}{r} 2 \\ +4 \\ \hline \end{array}$$


$$\begin{array}{r} 5 \\ +3 \\ \hline \end{array}$$





$$\begin{array}{r} 9 \\ +3 \\ \hline \end{array}$$



$$\begin{array}{r} 5 \\ +1 \\ \hline \end{array}$$






$$\begin{array}{r} 9 \\ +9 \\ \hline \end{array}$$



$$\begin{array}{r} 4 \\ +4 \\ \hline \end{array}$$


$$\begin{array}{r} 8 \\ +9 \\ \hline \end{array}$$




$$\begin{array}{r} 6 \\ +8 \\ \hline \end{array}$$


$$\begin{array}{r} 3 \\ +4 \\ \hline \end{array}$$





















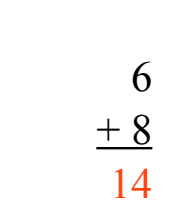













$$\begin{array}{r} 5 \\ +9 \\ \hline \end{array}$$


$$\begin{array}{r} 7 \\ +8 \\ \hline \end{array}$$


# À Travers la Forêt Hantée (H) Solutions

Trouvez chaque somme pour vous sortir de la forêt hantée.

	$\begin{array}{r} 6 \\ +5 \\ \hline 11 \end{array}$		$\begin{array}{r} 6 \\ +9 \\ \hline 15 \end{array}$		$\begin{array}{r} 9 \\ +8 \\ \hline 17 \end{array}$	
	$\begin{array}{r} 5 \\ +9 \\ \hline 14 \end{array}$		$\begin{array}{r} 1 \\ +6 \\ \hline 7 \end{array}$		$\begin{array}{r} 7 \\ +4 \\ \hline 11 \end{array}$	$\begin{array}{r} 3 \\ +3 \\ \hline 6 \end{array}$
	$\begin{array}{r} 6 \\ +3 \\ \hline 9 \end{array}$		$\begin{array}{r} 9 \\ +2 \\ \hline 11 \end{array}$		$\begin{array}{r} 2 \\ +4 \\ \hline 6 \end{array}$	
	$\begin{array}{r} 1 \\ +9 \\ \hline 10 \end{array}$		$\begin{array}{r} 4 \\ +1 \\ \hline 5 \end{array}$		$\begin{array}{r} 3 \\ +9 \\ \hline 12 \end{array}$	
	$\begin{array}{r} 2 \\ +4 \\ \hline 6 \end{array}$		$\begin{array}{r} 5 \\ +3 \\ \hline 8 \end{array}$		$\begin{array}{r} 9 \\ +3 \\ \hline 12 \end{array}$	$\begin{array}{r} 5 \\ +1 \\ \hline 6 \end{array}$
	$\begin{array}{r} 9 \\ +9 \\ \hline 18 \end{array}$		$\begin{array}{r} 4 \\ +2 \\ \hline 6 \end{array}$		$\begin{array}{r} 4 \\ +4 \\ \hline 8 \end{array}$	$\begin{array}{r} 8 \\ +9 \\ \hline 17 \end{array}$
$\begin{array}{r} 6 \\ +8 \\ \hline 14 \end{array}$		$\begin{array}{r} 3 \\ +4 \\ \hline 7 \end{array}$		$\begin{array}{r} 4 \\ +4 \\ \hline 8 \end{array}$		
	$\begin{array}{r} 5 \\ +9 \\ \hline 14 \end{array}$		$\begin{array}{r} 7 \\ +8 \\ \hline 15 \end{array}$			



# À Travers la Forêt Hantée (I)

Trouvez chaque somme pour vous sortir de la forêt hantée.

7  
+8

1  
+2

4  
+5

9  
+5

3  
+6

6  
+8

5  
+9

5  
+4

4  
+8

5  
+3

4  
+2

6  
+4

9  
+8

3  
+8

2  
+6

5  
+8

9  
+2

6  
+1

7  
+1

1  
+4














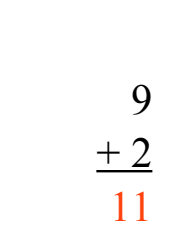
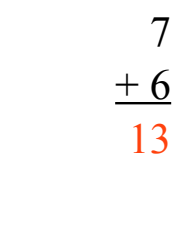





7  
+6

4  
+3

8  
+1

# À Travers la Forêt Hantée (I) Solutions

Trouvez chaque somme pour vous sortir de la forêt hantée.

	$\begin{array}{r} 7 \\ +8 \\ \hline 15 \end{array}$		$\begin{array}{r} 4 \\ +5 \\ \hline 9 \end{array}$	
	$\begin{array}{r} 9 \\ +5 \\ \hline 14 \end{array}$		$\begin{array}{r} 6 \\ +8 \\ \hline 14 \end{array}$	$\begin{array}{r} 5 \\ +9 \\ \hline 14 \end{array}$
	$\begin{array}{r} 5 \\ +4 \\ \hline 9 \end{array}$		$\begin{array}{r} 5 \\ +9 \\ \hline 14 \end{array}$	
	$\begin{array}{r} 4 \\ +2 \\ \hline 6 \end{array}$		$\begin{array}{r} 6 \\ +4 \\ \hline 10 \end{array}$	
	$\begin{array}{r} 5 \\ +8 \\ \hline 13 \end{array}$		$\begin{array}{r} 3 \\ +8 \\ \hline 11 \end{array}$	$\begin{array}{r} 2 \\ +6 \\ \hline 8 \end{array}$
	$\begin{array}{r} 2 \\ +7 \\ \hline 9 \end{array}$		$\begin{array}{r} 6 \\ +1 \\ \hline 7 \end{array}$	$\begin{array}{r} 7 \\ +1 \\ \hline 8 \end{array}$
$\begin{array}{r} 9 \\ +2 \\ \hline 11 \end{array}$		$\begin{array}{r} 1 \\ +4 \\ \hline 5 \end{array}$	$\begin{array}{r} 7 \\ +6 \\ \hline 13 \end{array}$	
	$\begin{array}{r} 4 \\ +3 \\ \hline 7 \end{array}$		$\begin{array}{r} 8 \\ +1 \\ \hline 9 \end{array}$	

# À Travers la Forêt Hantée (J)

Trouvez chaque somme pour vous sortir de la forêt hantée.

$9$   
 $\underline{+5}$

$4$   
 $\underline{+1}$

$1$   
 $\underline{+3}$

$2$   
 $\underline{+1}$

$4$   
 $\underline{+5}$

$3$   
 $\underline{+2}$

$6$   
 $\underline{+4}$

$5$   
 $\underline{+6}$

$8$   
 $\underline{+2}$

$7$   
 $\underline{+4}$

$8$   
 $\underline{+5}$

$2$   
 $\underline{+6}$

$9$   
 $\underline{+1}$

$4$   
 $\underline{+4}$

$4$   
 $\underline{+9}$

$4$   
 $\underline{+7}$

$6$   
 $\underline{+5}$

$8$   
 $\underline{+1}$

$2$   
 $\underline{+1}$

$4$   
 $\underline{+4}$

$2$   
 $\underline{+8}$

$8$   
 $\underline{+8}$

$9$   
 $\underline{+9}$

$7$   
 $\underline{+7}$

$2$   
 $\underline{+4}$






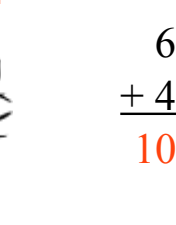









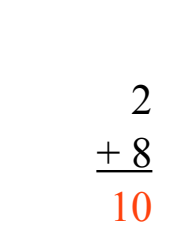

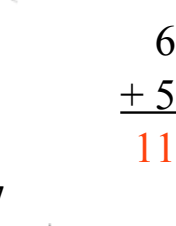

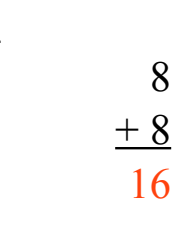









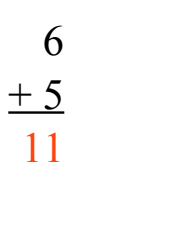



$8$   
 $\underline{+8}$

$4$   
 $\underline{+2}$

$1$   
 $\underline{+5}$

# À Travers la Forêt Hantée (J) Solutions

Trouvez chaque somme pour vous sortir de la forêt hantée.

	$\begin{array}{r} 9 \\ +5 \\ \hline 14 \end{array}$		$\begin{array}{r} 1 \\ +3 \\ \hline 4 \end{array}$	
	$\begin{array}{r} 2 \\ +1 \\ \hline 3 \end{array}$		$\begin{array}{r} 3 \\ +2 \\ \hline 5 \end{array}$	
	$\begin{array}{r} 5 \\ +6 \\ \hline 11 \end{array}$		$\begin{array}{r} 4 \\ +5 \\ \hline 9 \end{array}$	
	$\begin{array}{r} 7 \\ +4 \\ \hline 11 \end{array}$		$\begin{array}{r} 8 \\ +2 \\ \hline 10 \end{array}$	
	$\begin{array}{r} 4 \\ +4 \\ \hline 8 \end{array}$		$\begin{array}{r} 4 \\ +7 \\ \hline 11 \end{array}$	
	$\begin{array}{r} 8 \\ +1 \\ \hline 9 \end{array}$		$\begin{array}{r} 4 \\ +9 \\ \hline 13 \end{array}$	
	$\begin{array}{r} 2 \\ +8 \\ \hline 10 \end{array}$		$\begin{array}{r} 9 \\ +9 \\ \hline 18 \end{array}$	
	$\begin{array}{r} 4 \\ +2 \\ \hline 6 \end{array}$		$\begin{array}{r} 2 \\ +4 \\ \hline 6 \end{array}$	
			$\begin{array}{r} 8 \\ +8 \\ \hline 16 \end{array}$	
			$\begin{array}{r} 9 \\ +7 \\ \hline 14 \end{array}$	
			$\begin{array}{r} 6 \\ +5 \\ \hline 11 \end{array}$	
			$\begin{array}{r} 8 \\ +8 \\ \hline 16 \end{array}$	
			$\begin{array}{r} 1 \\ +5 \\ \hline 6 \end{array}$	