

COMPTER HALLOWEEN (A)

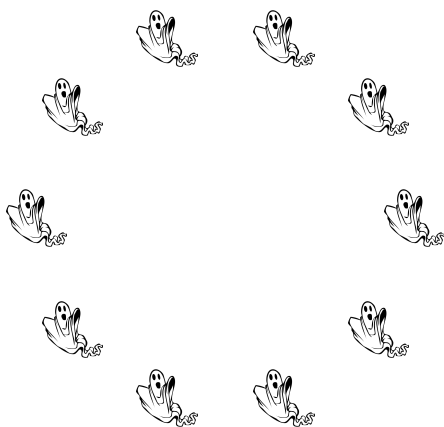
Nom: _____

Date: _____


Score: _____ /4

Comptez le nombre d'objets dans chaque groupe.


1. Il y a fantômes.



2. Il y a chauves-souris.



3. Il y a sorcières.



4. Il y a citrouilles d'Halloween.



COMPTER HALLOWEEN (A) REPONSES

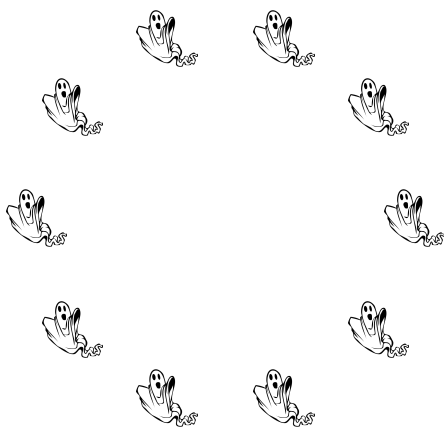
Nom: _____

Date: _____


Score: _____ /4

Comptez le nombre d'objets dans chaque groupe.


1. Il y a fantômes.



2. Il y a chauves-souris.



3. Il y a sorcières.



4. Il y a citrouilles d'Halloween.

