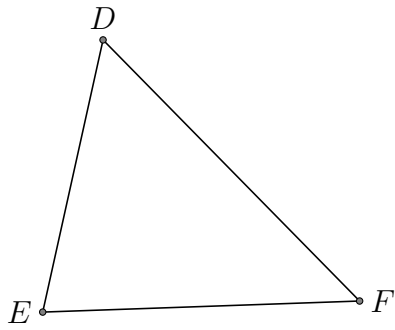


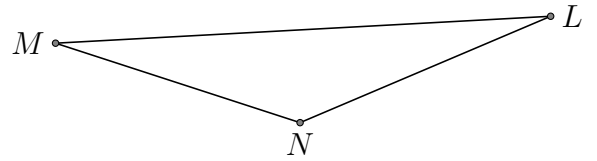
# Centres de Triangle (J)

Trouver chaque centre du triangle donné

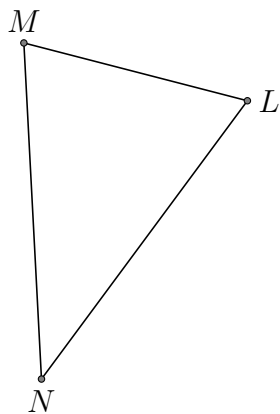
1. - orthocentre



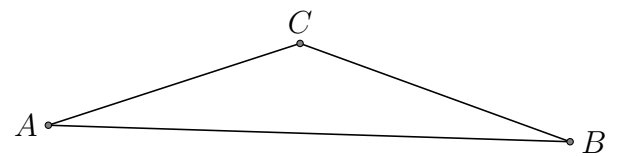
2. - Centre de gravité d'un triangle



3. - angle circonscrit



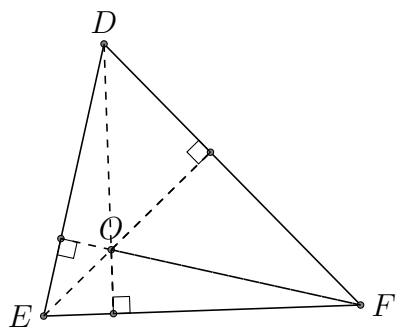
4. - angle inscrit



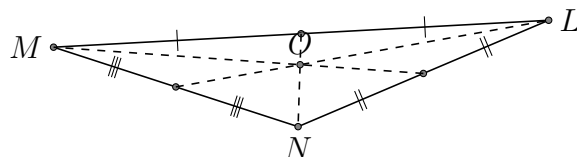
# Centres de Triangle (J) Réponses

Trouver chaque centre du triangle donné

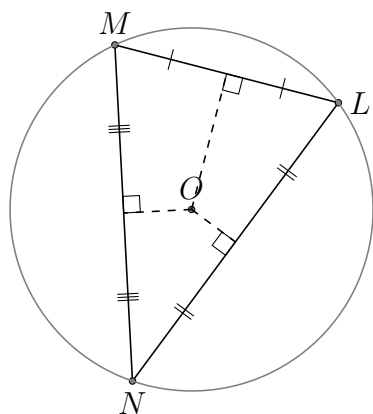
1. - orthocentre



2. - Centre de gravité d'un triangle



3. - angle circonscrit



4. - angle inscrit

