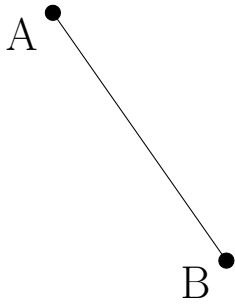



Bissectrices Perpendiculaires (I)

Construisez la médiatrice pour chaque segment de ligne.

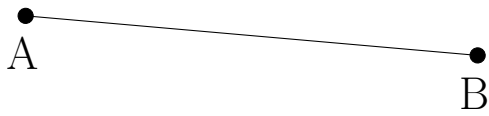
1.



2.



3.



4.

