


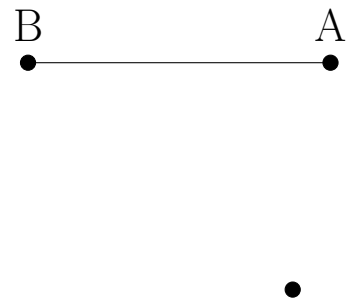
# Lignes Perpendiculaires (J)

Construisez une ligne perpendiculaire au segment passant par le point sans étiquette.


1.



2.



3.



4.

