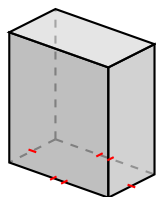
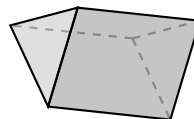
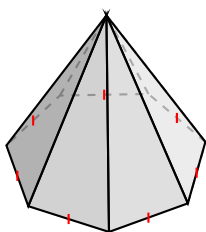


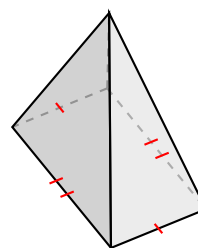
Identification de Prismes et de Pyramides (I)

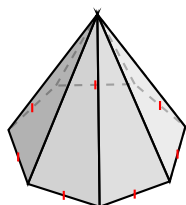
Identifiez chaque figure.

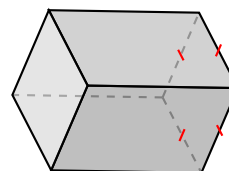


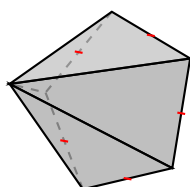


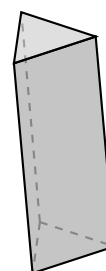






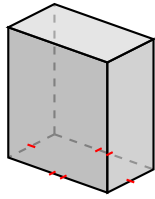




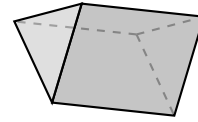


Identification de Prismes et de Pyramides (I) Solutions

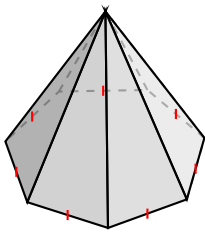
Identifiez chaque figure.



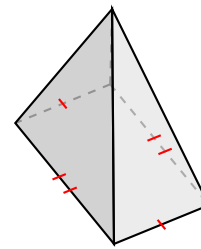
prisme rectangulaire



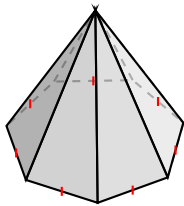
prisme triangulaire



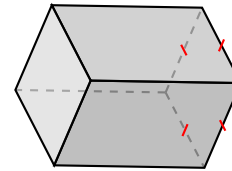
pyramide à base heptagonale



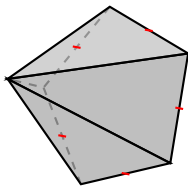
pyramide à base rectangulaire



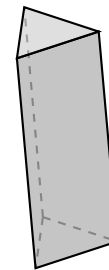
pyramide à base heptagonale



prisme à base carré



pyramide à base pentagonale



prisme triangulaire