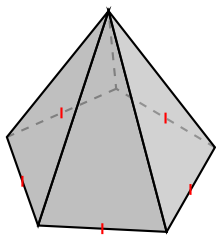
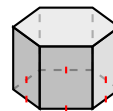
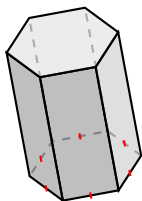


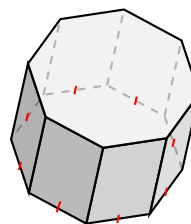
Identification de Prismes et de Pyramides (G)

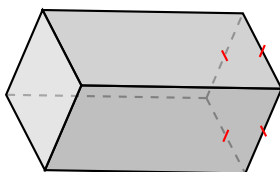
Identifiez chaque figure.

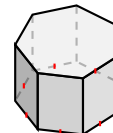


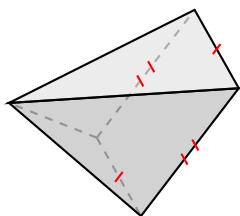


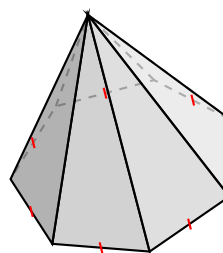






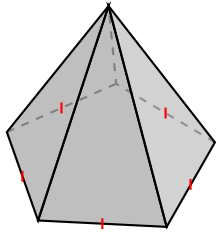




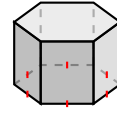


Identification de Prismes et de Pyramides (G) Solutions

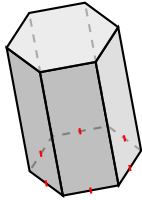
Identifiez chaque figure.



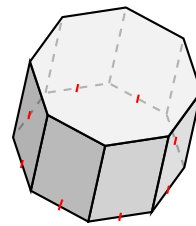
pyramide à base pentagonale



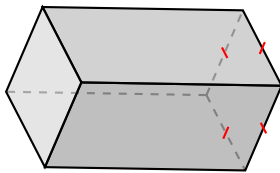
prisme hexagonal



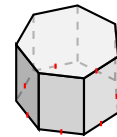
prisme hexagonal



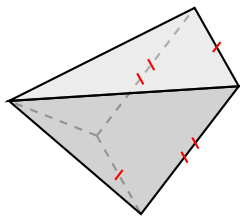
prisme octogonal



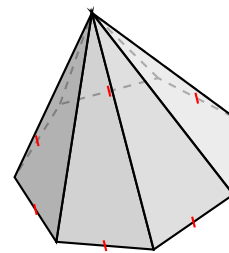
prisme à base carré



prisme heptagonal



pyramide à base rectangulaire



pyramide à base heptagonale