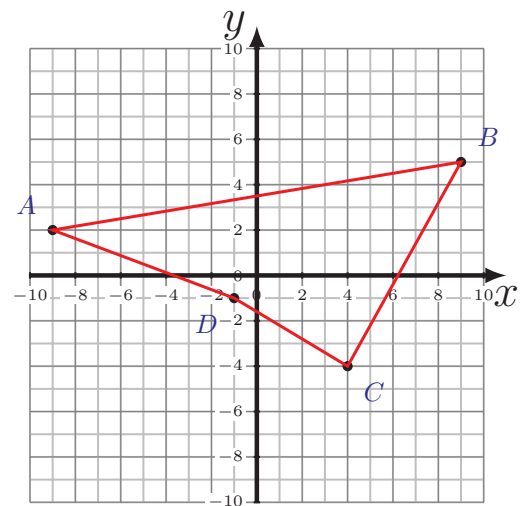
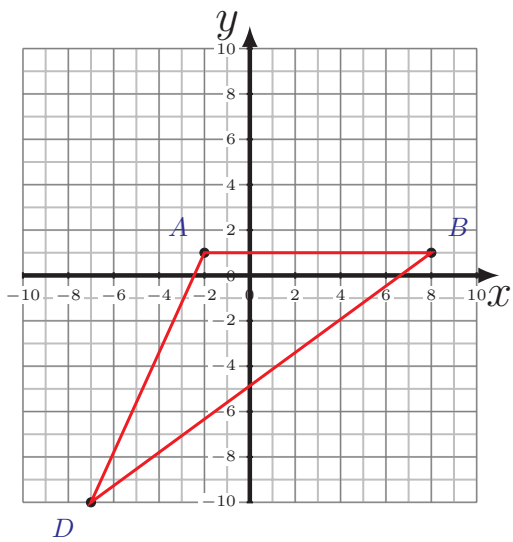
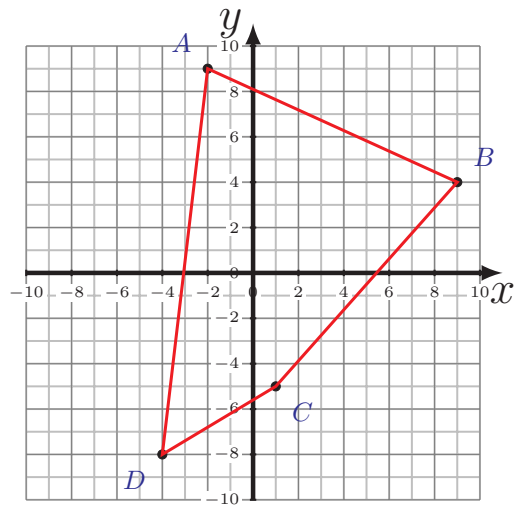
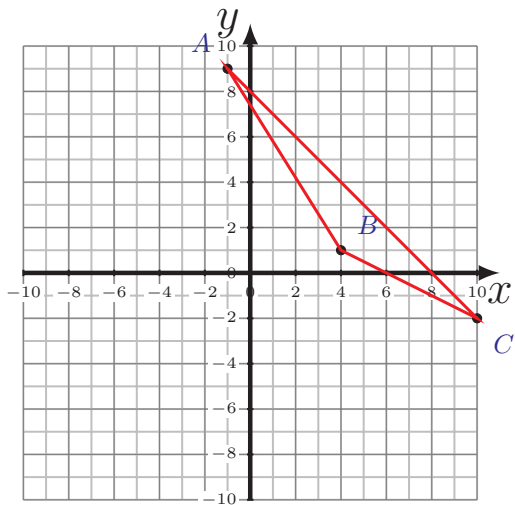


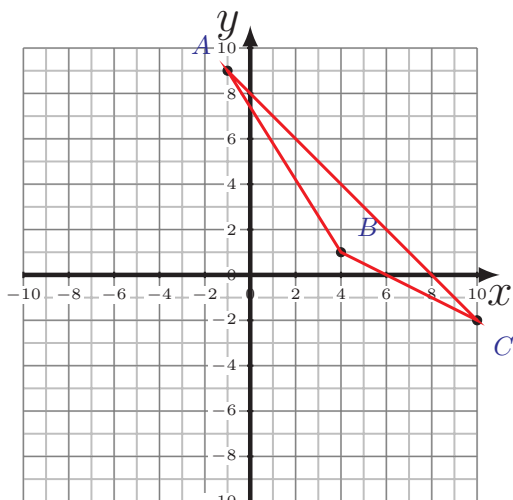
Périmètre et Aire des Polygones (F)

Calculez le périmètre et l'aire de chaque polygone.

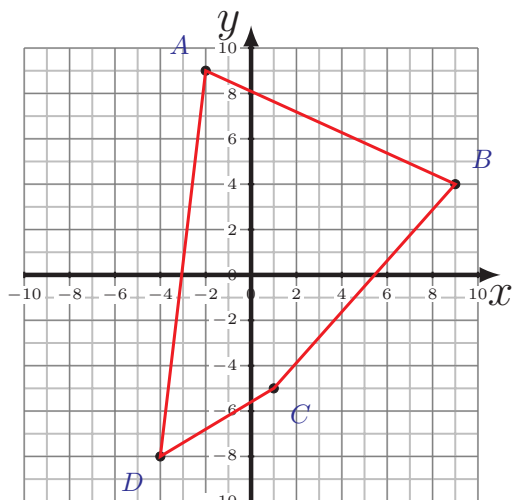


Périmètre et Aire des Polygones (F) Réponses

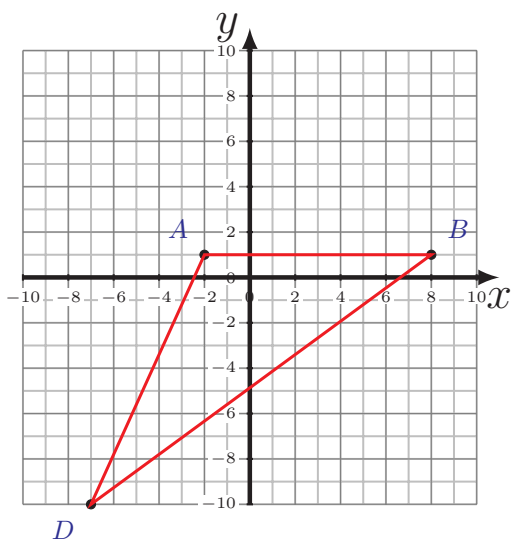
Calculez le périmètre et l'aire de chaque polygone.



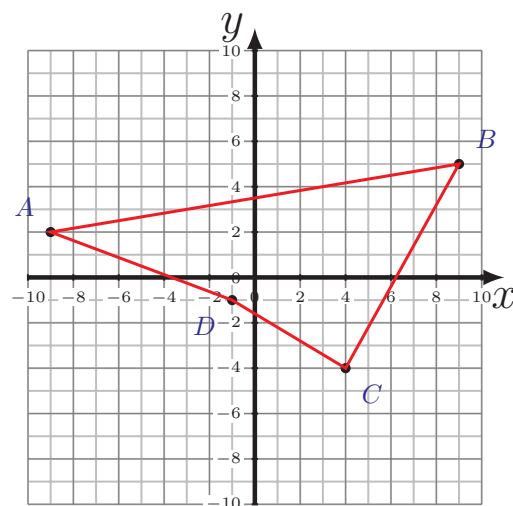
$$\begin{aligned}\overline{AB} &= 9,43 \text{ u} & \overline{BC} &= 6,71 \text{ u} \\ \overline{CA} &= 15,56 \text{ u} \\ P &= 31,7 \text{ u} \\ A &= 16,5 \text{ u}^2\end{aligned}$$



$$\begin{aligned}\overline{AB} &= 12,08 \text{ u} & \overline{BC} &= 12,04 \text{ u} \\ \overline{CD} &= 5,83 \text{ u} & \overline{DA} &= 17,12 \text{ u} \\ P &= 47,07 \text{ u} \\ A &= 109 \text{ u}^2\end{aligned}$$



$$\begin{aligned}\overline{AB} &= 10 \text{ u} & \overline{BD} &= 18,6 \text{ u} \\ \overline{DA} &= 12,08 \text{ u} \\ P &= 40,68 \text{ u} \\ A &= 55 \text{ u}^2\end{aligned}$$



$$\begin{aligned}\overline{AB} &= 18,25 \text{ u} & \overline{BC} &= 10,3 \text{ u} \\ \overline{CD} &= 5,83 \text{ u} & \overline{DA} &= 8,54 \text{ u} \\ P &= 42,92 \text{ u} \\ A &= 69 \text{ u}^2\end{aligned}$$