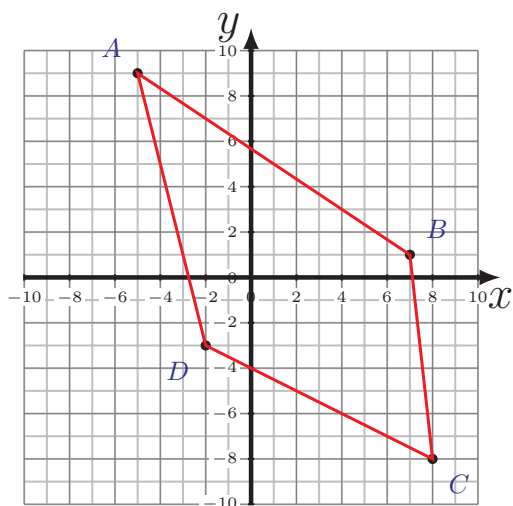
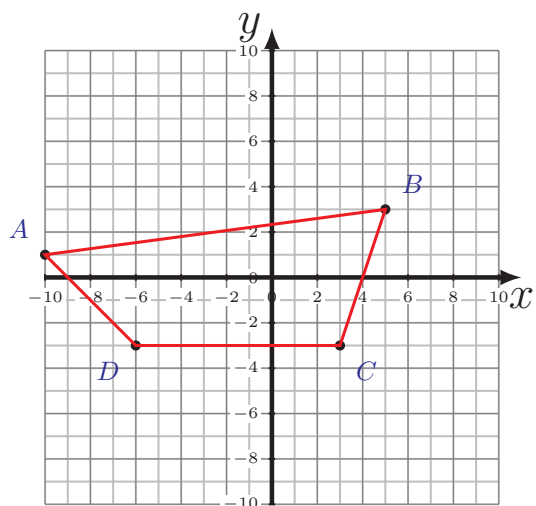
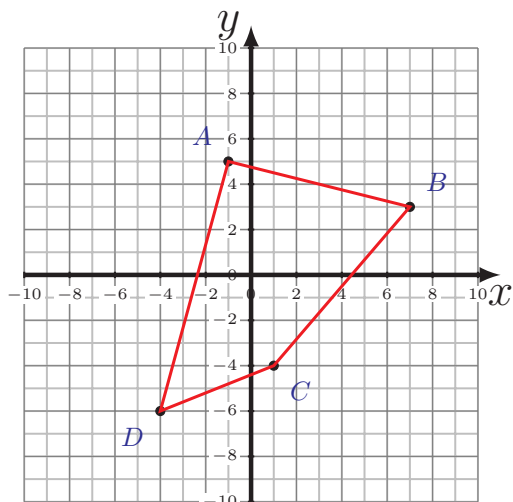
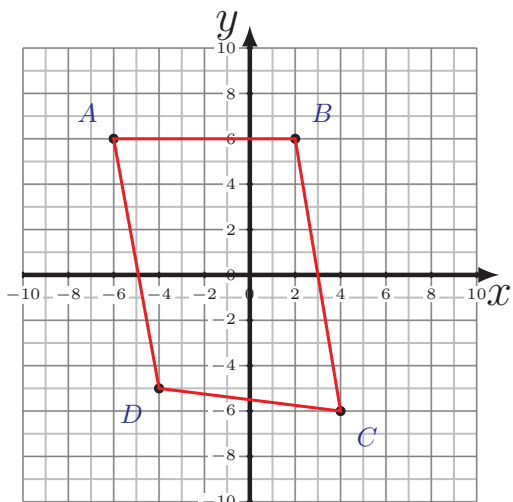


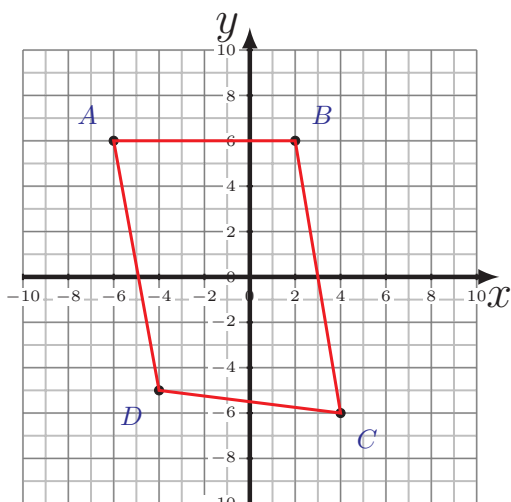
Périmètre et Aire des Quadrilatères (F)

Calculez le périmètre et l'aire de chaque quadrilatère.

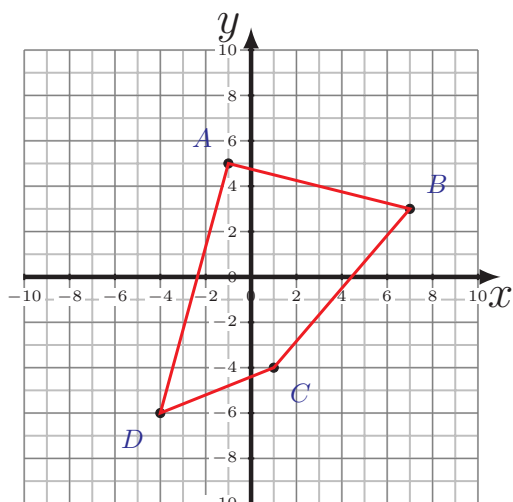


Périmètre et Aire des Quadrilatères (F) Réponses

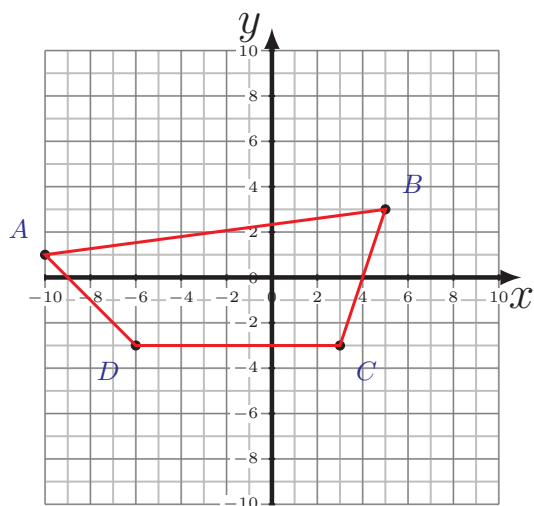
Calculez le périmètre et l'aire de chaque quadrilatère.



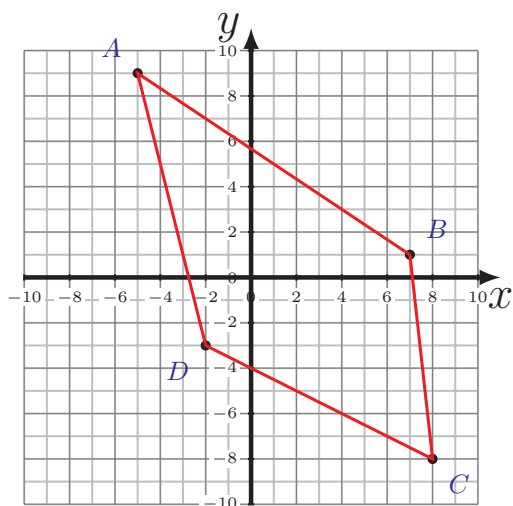
$$\begin{aligned} \overline{AB} &= 8 \text{ u} & \overline{BC} &= 12,17 \text{ u} \\ \overline{CD} &= 8,06 \text{ u} & \overline{DA} &= 11,18 \text{ u} \\ P &= 39,41 \text{ u} \\ A &= 91 \text{ u}^2 \end{aligned}$$



$$\begin{aligned} \overline{AB} &= 8,25 \text{ u} & \overline{BC} &= 9,22 \text{ u} \\ \overline{CD} &= 5,39 \text{ u} & \overline{DA} &= 11,4 \text{ u} \\ P &= 34,26 \text{ u} \\ A &= 58,5 \text{ u}^2 \end{aligned}$$



$$\begin{aligned} \overline{AB} &= 15,13 \text{ u} & \overline{BC} &= 6,32 \text{ u} \\ \overline{CD} &= 9 \text{ u} & \overline{DA} &= 5,66 \text{ u} \\ P &= 36,11 \text{ u} \\ A &= 61 \text{ u}^2 \end{aligned}$$



$$\begin{aligned} \overline{AB} &= 14,42 \text{ u} & \overline{BC} &= 9,06 \text{ u} \\ \overline{CD} &= 11,18 \text{ u} & \overline{DA} &= 12,37 \text{ u} \\ P &= 47,03 \text{ u} \\ A &= 102,5 \text{ u}^2 \end{aligned}$$