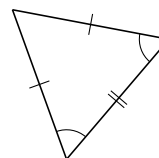
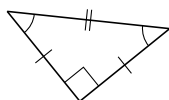
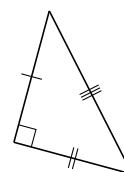
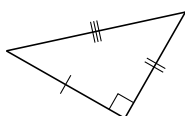
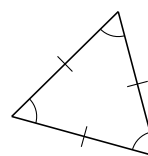
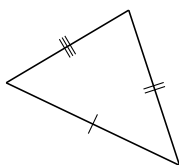
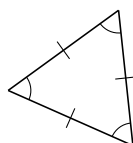


# Classification de Triangles (I)

Classifiez chaque triangle à l'aide des mesures d'angles et de côtés.



# Classification de Triangles (I) Solutions

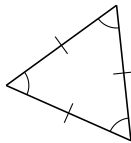
Classifiez chaque triangle à l'aide des mesures d'angles et de côtés.



isocèle, droit



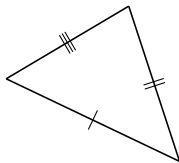
scalène, obtus



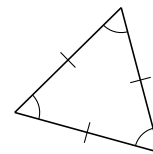
équilateral, aigu



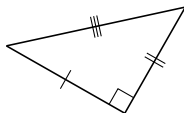
isocèle, obtus



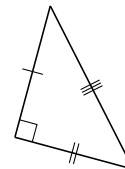
scalène, aigu



équilateral, aigu



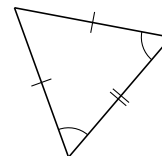
scalène, droit



scalène, droit



isocèle, droit



isocèle, aigu