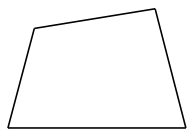
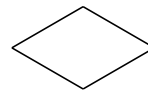


Classification de Quadrilatères (I)

Identifiez chaque quadrilatère.



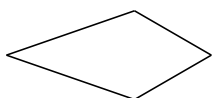












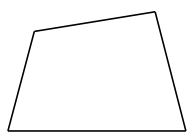




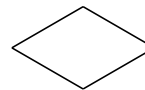


Classification de Quadrilatères (I) Solutions

Identifiez chaque quadrilatère.



quadrilatère



losange



trapèze rectangle



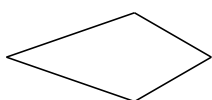
parallélogramme




losange



trapèze



cerf-volant



carré



fléchette



rectangle