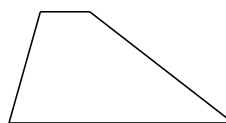
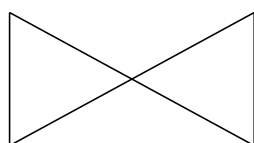


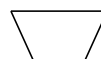
Classification de Quadrilatères (D)

Identifiez chaque quadrilatère.



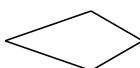
















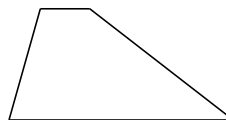


Classification de Quadrilatères (D) Solutions

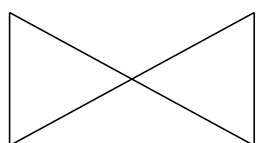
Identifiez chaque quadrilatère.



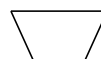
carré



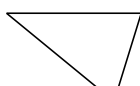
trapèze



noeud papillon



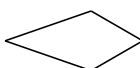
trapèze isocèle



trapèze



rectangle



cerf-volant



losange



fléchette



trapèze rectangle