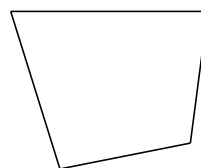


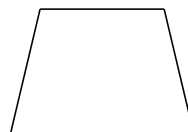
Classification de Quadrilatères (C)

Identifiez chaque quadrilatère.





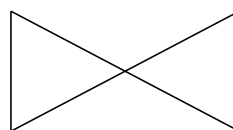














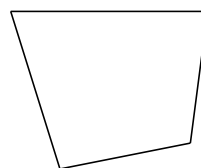


Classification de Quadrilatères (C) Solutions


Identifiez chaque quadrilatère.



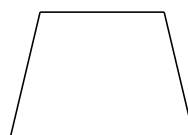
fléchette



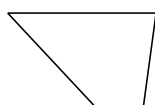
quadrilatère



fléchette



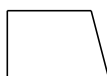
trapèze isocèle



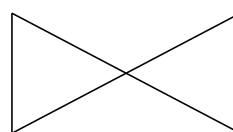
trapèze



cerf-volant



trapèze rectangle



noeud papillon



rectangle



carré