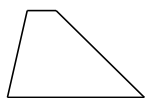
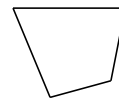


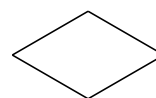
Classification de Quadrilatères (B)


Identifiez chaque quadrilatère.






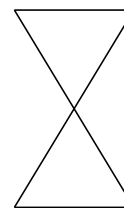










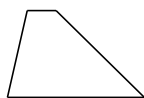




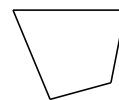


Classification de Quadrilatères (B) Solutions

Identifiez chaque quadrilatère.



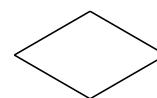
trapèze




quadrilatère



trapèze rectangle



losange



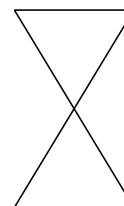
rectangle



fléchette



parallélogramme



noeud papillon



rectangle



trapèze isocèle