



Classification de Quadrilatères (I)

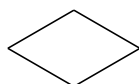
Identifiez chaque quadrilatère.










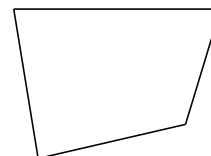













Classification de Quadrilatères (I) Solutions

Identifiez chaque quadrilatère.



carré



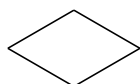
rectangle



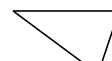
carré



carré




losange



trapèze



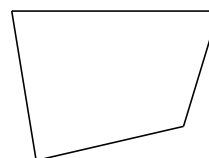
parallélogramme



carré



carré



quadrilatère