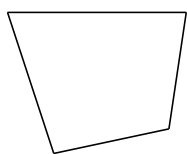


# Classification de Quadrilatères (H)


Identifiez chaque quadrilatère.



\_\_\_\_\_




\_\_\_\_\_



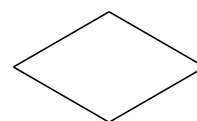
\_\_\_\_\_




\_\_\_\_\_



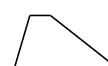
\_\_\_\_\_




\_\_\_\_\_



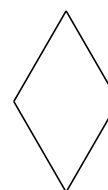
\_\_\_\_\_



\_\_\_\_\_



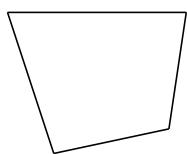
\_\_\_\_\_



\_\_\_\_\_

# Classification de Quadrilatères (H) Solutions


Identifiez chaque quadrilatère.



quadrilatère




carré



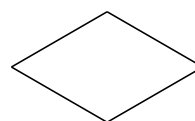
rectangle




rectangle



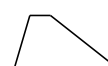
carré




losange



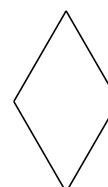
parallélogramme



trapèze



rectangle



losange