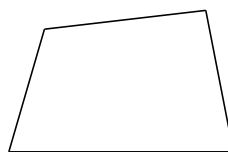


Classification de Quadrilatères (F)

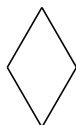
Identifiez chaque quadrilatère.







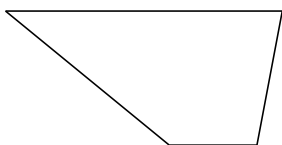













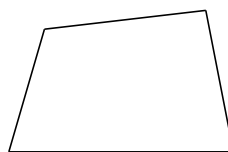


Classification de Quadrilatères (F) Solutions

Identifiez chaque quadrilatère.



carré



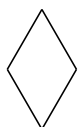
quadrilatère



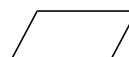
rectangle



rectangle



losange



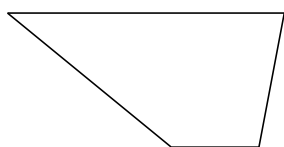
parallélogramme




rectangle



carré



trapèze



rectangle