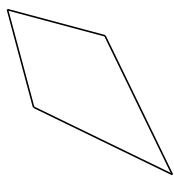
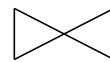


# Classification de Quadrilatères (A)


Identifiez chaque quadrilatère.



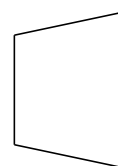
\_\_\_\_\_



\_\_\_\_\_



\_\_\_\_\_




\_\_\_\_\_



\_\_\_\_\_



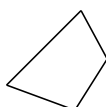
\_\_\_\_\_



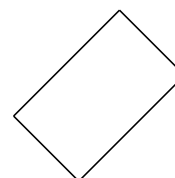
\_\_\_\_\_



\_\_\_\_\_



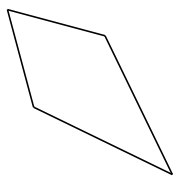
\_\_\_\_\_



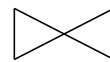
\_\_\_\_\_

# Classification de Quadrilatères (A) Solutions


Identifiez chaque quadrilatère.



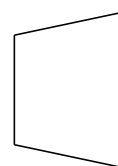
cerf-volant



noeud papillon



parallélogramme



trapèze isocèle



trapèze rectangle



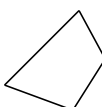
rectangle



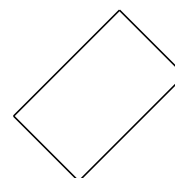
carré



losange




quadrilatère



rectangle

# Classification de Quadrilatères (B)

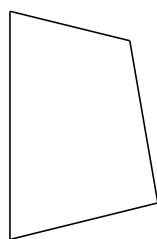
Identifiez chaque quadrilatère.



\_\_\_\_\_



\_\_\_\_\_



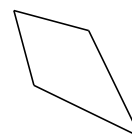
\_\_\_\_\_



\_\_\_\_\_



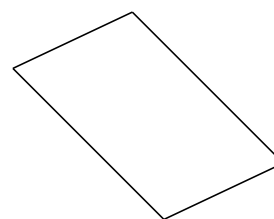
\_\_\_\_\_



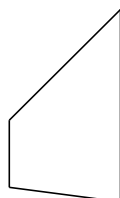
\_\_\_\_\_



\_\_\_\_\_



\_\_\_\_\_




\_\_\_\_\_



\_\_\_\_\_

# Classification de Quadrilatères (B) Solutions

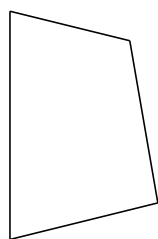
Identifiez chaque quadrilatère.



noeud papillon



losange



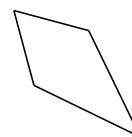
quadrilatère



trapèze rectangle



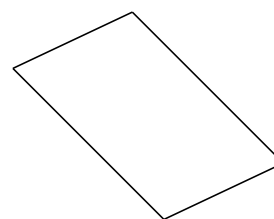
carré



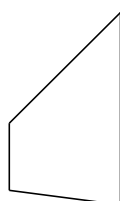
cerf-volant



fléchette



parallélogramme



trapèze



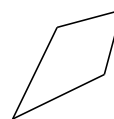
fléchette

# Classification de Quadrilatères (C)

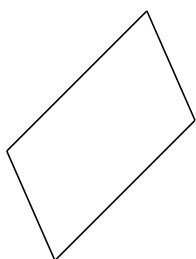
Identifiez chaque quadrilatère.



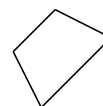
\_\_\_\_\_



\_\_\_\_\_



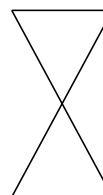
\_\_\_\_\_



\_\_\_\_\_



\_\_\_\_\_



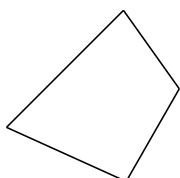
\_\_\_\_\_



\_\_\_\_\_



\_\_\_\_\_



\_\_\_\_\_



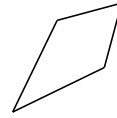
\_\_\_\_\_

# Classification de Quadrilatères (C) Solutions

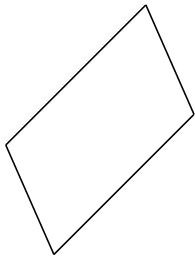
Identifiez chaque quadrilatère.



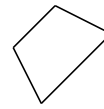
losange



cerf-volant



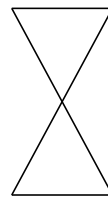
parallélogramme




trapèze isocèle



trapèze



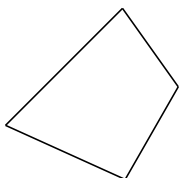
noeud papillon



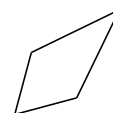
rectangle



carré



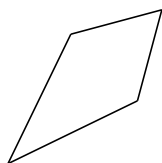
quadrilatère



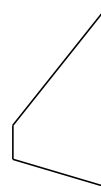
cerf-volant

# Classification de Quadrilatères (D)

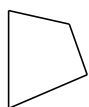
Identifiez chaque quadrilatère.



\_\_\_\_\_



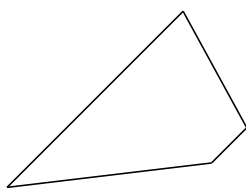
\_\_\_\_\_



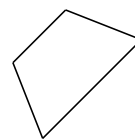
\_\_\_\_\_



\_\_\_\_\_



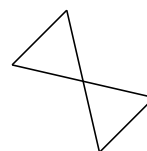
\_\_\_\_\_



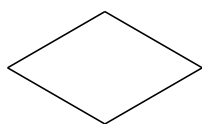
\_\_\_\_\_



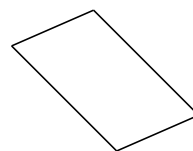
\_\_\_\_\_



\_\_\_\_\_



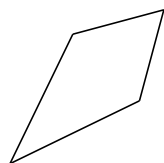
\_\_\_\_\_



\_\_\_\_\_

# Classification de Quadrilatères (D) Solutions

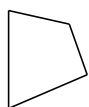
Identifiez chaque quadrilatère.



cerf-volant



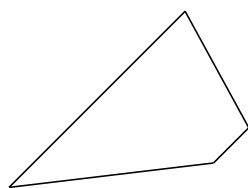
trapèze



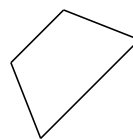
quadrilatère



fléchette



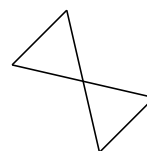
trapèze



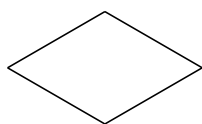
trapèze isocèle



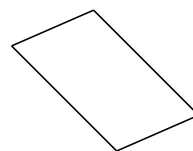
trapèze rectangle



noeud papillon



losange

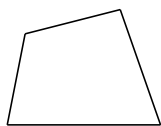


parallélogramme

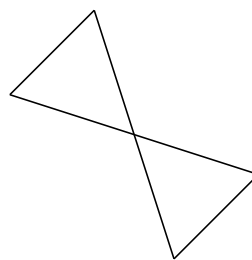


# Classification de Quadrilatères (E)


Identifiez chaque quadrilatère.




\_\_\_\_\_



\_\_\_\_\_



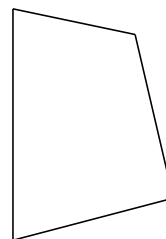
\_\_\_\_\_



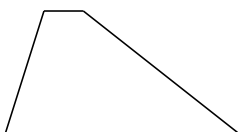
\_\_\_\_\_




\_\_\_\_\_



\_\_\_\_\_



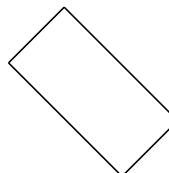
\_\_\_\_\_



\_\_\_\_\_



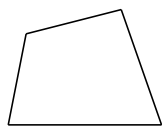
\_\_\_\_\_



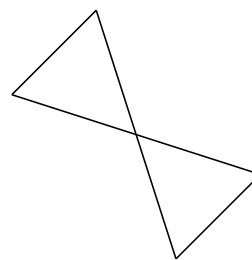
\_\_\_\_\_

# Classification de Quadrilatères (E) Solutions

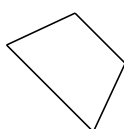
Identifiez chaque quadrilatère.




quadrilatère



noeud papillon




trapèze isocèle



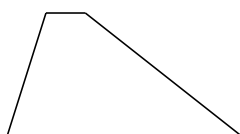
parallélogramme



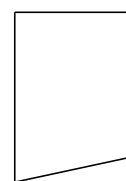
fléchette



quadrilatère



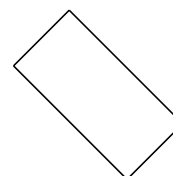
trapèze



trapèze rectangle




losange




rectangle

# Classification de Quadrilatères (F)

Identifiez chaque quadrilatère.



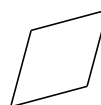
\_\_\_\_\_



\_\_\_\_\_



\_\_\_\_\_



\_\_\_\_\_



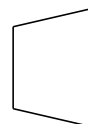
\_\_\_\_\_




\_\_\_\_\_



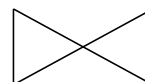
\_\_\_\_\_



\_\_\_\_\_




\_\_\_\_\_



\_\_\_\_\_

# Classification de Quadrilatères (F) Solutions

Identifiez chaque quadrilatère.



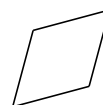
carré



trapèze rectangle



rectangle



losange



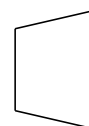
parallélogramme




rectangle



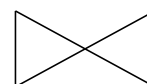
fléchette



trapèze isocèle



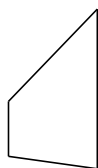
quadrilatère



noeud papillon

# Classification de Quadrilatères (G)

Identifiez chaque quadrilatère.



\_\_\_\_\_



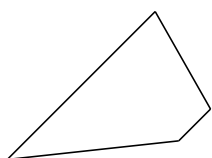
\_\_\_\_\_



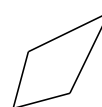
\_\_\_\_\_



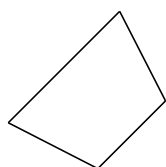
\_\_\_\_\_



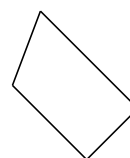
\_\_\_\_\_



\_\_\_\_\_



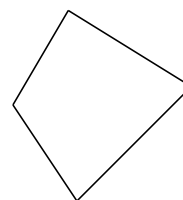
\_\_\_\_\_



\_\_\_\_\_



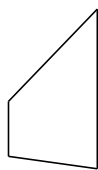
\_\_\_\_\_



\_\_\_\_\_

# Classification de Quadrilatères (G) Solutions

Identifiez chaque quadrilatère.



trapèze



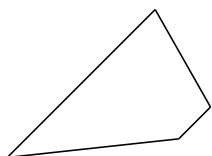
parallélogramme



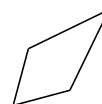
fléchette



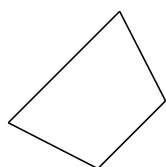
losange



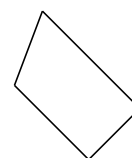
trapèze



cerf-volant



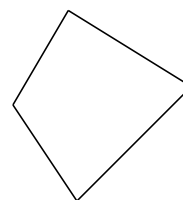
trapèze isocèle



trapèze rectangle



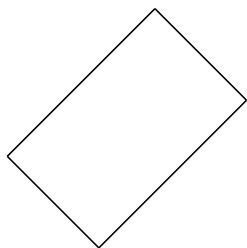
noeud papillon



quadrilatère

# Classification de Quadrilatères (H)


Identifiez chaque quadrilatère.



\_\_\_\_\_



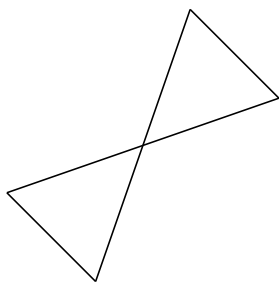
\_\_\_\_\_



\_\_\_\_\_



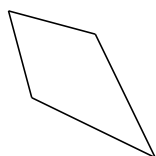
\_\_\_\_\_



\_\_\_\_\_



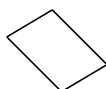
\_\_\_\_\_



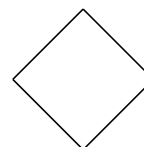
\_\_\_\_\_



\_\_\_\_\_



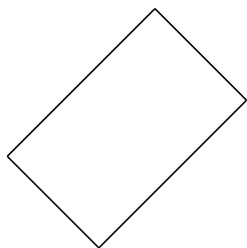
\_\_\_\_\_



\_\_\_\_\_

# Classification de Quadrilatères (H) Solutions


Identifiez chaque quadrilatère.



rectangle



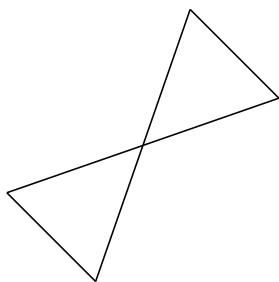
trapèze



carré



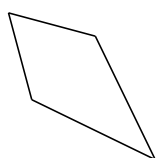
trapèze rectangle



noeud papillon



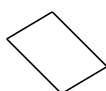
losange



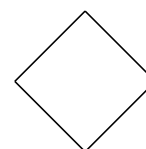
cerf-volant



trapèze isocèle



parallélogramme

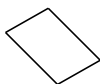


carré

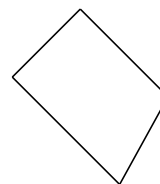


# Classification de Quadrilatères (I)

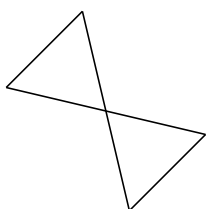
Identifiez chaque quadrilatère.



\_\_\_\_\_



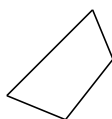
\_\_\_\_\_




\_\_\_\_\_



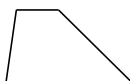
\_\_\_\_\_



\_\_\_\_\_



\_\_\_\_\_



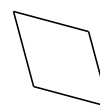
\_\_\_\_\_



\_\_\_\_\_



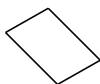
\_\_\_\_\_



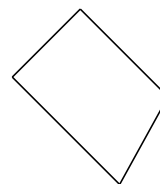
\_\_\_\_\_

# Classification de Quadrilatères (I) Solutions

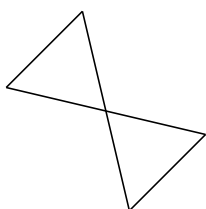
Identifiez chaque quadrilatère.



parallélogramme



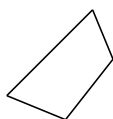
trapèze rectangle




noeud papillon



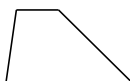
cerf-volant



quadrilatère



carré



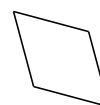
trapèze



fléchette



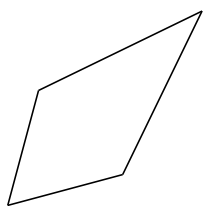
cerf-volant



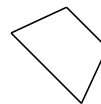
losange

# Classification de Quadrilatères (J)

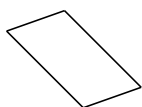
Identifiez chaque quadrilatère.



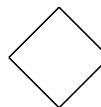
\_\_\_\_\_



\_\_\_\_\_



\_\_\_\_\_



\_\_\_\_\_




\_\_\_\_\_



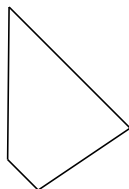
\_\_\_\_\_



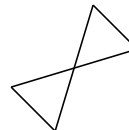
\_\_\_\_\_



\_\_\_\_\_



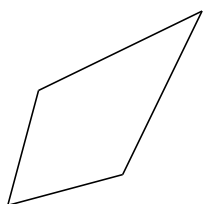
\_\_\_\_\_



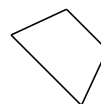
\_\_\_\_\_

# Classification de Quadrilatères (J) Solutions

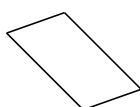
Identifiez chaque quadrilatère.



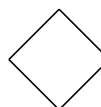
cerf-volant



trapèze isocèle



parallélogramme



carré



fléchette



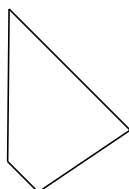
losange



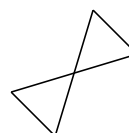
trapèze rectangle



parallélogramme



trapèze



noeud papillon