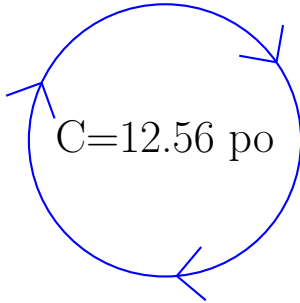


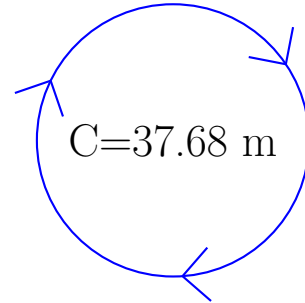
Calcul du Rayon et Diamètre des Cercles (H)

Calculez les mesures de chaque cercles à l'aide de la mesure donnée. Utilisez $\pi = 3.14$



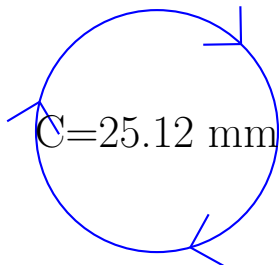
rayon = _____

diamètre = _____



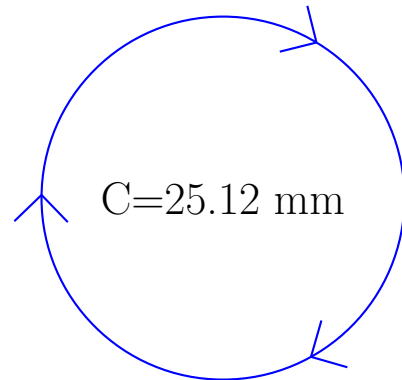
rayon = _____

diamètre = _____



rayon = _____

diamètre = _____

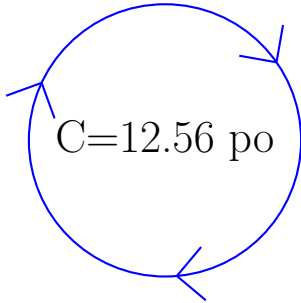


rayon = _____

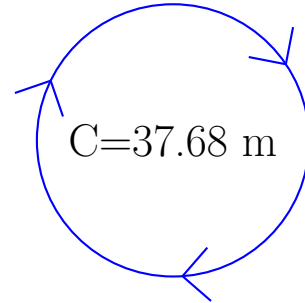
diamètre = _____

Calcul du Rayon et Diamètre des Cercles (H) Solutions

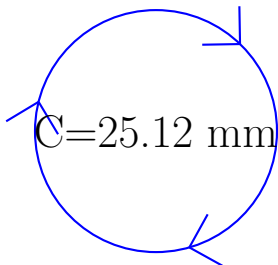
Calculez les mesures de chaque cercles à l'aide de la mesure donnée. Utilisez $\pi = 3.14$



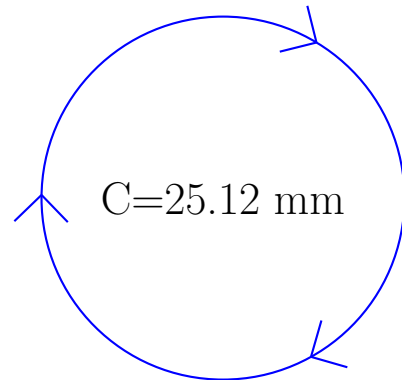
$$\begin{aligned} \text{rayon} &= \underline{\quad 2 \text{ po} \quad} \\ \text{diamètre} &= \underline{\quad 4 \text{ po} \quad} \end{aligned}$$



$$\begin{aligned} \text{rayon} &= \underline{\quad 6 \text{ m} \quad} \\ \text{diamètre} &= \underline{\quad 12 \text{ m} \quad} \end{aligned}$$



$$\begin{aligned} \text{rayon} &= \underline{\quad 4 \text{ mm} \quad} \\ \text{diamètre} &= \underline{\quad 8 \text{ mm} \quad} \end{aligned}$$



$$\begin{aligned} \text{rayon} &= \underline{\quad 4 \text{ mm} \quad} \\ \text{diamètre} &= \underline{\quad 8 \text{ mm} \quad} \end{aligned}$$