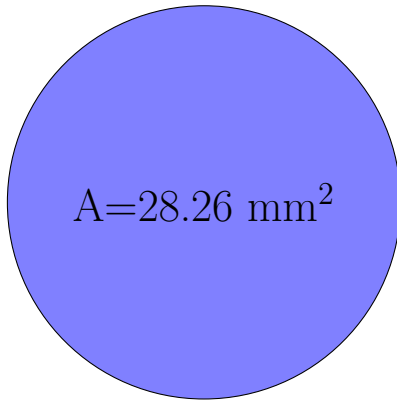



## Calcul du Rayon et Diamètre des Cercles (H)

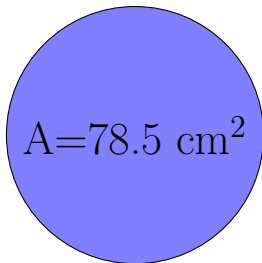
Calculez les mesures de chaque cercles à l'aide de la mesure donnée. Utilisez  $\pi = 3.14$



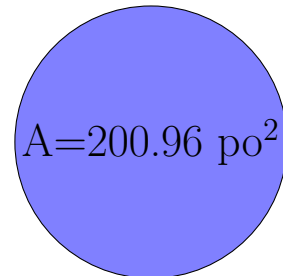
rayon = \_\_\_\_\_  
diamètre = \_\_\_\_\_



rayon = \_\_\_\_\_  
diamètre = \_\_\_\_\_



rayon = \_\_\_\_\_  
diamètre = \_\_\_\_\_



rayon = \_\_\_\_\_  
diamètre = \_\_\_\_\_