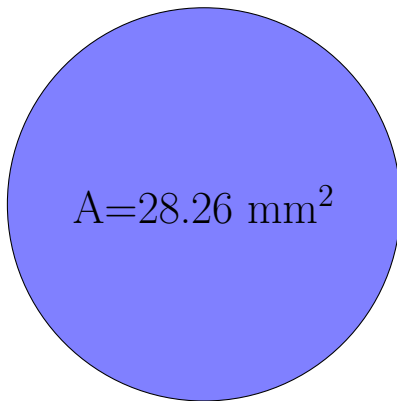
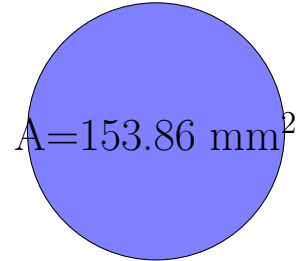


Calcul du Rayon et Diamètre des Cercles (H)

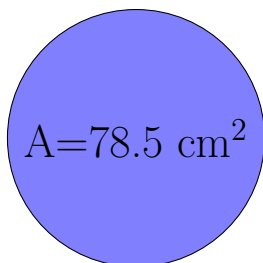
Calculez les mesures de chaque cercles à l'aide de la mesure donnée. Utilisez $\pi = 3.14$



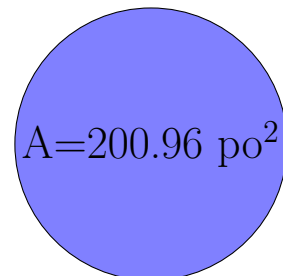
rayon = _____
diamètre = _____



rayon = _____
diamètre = _____



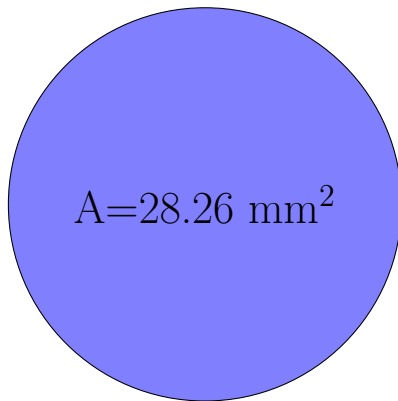
rayon = _____
diamètre = _____



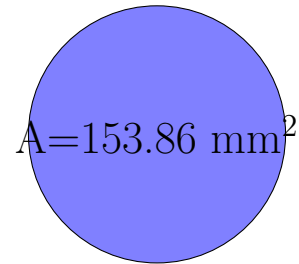
rayon = _____
diamètre = _____

Calcul du Rayon et Diamètre des Cercles (H) Solutions

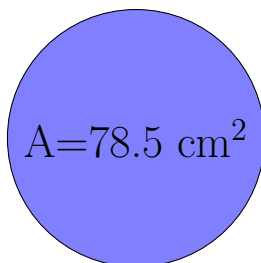
Calculez les mesures de chaque cercles à l'aide de la mesure donnée. Utilisez $\pi = 3.14$



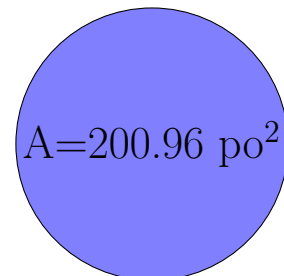
$$\begin{aligned} \text{rayon} &= \underline{\quad 3 \text{ mm} \quad} \\ \text{diamètre} &= \underline{\quad 6 \text{ mm} \quad} \end{aligned}$$



$$\begin{aligned} \text{rayon} &= \underline{\quad 7 \text{ mm} \quad} \\ \text{diamètre} &= \underline{\quad 14 \text{ mm} \quad} \end{aligned}$$



$$\begin{aligned} \text{rayon} &= \underline{\quad 5 \text{ cm} \quad} \\ \text{diamètre} &= \underline{\quad 10 \text{ cm} \quad} \end{aligned}$$



$$\begin{aligned} \text{rayon} &= \underline{\quad 8 \text{ po} \quad} \\ \text{diamètre} &= \underline{\quad 16 \text{ po} \quad} \end{aligned}$$