



Simple Rappports - Images d'Automne (J)


Trouver chaque rapport et simplifier, si nécessaire.



$$\begin{aligned} \text{Oak leaf} : \text{Maple leaf} &= \quad : \quad = \quad : \\ \text{Maple leaf} : \text{Oak leaf} &= \quad : \quad = \quad : \end{aligned}$$



$$\begin{aligned} \text{Oak leaf} : \text{Tree} &= \quad : \quad = \quad : \\ \text{Tree} : \text{Oak leaf} &= \quad : \quad = \quad : \end{aligned}$$




$$\begin{aligned} \text{Maple leaf} : \text{Oak leaf} &= \quad : \quad = \quad : \\ \text{Oak leaf} : \text{Maple leaf} &= \quad : \quad = \quad : \end{aligned}$$



$$\begin{aligned} \text{Oak leaf} : \text{Maple leaf} &= \quad : \quad = \quad : \\ \text{Maple leaf} : \text{Oak leaf} &= \quad : \quad = \quad : \end{aligned}$$


Simple Rappports - Images d'Automne (J) Solutions

Trouver chaque rapport et simplifier, si nécessaire.




$$\text{Large Oak Leaf} : \text{Small Maple Leaf} = 8 : 1 = 8 : 1$$

$$\text{Small Maple Leaf} : \text{Large Oak Leaf} = 1 : 8 = 1 : 8$$



$$\text{Large Oak Leaf} : \text{Small Tree} = 20 : 15 = 4 : 3$$

$$\text{Small Tree} : \text{Large Oak Leaf} = 15 : 20 = 3 : 4$$



$$\text{Small Maple Leaf} : \text{Large Oak Leaf} = 15 : 20 = 3 : 4$$

$$\text{Large Oak Leaf} : \text{Small Maple Leaf} = 20 : 15 = 4 : 3$$



$$\text{Large Oak Leaf} : \text{Small Maple Leaf} = 2 : 10 = 1 : 5$$

$$\text{Small Maple Leaf} : \text{Large Oak Leaf} = 10 : 2 = 5 : 1$$