

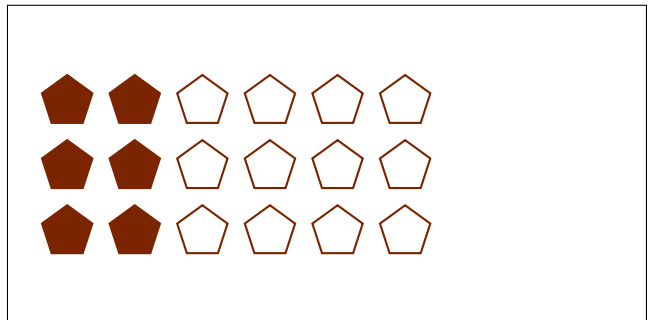



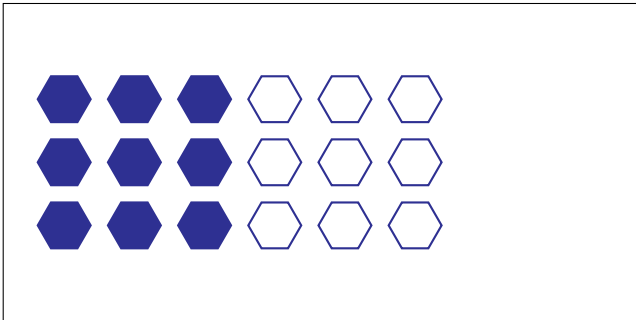


# Modèles d'un Ensemble (F)



Dans cet ensemble  
il y a 4 figures et  
2 sont coloriées.

$$\frac{2 \text{ figures coloriées}}{4 \text{ figures dans cet ensemble}} = \frac{2}{4} = \frac{1}{2}$$

Écrivez une fraction pour chacun des modèles suivants.



# Modèles d'un Ensemble (F) Réponses




Dans cet ensemble  
il y a 4 figures et  
2 sont coloriées.

$$\frac{2 \text{ figures coloriées}}{4 \text{ figures dans cet ensemble}} = \frac{2}{4} = \frac{1}{2}$$


Écrivez une fraction pour chacun des modèles suivants.



$$\frac{5}{10} = \frac{1}{2}$$




$$\frac{16}{24} = \frac{2}{3}$$



$$\frac{9}{18} = \frac{1}{2}$$



$$\frac{1}{3}$$



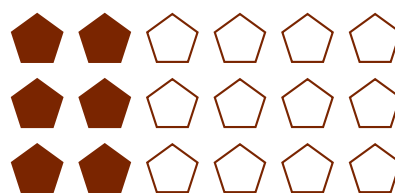
$$\frac{10}{15} = \frac{2}{3}$$



$$\frac{4}{8} = \frac{1}{2}$$



$$\frac{12}{18} = \frac{2}{3}$$



$$\frac{6}{18} = \frac{1}{3}$$