



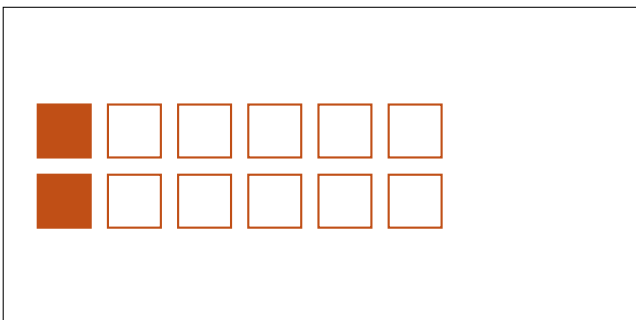


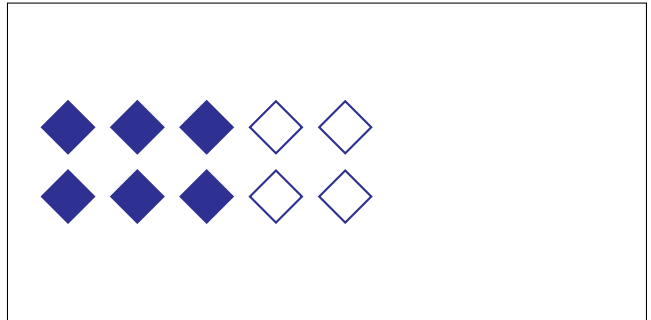
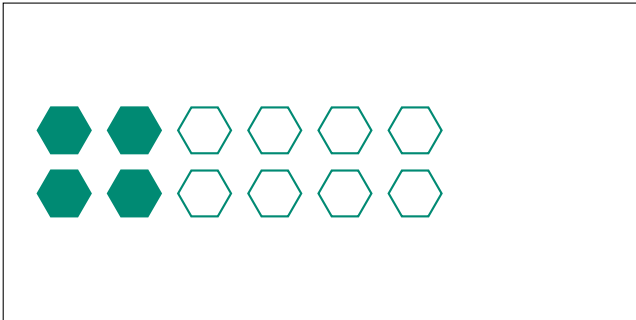
# Modèles d'un Ensemble (E)




Dans cet ensemble  
il y a 15 figures  
et 9 sont coloriées.

$$\frac{9 \text{ figures coloriées}}{15 \text{ figures dans cet ensemble}} = \frac{9}{15} = \frac{3}{5}$$

Écrivez une fraction pour chacun des modèles suivants.



# Modèles d'un Ensemble (E) Réponses




Dans cet ensemble  
il y a 15 figures  
et 9 sont coloriées.

$$\frac{9 \text{ figures coloriées}}{15 \text{ figures dans cet ensemble}} = \frac{9}{15} = \frac{3}{5}$$

Écrivez une fraction pour chacun des modèles suivants.



$$\frac{4}{12} = \frac{1}{3}$$




$$\frac{6}{10} = \frac{3}{5}$$



$$\frac{4}{6} = \frac{2}{3}$$




$$\frac{1}{2}$$




$$\frac{4}{20} = \frac{1}{5}$$



$$\frac{1}{4}$$



$$\frac{2}{12} = \frac{1}{6}$$



$$\frac{15}{18} = \frac{5}{6}$$