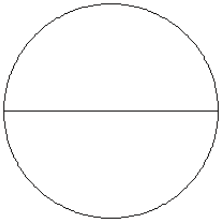


## Modèles de Fractions (D)

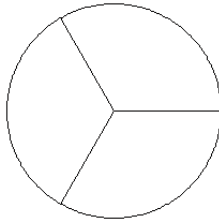
Pour chaque modèle, colorez la portion du cercle représentée par la fraction associée.

1.



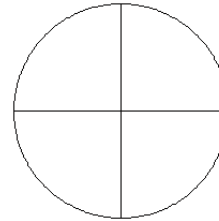
$$\frac{1}{2}$$

2.



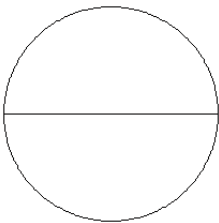
$$\frac{2}{3}$$

3.



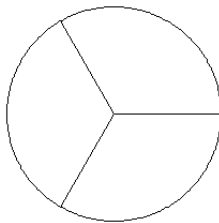
$$\frac{2}{4}$$

4.



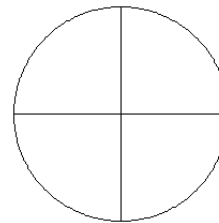
$$\frac{0}{2}$$

5.



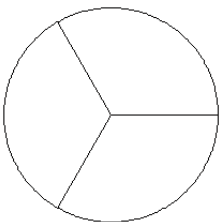
$$\frac{1}{3}$$

6.



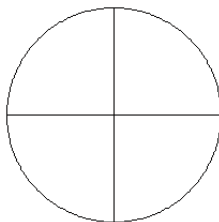
$$\frac{3}{4}$$

7.



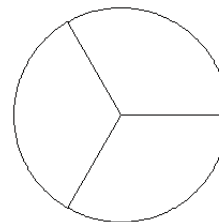
$$\frac{0}{3}$$

8.



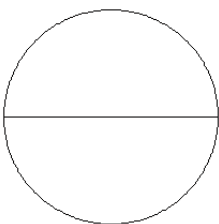
$$\frac{3}{4}$$

9.



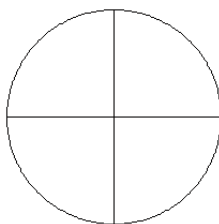
$$\frac{0}{3}$$

10.



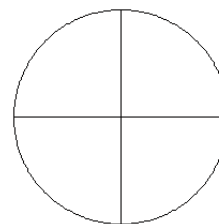
$$\frac{2}{2}$$

11.



$$\frac{1}{4}$$

12.



$$\frac{0}{4}$$