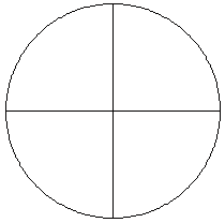


## Modèles de Fractions (J)

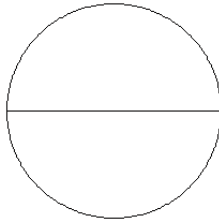
Pour chaque modèle, colorez la portion du cercle représentée par la fraction associée.

1.



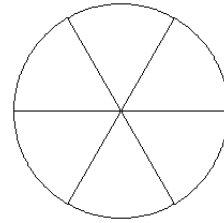
$$\frac{1}{4}$$

2.



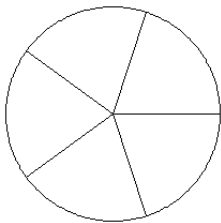
$$\frac{2}{2}$$

3.



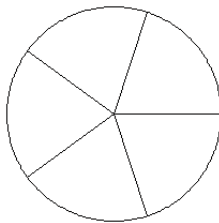
$$\frac{4}{6}$$

4.



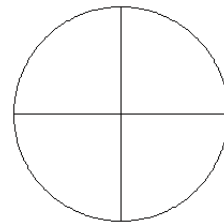
$$\frac{1}{5}$$

5.



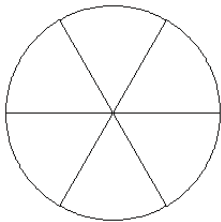
$$\frac{2}{5}$$

6.



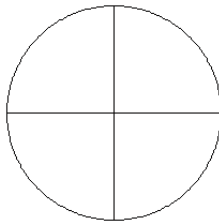
$$\frac{0}{4}$$

7.



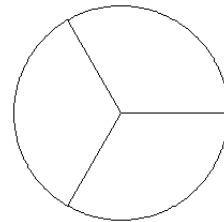
$$\frac{3}{6}$$

8.



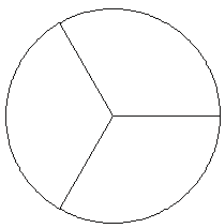
$$\frac{1}{4}$$

9.



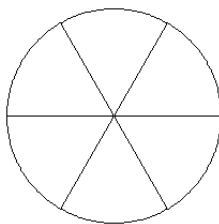
$$\frac{1}{3}$$

10.



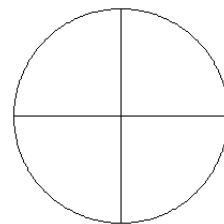
$$\frac{1}{3}$$

11.



$$\frac{4}{6}$$

12.



$$\frac{1}{4}$$