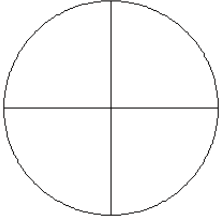


# Modèles de Fractions (F)

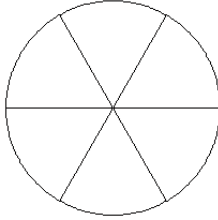
Pour chaque modèle, colorez la portion du cercle représentée par la fraction associée.

1.



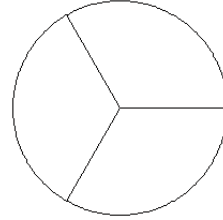
$$\frac{1}{4}$$

2.



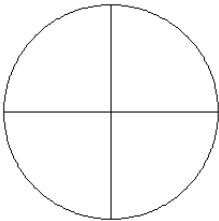
$$\frac{2}{6}$$

3.



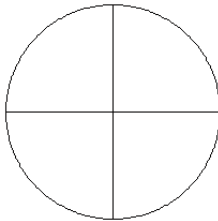
$$\frac{3}{3}$$

4.



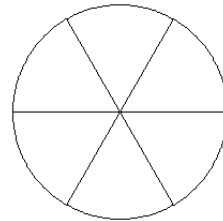
$$\frac{1}{4}$$

5.



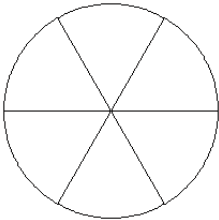
$$\frac{1}{4}$$

6.



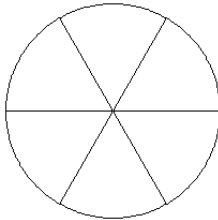
$$\frac{2}{6}$$

7.



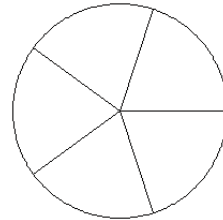
$$\frac{1}{6}$$

8.



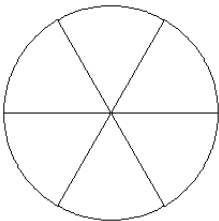
$$\frac{3}{6}$$

9.



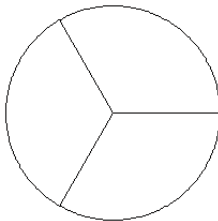
$$\frac{2}{5}$$

10.



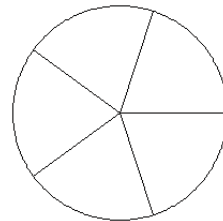
$$\frac{4}{6}$$

11.



$$\frac{2}{3}$$

12.



$$\frac{4}{5}$$