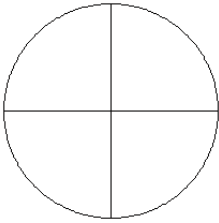


Modèles de Fractions (J)

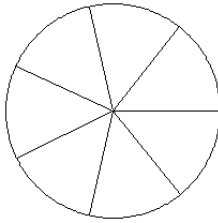
Pour chaque modèle, colorez la portion du cercle représentée par la fraction associée.

1.



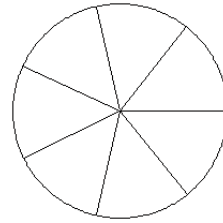
$$\frac{2}{4}$$

2.



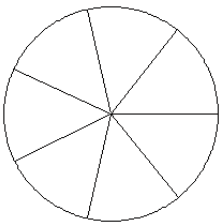
$$\frac{2}{7}$$

3.



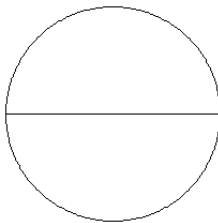
$$\frac{5}{7}$$

4.



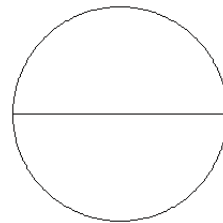
$$\frac{2}{7}$$

5.



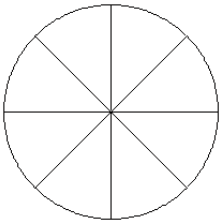
$$\frac{0}{2}$$

6.



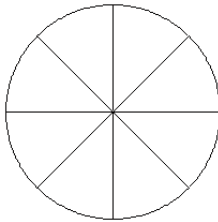
$$\frac{1}{2}$$

7.



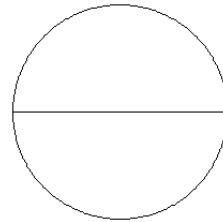
$$\frac{1}{8}$$

8.



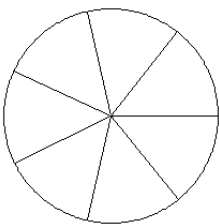
$$\frac{3}{8}$$

9.



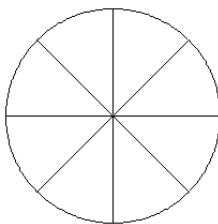
$$\frac{1}{2}$$

10.



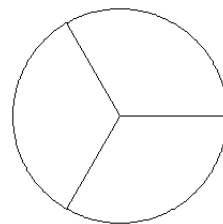
$$\frac{4}{7}$$

11.



$$\frac{6}{8}$$

12.



$$\frac{1}{3}$$