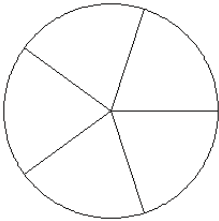


Modèles de Fractions (H)

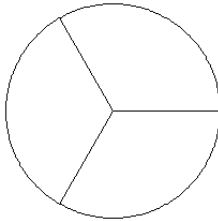
Pour chaque modèle, colorez la portion du cercle représentée par la fraction associée.

1.



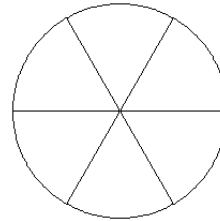
$$\frac{4}{5}$$

2.



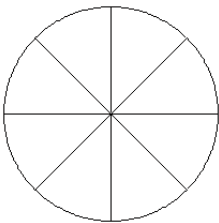
$$\frac{0}{3}$$

3.



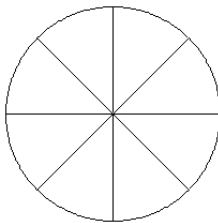
$$\frac{4}{6}$$

4.



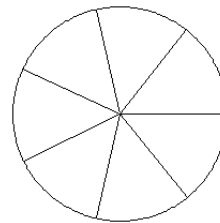
$$\frac{2}{8}$$

5.



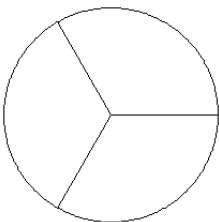
$$\frac{2}{8}$$

6.



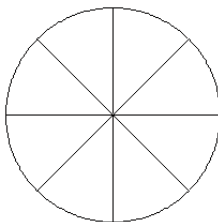
$$\frac{4}{7}$$

7.



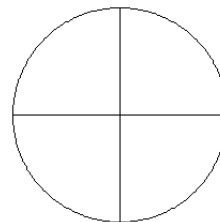
$$\frac{0}{3}$$

8.



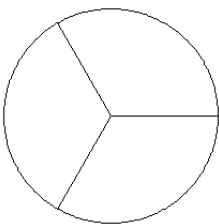
$$\frac{4}{8}$$

9.



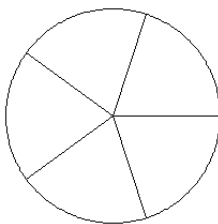
$$\frac{1}{4}$$

10.



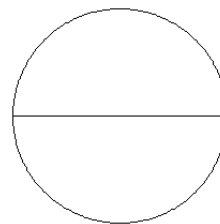
$$\frac{1}{3}$$

11.



$$\frac{2}{5}$$

12.



$$\frac{1}{2}$$