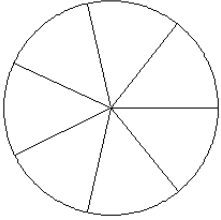


## Modèles de Fractions (E)

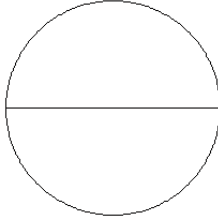
Pour chaque modèle, colorez la portion du cercle représentée par la fraction associée.

1.



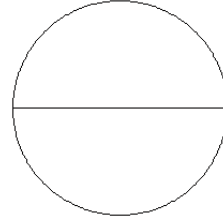
$$\frac{1}{7}$$

2.



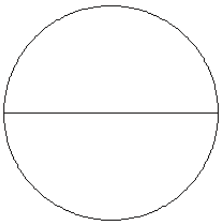
$$\frac{0}{2}$$

3.



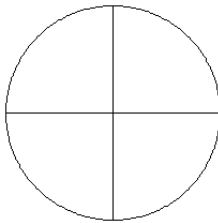
$$\frac{0}{2}$$

4.



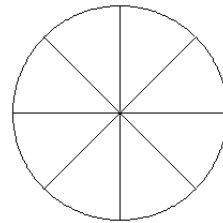
$$\frac{1}{2}$$

5.



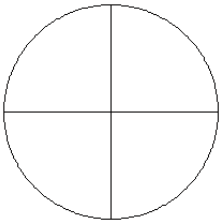
$$\frac{2}{4}$$

6.



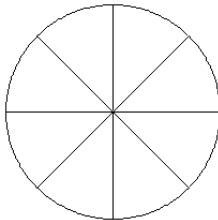
$$\frac{5}{8}$$

7.



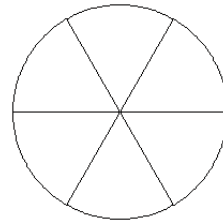
$$\frac{2}{4}$$

8.



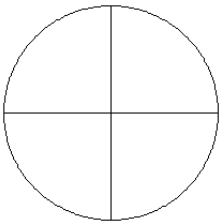
$$\frac{6}{8}$$

9.



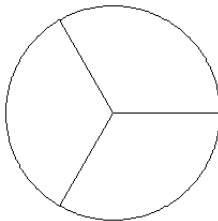
$$\frac{4}{6}$$

10.



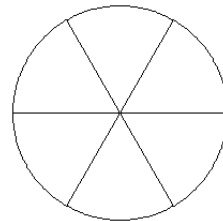
$$\frac{1}{4}$$

11.



$$\frac{2}{3}$$

12.



$$\frac{4}{6}$$