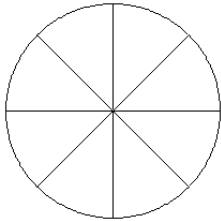


## Modèles de Fractions (C)

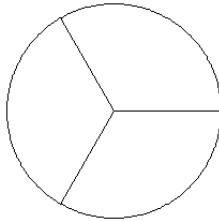
Pour chaque modèle, colorez la portion du cercle représentée par la fraction associée.

1.



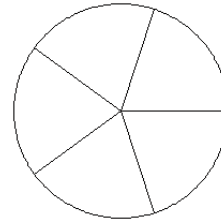
$$\frac{3}{8}$$

2.



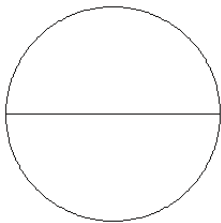
$$\frac{3}{3}$$

3.



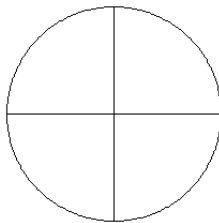
$$\frac{5}{5}$$

4.



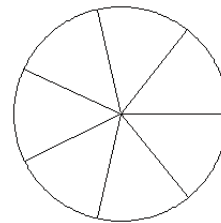
$$\frac{2}{2}$$

5.



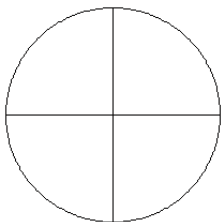
$$\frac{1}{4}$$

6.



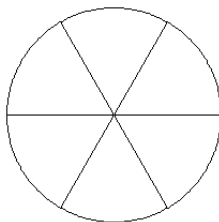
$$\frac{6}{7}$$

7.



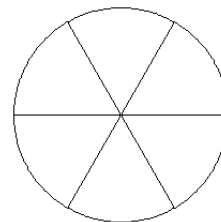
$$\frac{2}{4}$$

8.



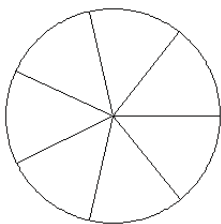
$$\frac{2}{6}$$

9.



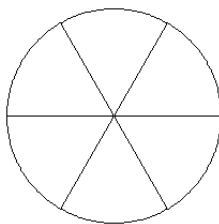
$$\frac{4}{6}$$

10.



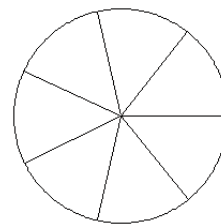
$$\frac{3}{7}$$

11.



$$\frac{2}{6}$$

12.



$$\frac{5}{7}$$