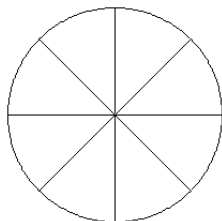


Modèles de Fractions (B)

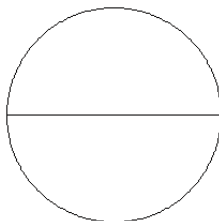
Pour chaque modèle, colorez la portion du cercle représentée par la fraction associée.

1.



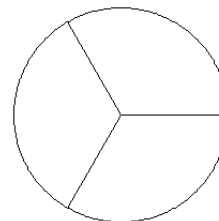
$$\frac{3}{8}$$

2.



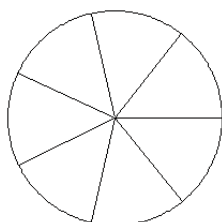
$$\frac{1}{2}$$

3.



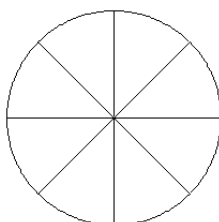
$$\frac{1}{3}$$

4.



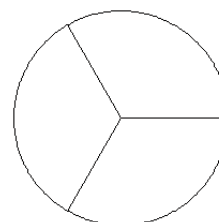
$$\frac{4}{7}$$

5.



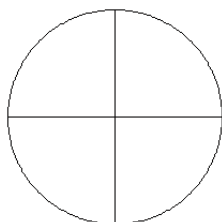
$$\frac{3}{8}$$

6.



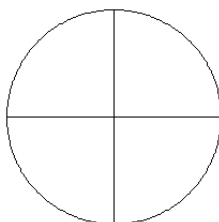
$$\frac{1}{3}$$

7.



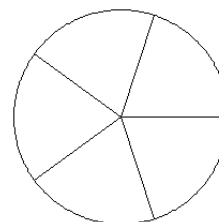
$$\frac{1}{4}$$

8.



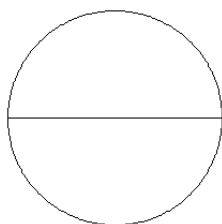
$$\frac{4}{4}$$

9.



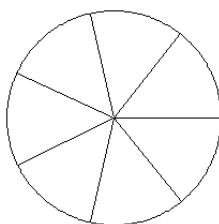
$$\frac{3}{5}$$

10.



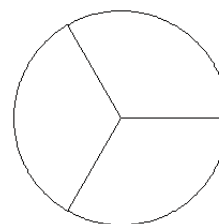
$$\frac{1}{2}$$

11.



$$\frac{5}{7}$$

12.



$$\frac{2}{3}$$