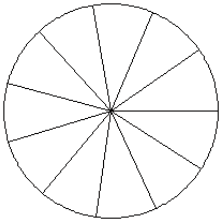


Modèles de Fractions (A)

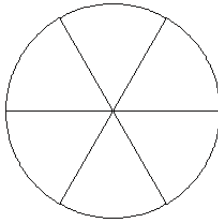
Pour chaque modèle, colorez la portion du cercle représentée par la fraction associée.

1.



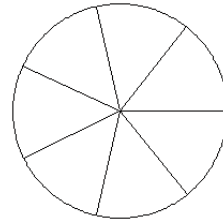
$$\frac{3}{11}$$

2.



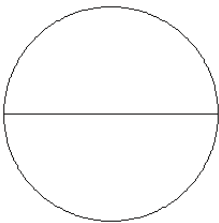
$$\frac{4}{6}$$

3.



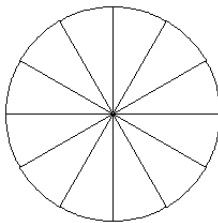
$$\frac{4}{7}$$

4.



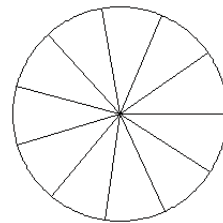
$$\frac{1}{2}$$

5.



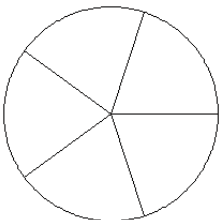
$$\frac{6}{12}$$

6.



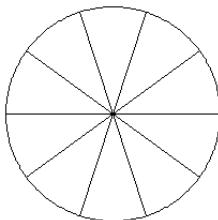
$$\frac{7}{11}$$

7.



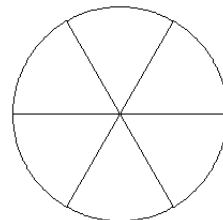
$$\frac{2}{5}$$

8.



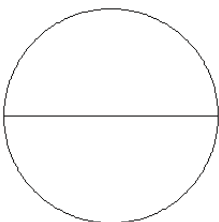
$$\frac{5}{10}$$

9.



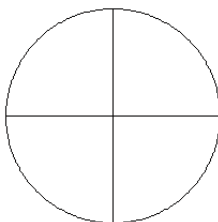
$$\frac{2}{6}$$

10.



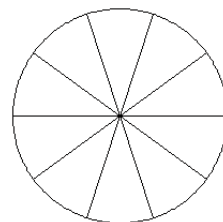
$$\frac{1}{2}$$

11.



$$\frac{2}{4}$$

12.



$$\frac{4}{10}$$