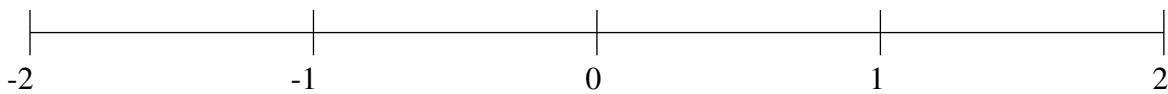


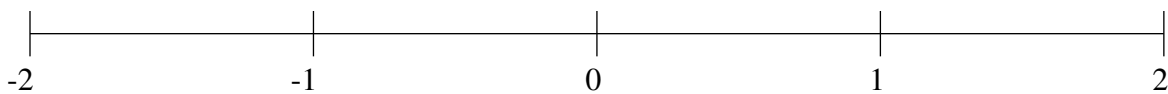
Classification de Fractions (A)

À l'aide des droites numériques, classifiez chaque série de fractions ci-dessous en ordre croissant.

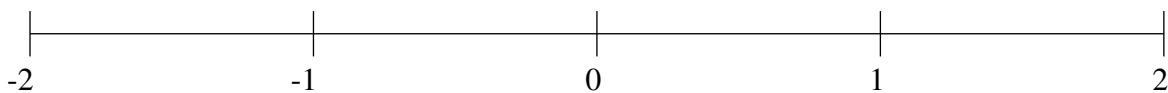
$$1\frac{41}{80}, \frac{1}{2}, -\frac{27}{71}, 1\frac{3}{16}, \frac{53}{60}$$



$$\frac{47}{99}, -1\frac{2}{3}, 1\frac{26}{47}, -\frac{11}{17}, -\frac{2}{13}$$



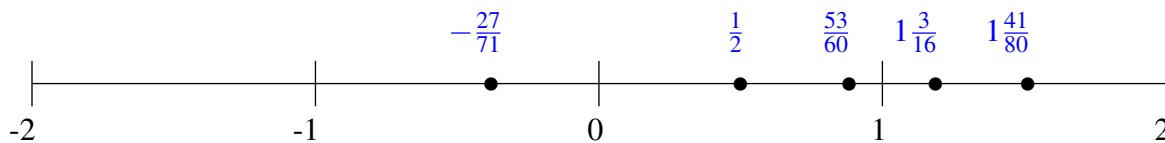
$$-\frac{23}{65}, 1\frac{5}{9}, 1\frac{2}{13}, \frac{4}{83}, \frac{38}{65}$$



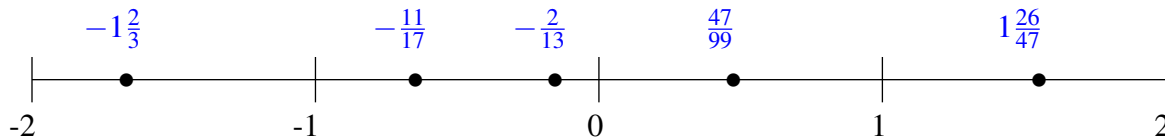
Classification de Fractions (A) Solutions

À l'aide des droites numériques, classifiez chaque série de fractions ci-dessous en ordre croissant.

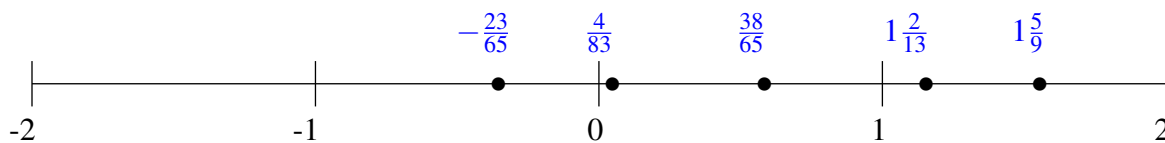
$$1\frac{41}{80}, \frac{1}{2}, -\frac{27}{71}, 1\frac{3}{16}, \frac{53}{60}$$



$$\frac{47}{99}, -1\frac{2}{3}, 1\frac{26}{47}, -\frac{11}{17}, -\frac{2}{13}$$



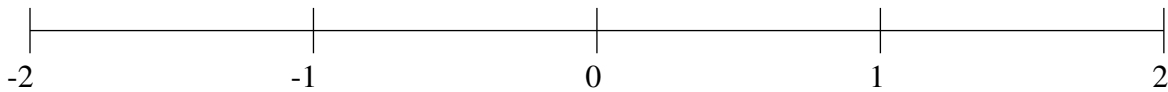
$$-\frac{23}{65}, 1\frac{5}{9}, 1\frac{2}{13}, \frac{4}{83}, \frac{38}{65}$$



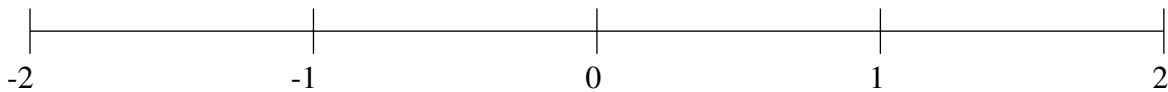
Classification de Fractions (B)

À l'aide des droites numériques, classifiez chaque série de fractions ci-dessous en ordre croissant.

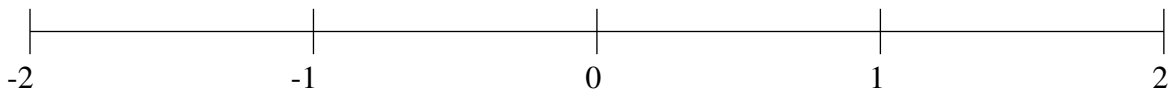
$$-1\frac{1}{3}, -1\frac{64}{65}, 1\frac{1}{4}, -\frac{1}{3}, \frac{2}{3}$$



$$1\frac{3}{4}, \frac{13}{51}, -1\frac{1}{2}, -\frac{7}{57}, -1\frac{1}{18}$$



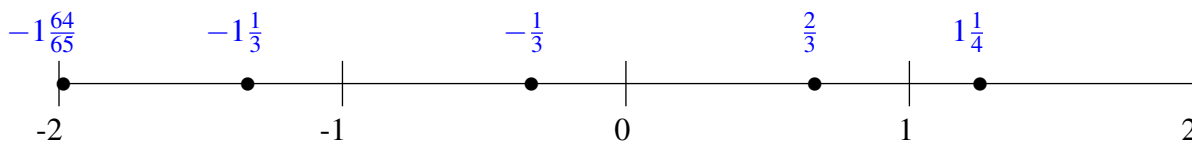
$$-1\frac{16}{17}, 1\frac{1}{2}, -\frac{8}{9}, -\frac{3}{65}, -\frac{1}{2}$$



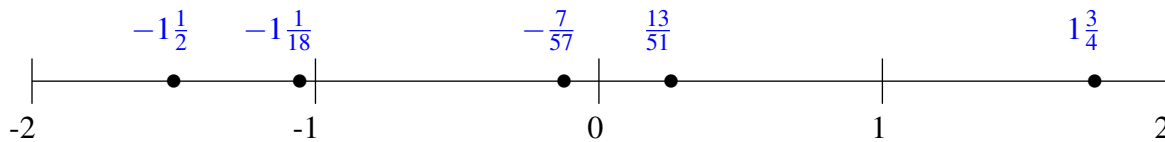
Classification de Fractions (B) Solutions

À l'aide des droites numériques, classifiez chaque série de fractions ci-dessous en ordre croissant.

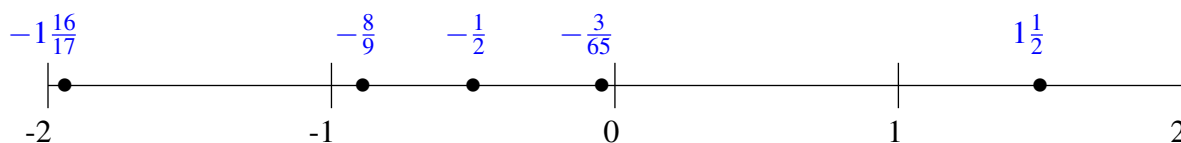
$$-1\frac{1}{3}, -1\frac{64}{65}, 1\frac{1}{4}, -\frac{1}{3}, \frac{2}{3}$$



$$1\frac{3}{4}, \frac{13}{51}, -1\frac{1}{2}, -\frac{7}{57}, -1\frac{1}{18}$$



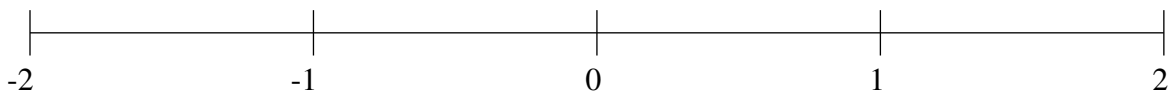
$$-1\frac{16}{17}, 1\frac{1}{2}, -\frac{8}{9}, -\frac{3}{65}, -\frac{1}{2}$$



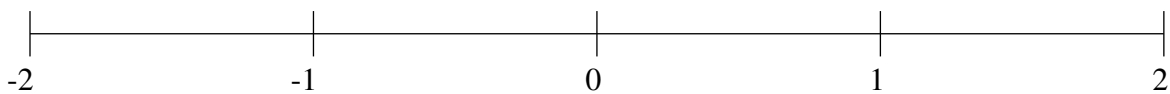
Classification de Fractions (C)

À l'aide des droites numériques, classifiez chaque série de fractions ci-dessous en ordre croissant.

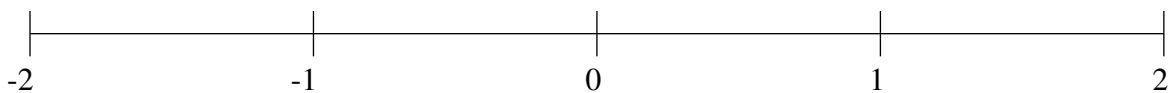
$$1\frac{89}{100}, -\frac{1}{5}, 1\frac{15}{29}, -1\frac{21}{25}, -\frac{23}{27}$$



$$-1\frac{6}{13}, -\frac{1}{3}, 1\frac{9}{11}, \frac{7}{16}, 1\frac{3}{7}$$



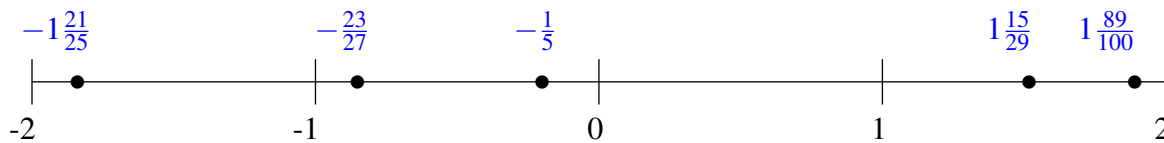
$$-1\frac{1}{2}, -\frac{11}{82}, -\frac{13}{20}, \frac{5}{8}, 1\frac{6}{7}$$



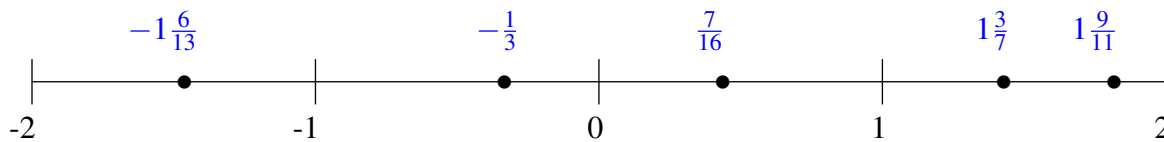
Classification de Fractions (C) Solutions

À l'aide des droites numériques, classifiez chaque série de fractions ci-dessous en ordre croissant.

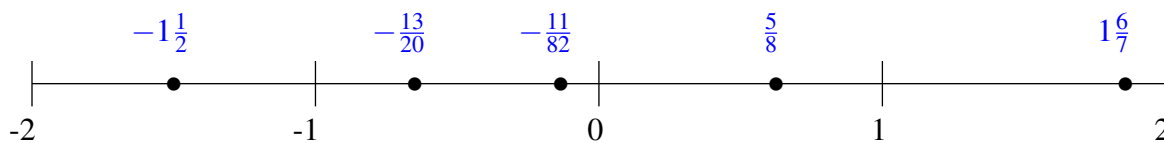
$$1\frac{89}{100}, -\frac{1}{5}, 1\frac{15}{29}, -1\frac{21}{25}, -\frac{23}{27}$$



$$-1\frac{6}{13}, -\frac{1}{3}, 1\frac{9}{11}, \frac{7}{16}, 1\frac{3}{7}$$



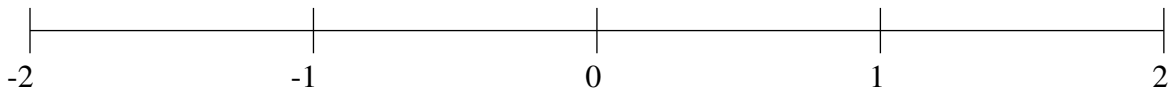
$$-1\frac{1}{2}, -\frac{11}{82}, -\frac{13}{20}, \frac{5}{8}, 1\frac{6}{7}$$



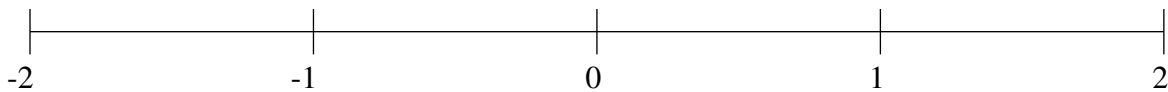
Classification de Fractions (D)

À l'aide des droites numériques, classifiez chaque série de fractions ci-dessous en ordre croissant.

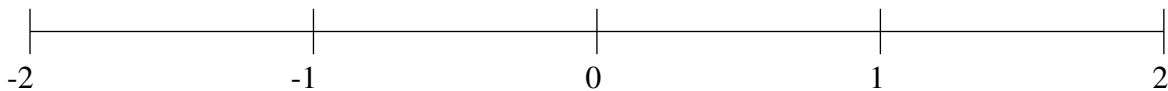
$$\frac{25}{28}, -1\frac{1}{6}, 1\frac{3}{14}, -1\frac{25}{33}, -\frac{1}{18}$$



$$\frac{3}{7}, 1\frac{5}{7}, -\frac{19}{21}, -1\frac{3}{7}, -1\frac{41}{48}$$



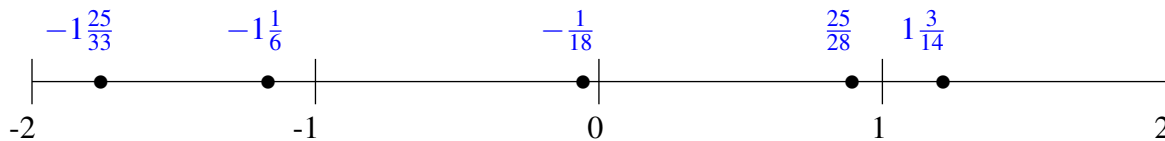
$$\frac{77}{97}, 1\frac{17}{36}, -1\frac{13}{70}, -\frac{3}{5}, -\frac{1}{5}$$



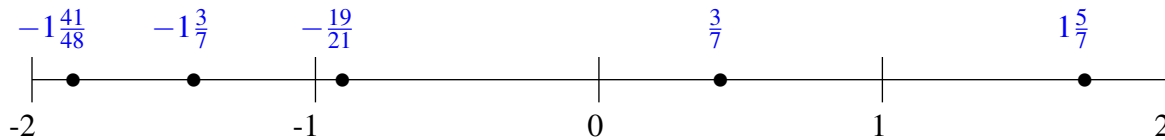
Classification de Fractions (D) Solutions

À l'aide des droites numériques, classifiez chaque série de fractions ci-dessous en ordre croissant.

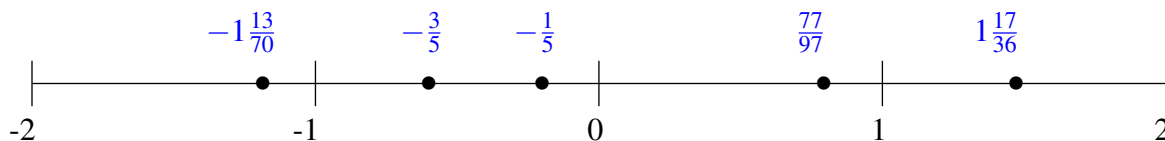
$$\frac{25}{28}, -1\frac{1}{6}, 1\frac{3}{14}, -1\frac{25}{33}, -\frac{1}{18}$$



$$\frac{3}{7}, 1\frac{5}{7}, -\frac{19}{21}, -1\frac{3}{7}, -1\frac{41}{48}$$



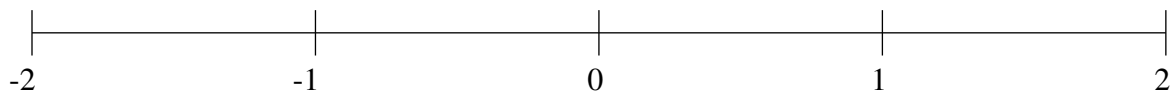
$$\frac{77}{97}, 1\frac{17}{36}, -1\frac{13}{70}, -\frac{3}{5}, -\frac{1}{5}$$



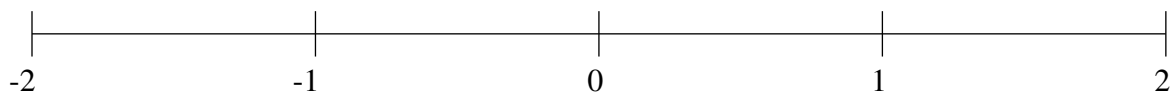
Classification de Fractions (E)

À l'aide des droites numériques, classifiez chaque série de fractions ci-dessous en ordre croissant.

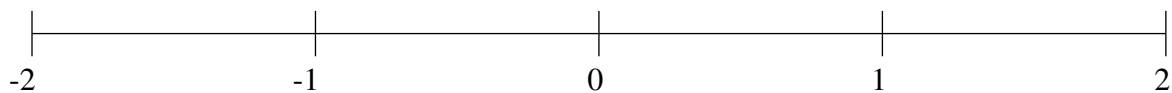
$$-\frac{12}{29}, -\frac{17}{18}, -1\frac{19}{26}, 1\frac{25}{26}, 1\frac{12}{35}$$



$$\frac{1}{3}, \frac{3}{4}, -\frac{53}{74}, -1\frac{3}{4}, -1\frac{1}{4}$$



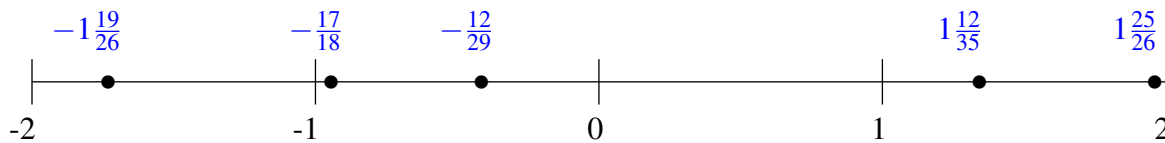
$$1\frac{2}{5}, 1\frac{3}{4}, -1\frac{2}{11}, \frac{17}{30}, \frac{3}{19}$$



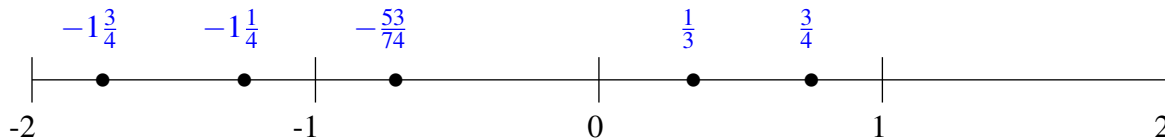
Classification de Fractions (E) Solutions

À l'aide des droites numériques, classifiez chaque série de fractions ci-dessous en ordre croissant.

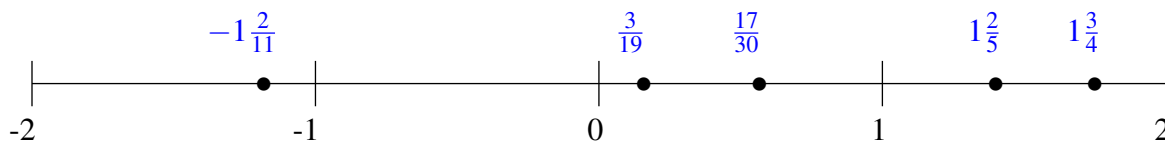
$$-\frac{12}{29}, -\frac{17}{18}, -1\frac{19}{26}, 1\frac{25}{26}, 1\frac{12}{35}$$



$$\frac{1}{3}, \frac{3}{4}, -\frac{53}{74}, -1\frac{3}{4}, -1\frac{1}{4}$$



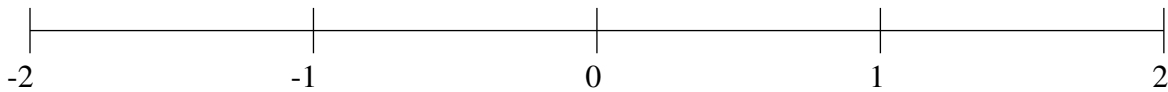
$$1\frac{2}{5}, 1\frac{3}{4}, -1\frac{2}{11}, \frac{17}{30}, \frac{3}{19}$$



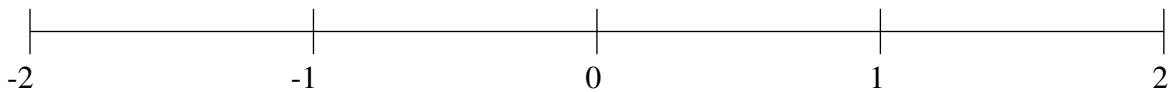
Classification de Fractions (F)

À l'aide des droites numériques, classifiez chaque série de fractions ci-dessous en ordre croissant.

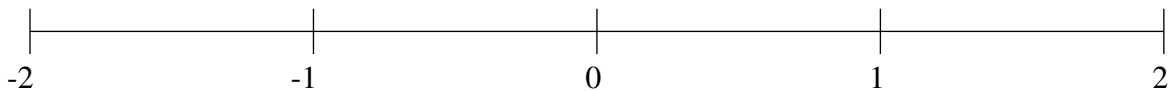
$$\frac{1}{2}, 1\frac{2}{3}, -\frac{6}{7}, \frac{1}{7}, -1\frac{2}{11}$$



$$1\frac{1}{7}, -\frac{1}{2}, \frac{21}{26}, 1\frac{39}{55}, -\frac{8}{9}$$



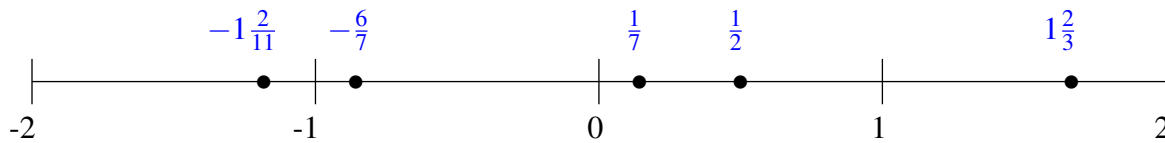
$$-\frac{11}{35}, \frac{40}{99}, 1\frac{2}{3}, \frac{4}{5}, -\frac{2}{3}$$



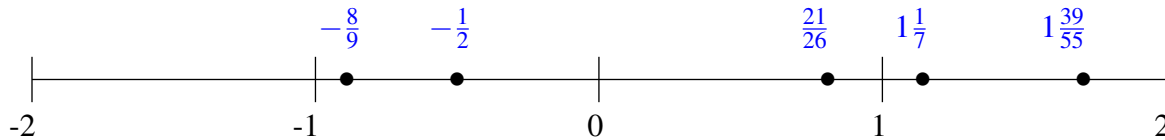
Classification de Fractions (F) Solutions

À l'aide des droites numériques, classifiez chaque série de fractions ci-dessous en ordre croissant.

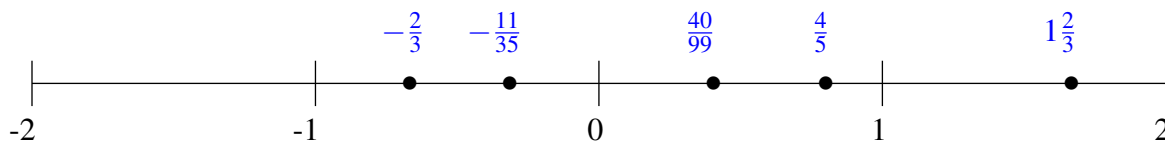
$$\frac{1}{2}, 1\frac{2}{3}, -\frac{6}{7}, \frac{1}{7}, -1\frac{2}{11}$$



$$1\frac{1}{7}, -\frac{1}{2}, \frac{21}{26}, 1\frac{39}{55}, -\frac{8}{9}$$



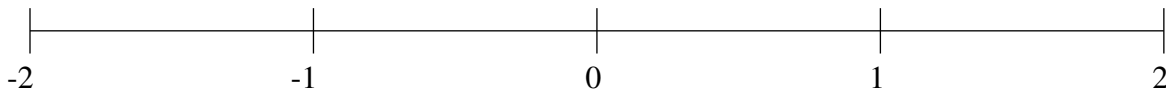
$$-\frac{11}{35}, \frac{40}{99}, 1\frac{2}{3}, \frac{4}{5}, -\frac{2}{3}$$



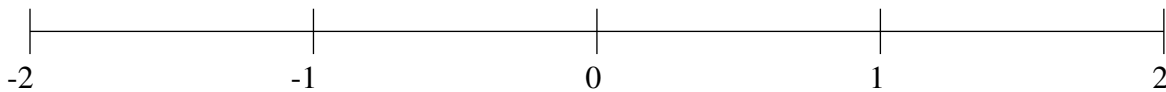
Classification de Fractions (G)

À l'aide des droites numériques, classifiez chaque série de fractions ci-dessous en ordre croissant.

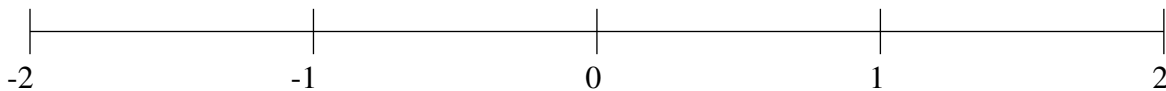
$$\frac{17}{59}, \frac{67}{85}, -1\frac{1}{8}, -\frac{1}{3}, 1\frac{1}{2}$$



$$1\frac{7}{8}, -\frac{31}{36}, \frac{2}{3}, \frac{1}{4}, -1\frac{1}{2}$$



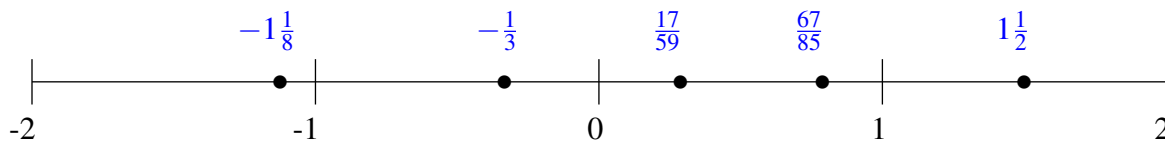
$$-1\frac{26}{47}, \frac{1}{28}, -1\frac{1}{7}, \frac{3}{8}, 1\frac{35}{48}$$



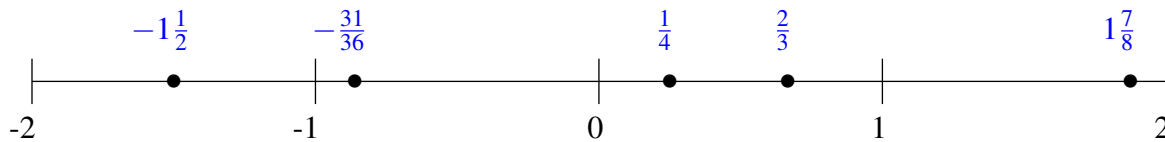
Classification de Fractions (G) Solutions

À l'aide des droites numériques, classifiez chaque série de fractions ci-dessous en ordre croissant.

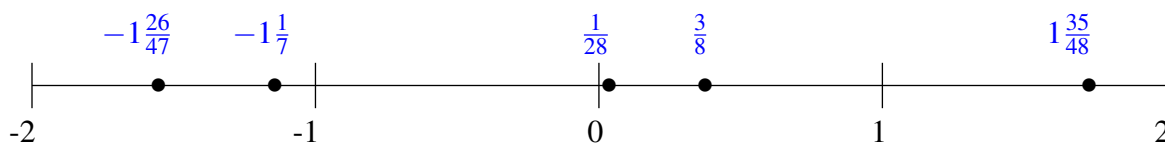
$$\frac{17}{59}, \frac{67}{85}, -1\frac{1}{8}, -\frac{1}{3}, 1\frac{1}{2}$$



$$1\frac{7}{8}, -\frac{31}{36}, \frac{2}{3}, \frac{1}{4}, -1\frac{1}{2}$$



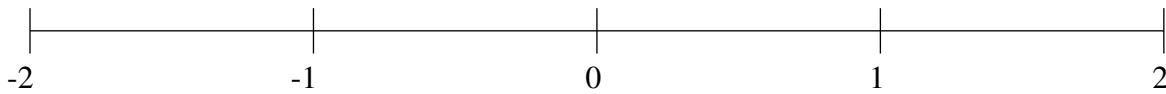
$$-1\frac{26}{47}, \frac{1}{28}, -1\frac{1}{7}, \frac{3}{8}, 1\frac{35}{48}$$



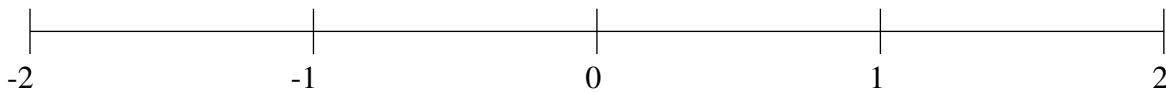
Classification de Fractions (H)

À l'aide des droites numériques, classifiez chaque série de fractions ci-dessous en ordre croissant.

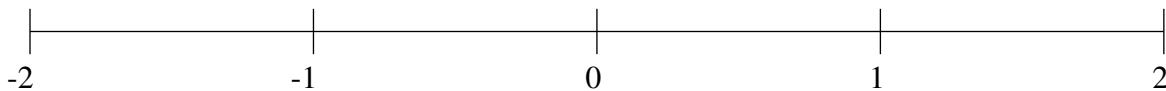
$$-\frac{2}{19}, -1\frac{16}{89}, \frac{83}{84}, 1\frac{2}{3}, -\frac{1}{2}$$



$$\frac{2}{5}, \frac{1}{14}, 1\frac{12}{13}, 1\frac{3}{13}, -\frac{2}{3}$$



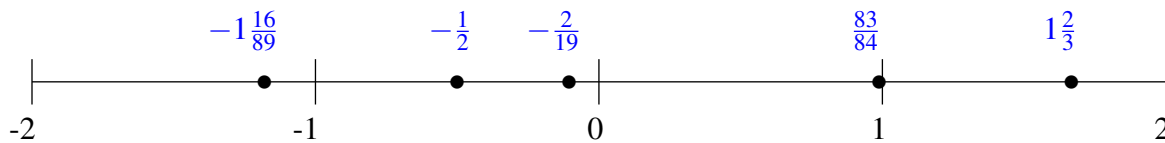
$$-1\frac{10}{11}, 1\frac{2}{3}, \frac{31}{71}, -1\frac{5}{47}, -\frac{1}{2}$$



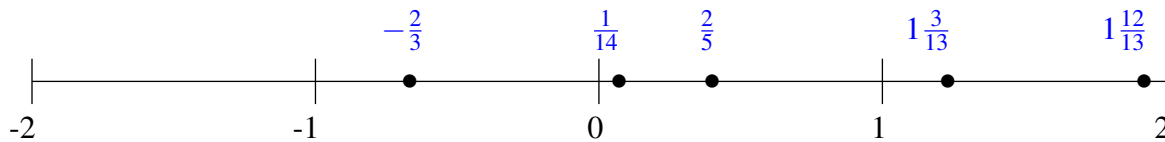
Classification de Fractions (H) Solutions

À l'aide des droites numériques, classifiez chaque série de fractions ci-dessous en ordre croissant.

$$-\frac{2}{19}, -1\frac{16}{89}, \frac{83}{84}, 1\frac{2}{3}, -\frac{1}{2}$$



$$\frac{2}{5}, \frac{1}{14}, 1\frac{12}{13}, 1\frac{3}{13}, -\frac{2}{3}$$



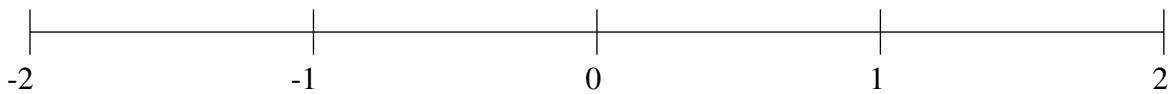
$$-1\frac{10}{11}, 1\frac{2}{3}, \frac{31}{71}, -1\frac{5}{47}, -\frac{1}{2}$$



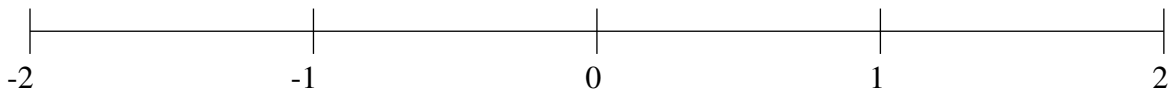
Classification de Fractions (I)

À l'aide des droites numériques, classifiez chaque série de fractions ci-dessous en ordre croissant.

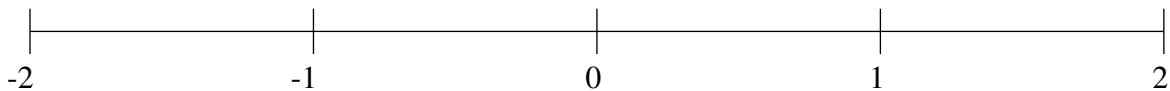
$$1\frac{13}{14}, 1\frac{1}{6}, -\frac{1}{4}, -1\frac{22}{61}, \frac{1}{14}$$



$$-\frac{7}{43}, 1\frac{5}{12}, -1\frac{13}{18}, \frac{5}{6}, -\frac{3}{4}$$



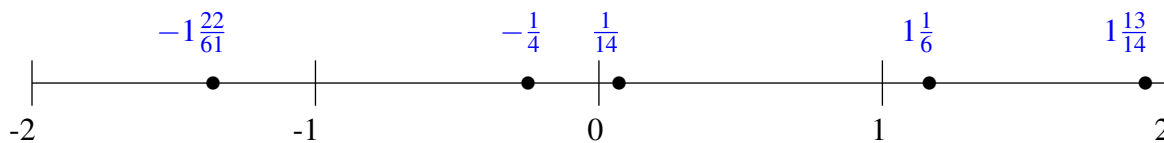
$$-\frac{7}{10}, 1\frac{1}{10}, \frac{1}{3}, -\frac{6}{23}, -1\frac{1}{3}$$



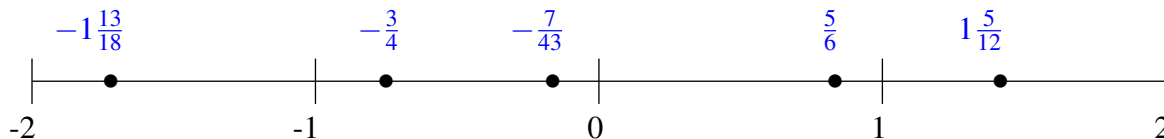
Classification de Fractions (I) Solutions

À l'aide des droites numériques, classifiez chaque série de fractions ci-dessous en ordre croissant.

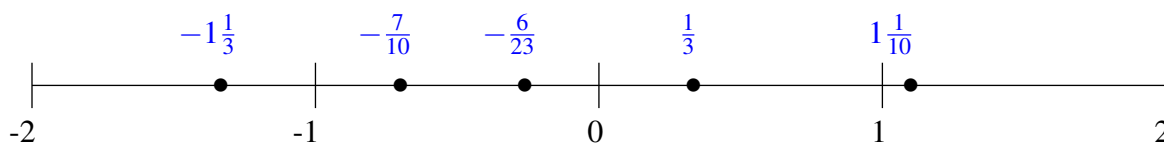
$$1\frac{13}{14}, 1\frac{1}{6}, -\frac{1}{4}, -1\frac{22}{61}, \frac{1}{14}$$



$$-\frac{7}{43}, 1\frac{5}{12}, -1\frac{13}{18}, \frac{5}{6}, -\frac{3}{4}$$



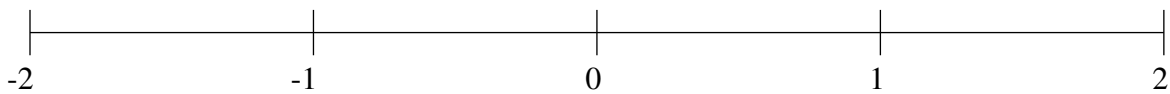
$$-\frac{7}{10}, 1\frac{1}{10}, \frac{1}{3}, -\frac{6}{23}, -1\frac{1}{3}$$



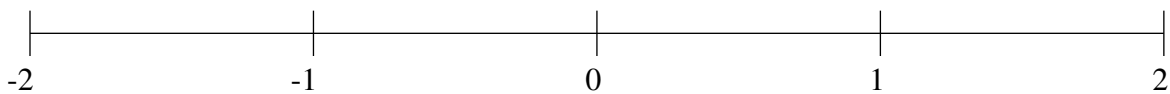
Classification de Fractions (J)

À l'aide des droites numériques, classifiez chaque série de fractions ci-dessous en ordre croissant.

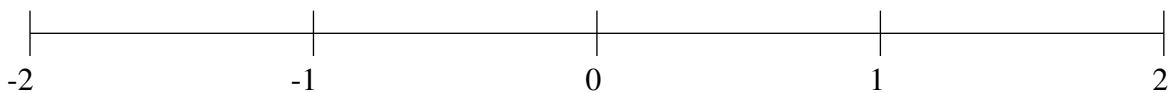
$$1\frac{2}{3}, \frac{19}{25}, \frac{3}{8}, 1\frac{5}{16}, -1\frac{25}{82}$$



$$\frac{3}{4}, 1\frac{11}{43}, -\frac{27}{83}, -1\frac{2}{3}, 1\frac{2}{3}$$



$$1\frac{7}{11}, 1\frac{21}{95}, \frac{2}{3}, -1\frac{1}{2}, -1\frac{1}{5}$$



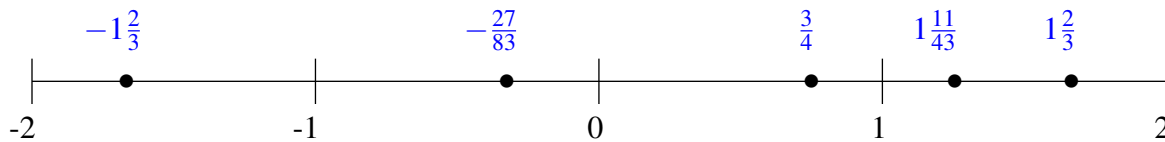
Classification de Fractions (J) Solutions

À l'aide des droites numériques, classifiez chaque série de fractions ci-dessous en ordre croissant.

$$1\frac{2}{3}, \frac{19}{25}, \frac{3}{8}, 1\frac{5}{16}, -1\frac{25}{82}$$



$$\frac{3}{4}, 1\frac{11}{43}, -\frac{27}{83}, -1\frac{2}{3}, 1\frac{2}{3}$$



$$1\frac{7}{11}, 1\frac{21}{95}, \frac{2}{3}, -1\frac{1}{2}, -1\frac{1}{5}$$

