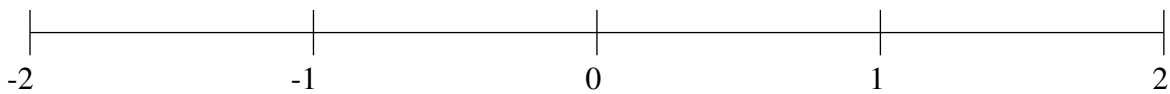


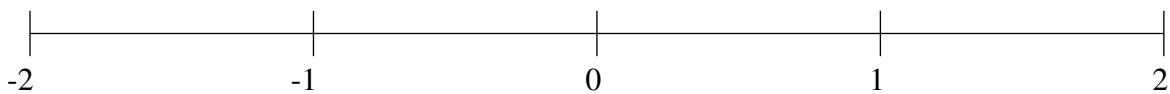
Classification de Fractions (F)

À l'aide des droites numériques, classifiez chaque série de fractions ci-dessous en ordre croissant.

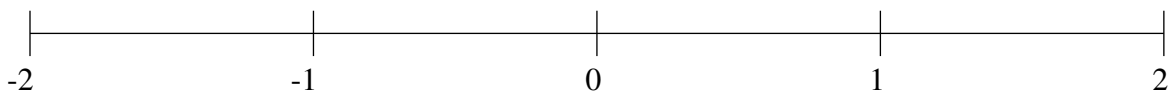
$$\frac{1}{2}, 1\frac{2}{3}, -\frac{6}{7}, \frac{1}{7}, -1\frac{2}{11}$$



$$1\frac{1}{7}, -\frac{1}{2}, \frac{21}{26}, 1\frac{39}{55}, -\frac{8}{9}$$



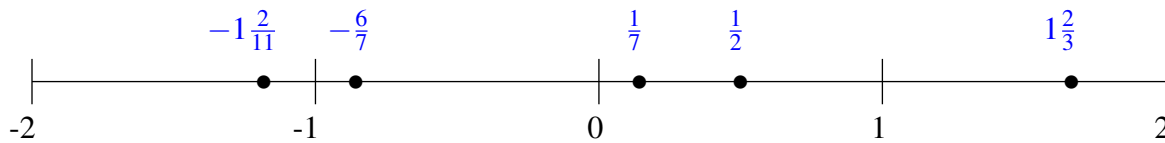
$$-\frac{11}{35}, \frac{40}{99}, 1\frac{2}{3}, \frac{4}{5}, -\frac{2}{3}$$



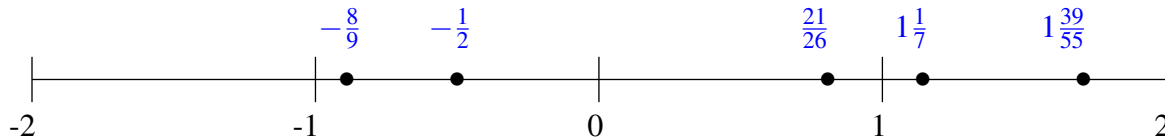
Classification de Fractions (F) Solutions

À l'aide des droites numériques, classifiez chaque série de fractions ci-dessous en ordre croissant.

$$\frac{1}{2}, 1\frac{2}{3}, -\frac{6}{7}, \frac{1}{7}, -1\frac{2}{11}$$



$$1\frac{1}{7}, -\frac{1}{2}, \frac{21}{26}, 1\frac{39}{55}, -\frac{8}{9}$$



$$-\frac{11}{35}, \frac{40}{99}, 1\frac{2}{3}, \frac{4}{5}, -\frac{2}{3}$$

